

Name: _____

PACK

1

LEVEL

A

WEEK

3

TANGY TUESDAY

We the People

TANGY TUESDAY PUZZLE PACK!

Fun brain puzzles that make you smarter!



Name: _____

DIGICROSS

PACK

1

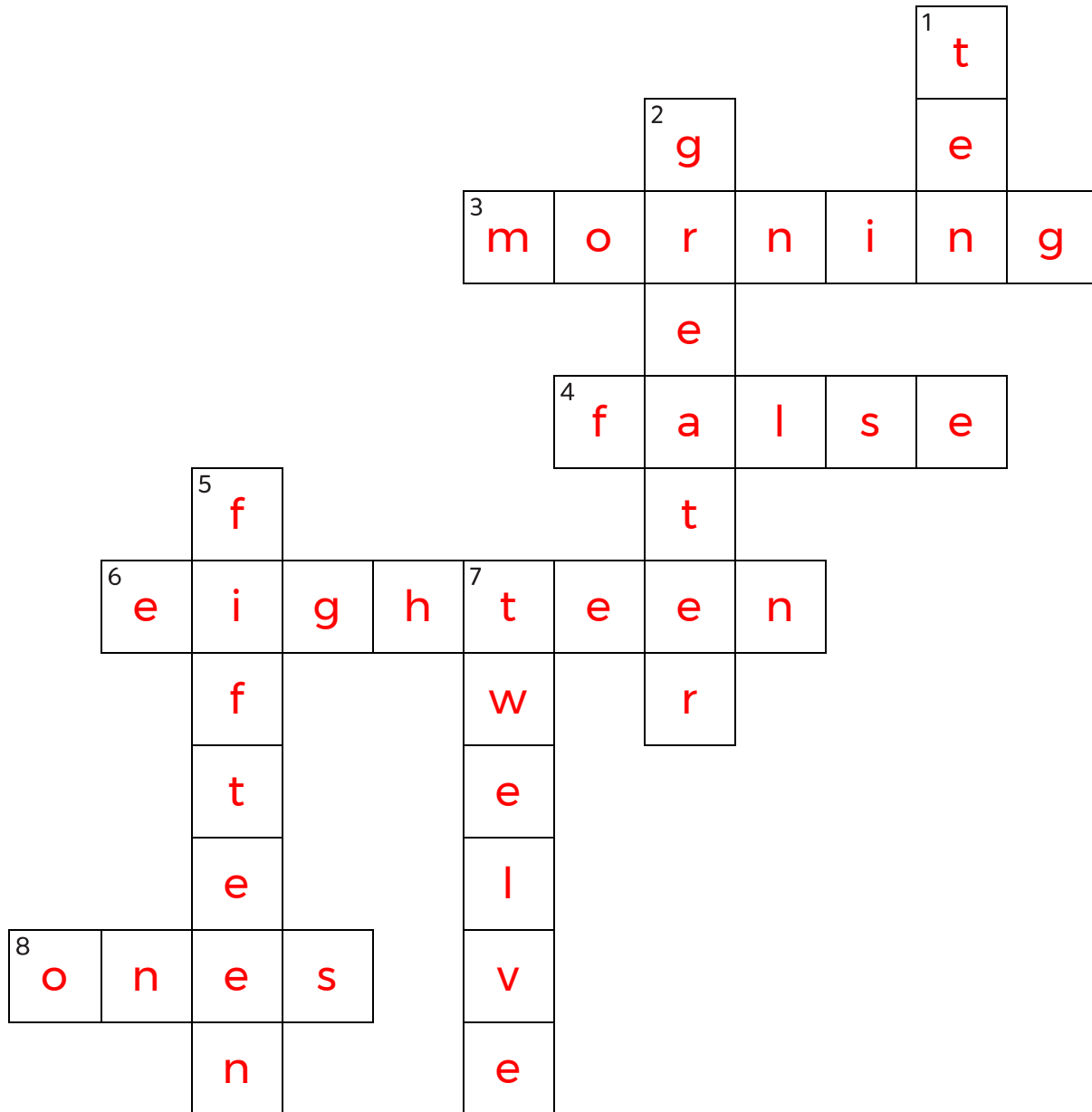
LEVEL

A

WEEK

3

Complete the crossword by filling in a word that fits each clue.



twelve

morning

greater

ones

false

ten

fifteen

eighteen

ACROSS

3. kids wake up in the ____
4. $2 + 3 = 8 - 4$
6. $9 + 9$
8. 17 has 7 ____

DOWN

1. $11 - 1$
2. 33 is ____ than 30
5. $10 + 5$
7. $8 + 4$

Name: _____

SNAKE

PACK

1

LEVEL

A

WEEK

3

Fill in each blank box in order, combining the numbers from the previous two boxes.

9		7	-6	1		5	-1	4
-1		+3		+6		-4		+3
8		4		7		9		7
-4		+1		-6		+7		+2
4	-1	3		1	+1	2		9

9	-6	3	-2	1	+5	6	-2	4
								+5
1	+9	10	-7	3	+3	6		9
-6								-2
7	+4	3	-3	6	+1	5	-2	7

Name: _____

PACK

1

LEVEL


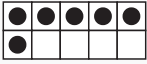
A

WEEK


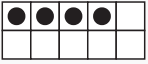
3

NUMTANGA


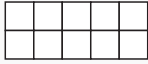
In each empty box, write the matching value between adjacent cards.

8	
	one

1

7	
	fifteen


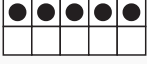
4

2	
	nine



0

15


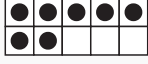
9

0	
	seven

5

5	
	two



8

9	
	eight



3

2



10

15	
	three

6

6	
	twenty

20

10	
	zero

Name: _____

KAKOOMA

PACK

1

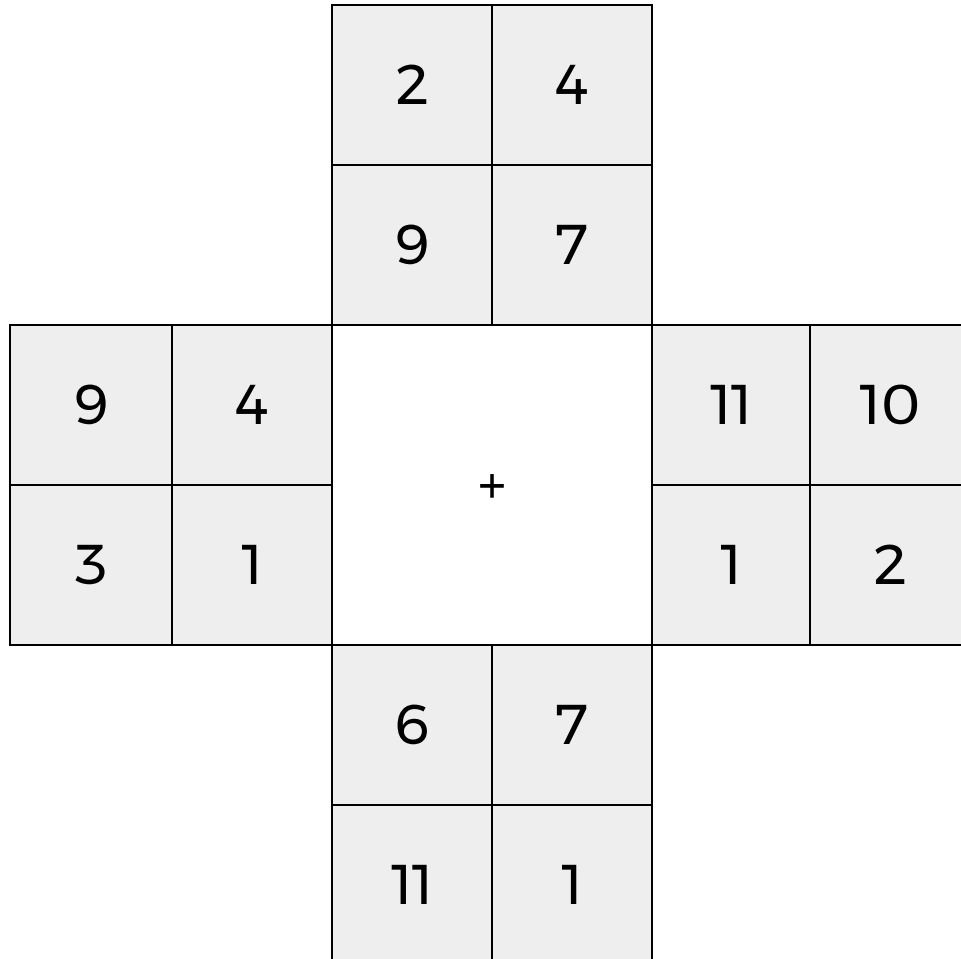
LEVEL

A

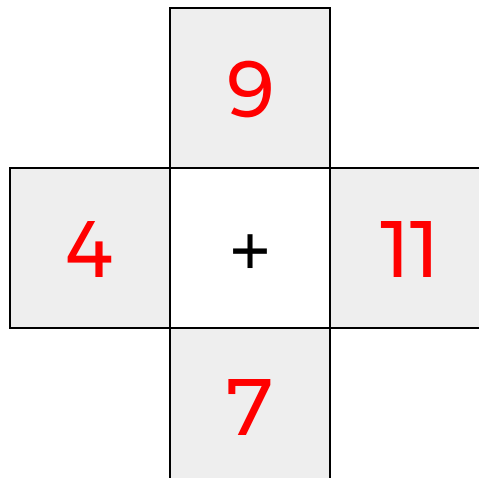
WEEK

3


In each 4-number group, find the one number that is the sum of two other numbers.
Use all 4 sums to create a final puzzle, then solve for the final answer.



Final Puzzle



Final Answer



Name: _____

EQUATO

PACK

1

LEVEL

A

WEEK

3

Fill in the empty boxes to make every horizontal and vertical equation correct.
Read equations left to right and top to bottom. Use every number in the bank once.

2 3 4 5 6

3	=	7	-	4
+		-		=
2	+	6	=	8
=		=		-
5	-	1	=	4