

Name: \_\_\_\_\_

PACK

1

LEVEL

B

WEEK

1

# TANGY TUESDAY

WELCOME BACK

# TANGY TUESDAY PUZZLE PACK!

*Fun brain puzzles that make you smarter!*



Name: \_\_\_\_\_

# DIGICROSS

PACK

1


LEVEL

B

WEEK

1

Complete the crossword by filling in a word that fits each clue.



thirds      forty-two      six      eight      less      twenty      ones      twenty-five      shorter      five

## ACROSS

1. 545 is \_\_\_\_ than 575
4.  $428 = 400 + \text{____} + 8$
6.  $30 + 10 + 2$
9.  $11 + \text{____} = 16$
10. 3 rows of 2 plates are \_\_\_\_ plates

## DOWN

2.  $12 - 4$
3. 1 quarter = \_\_\_\_ ¢
5. 1 inch is \_\_\_\_ than 1 yard
7. 3 \_\_\_\_ make a whole
8.  $367 = 3 \text{ hundreds} + 6 \text{ tens} + 7 \text{ ____}$

Name: \_\_\_\_\_

# SNAKE

PACK

1

LEVEL

B

WEEK

1

Fill in each blank box in order, combining the numbers from the previous two boxes.

9		4	+16	20		5	+11	16
+11		-3		-12		-13		+2
20		7		8		18		18
-17		-7		-5		+1		-17
3	+11	14		3	+14	17		1

9	-7	2	+2	4	-3	1	+19	20
								-3

12	+6	6	-6	12	+10	2	-15	17
-4								
8	-1	7	-3	4	-1	3	-2	1

Name: \_\_\_\_\_

PACK

1

LEVEL


B

WEEK


1

# NUMTANGA


In each empty box, write the matching value between adjacent cards.

<b>19</b>	<b>20+1</b>
	<b>eighteen</b>

17

<b>16</b>	<b>10+7</b>
	<b>twenty eight</b>


16

<b>18</b>	<b>20+9</b>
	<b>eleven</b>


19

12


29

<b>28</b>	<b>10+9</b>
	<b>fifteen</b>

11

<b>11</b>	<b>10+2</b>
	<b>twenty one</b>


21

<b>21</b>	<b>20+4</b>
	<b>twenty nine</b>


15

13


24

<b>14</b>	<b>10+5</b>
	<b>sixteen</b>

14

<b>13</b>	<b>20+8</b>
	<b>fourteen</b>

18

<b>15</b>	<b>10+8</b>
	<b>twelve</b>

Name: \_\_\_\_\_

# KAKOOMA

PACK

1

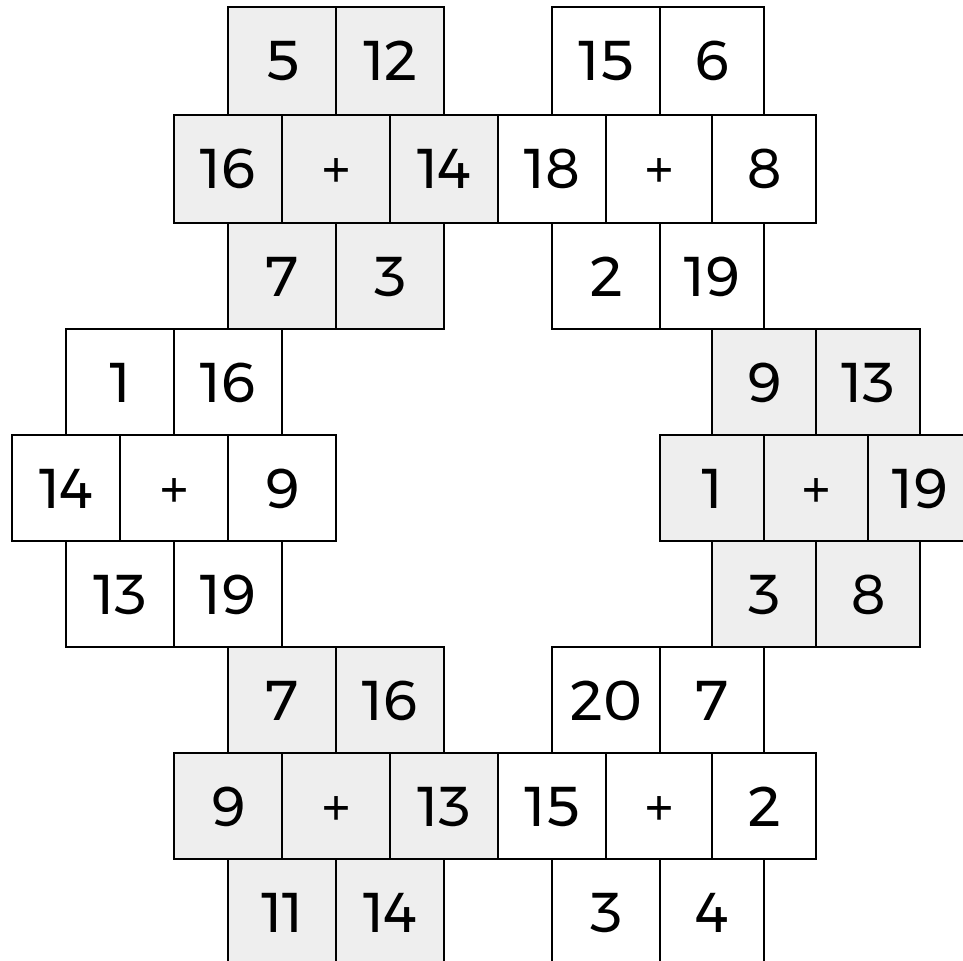
LEVEL

B

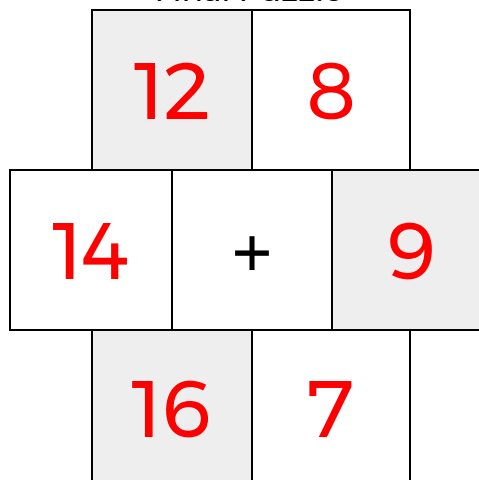
WEEK

1


In each 6-number group, find the one number that is the sum of two other numbers.  
Use all 6 sums to create a final puzzle, then solve for the final answer.



Final Puzzle



Final Answer



Name: \_\_\_\_\_

# EQUATO

PACK

1

LEVEL

B

WEEK

1

Fill in the empty boxes to make every horizontal and vertical equation correct.  
Read equations left to right and top to bottom. Use every number in the bank once.

1      2      3      4      5      6

3	=	8	-	7	+	2
=		+		=		-
6	+	4	-	9	=	1
+		-		+		=
5	+	3	-	2	=	6
-		=		-		-
8	=	9	+	4	-	5