

Name: _____

PACK

1

LEVEL

B

WEEK

2

TANGY TUESDAY



Name: _____

DIGICROSS

PACK

1

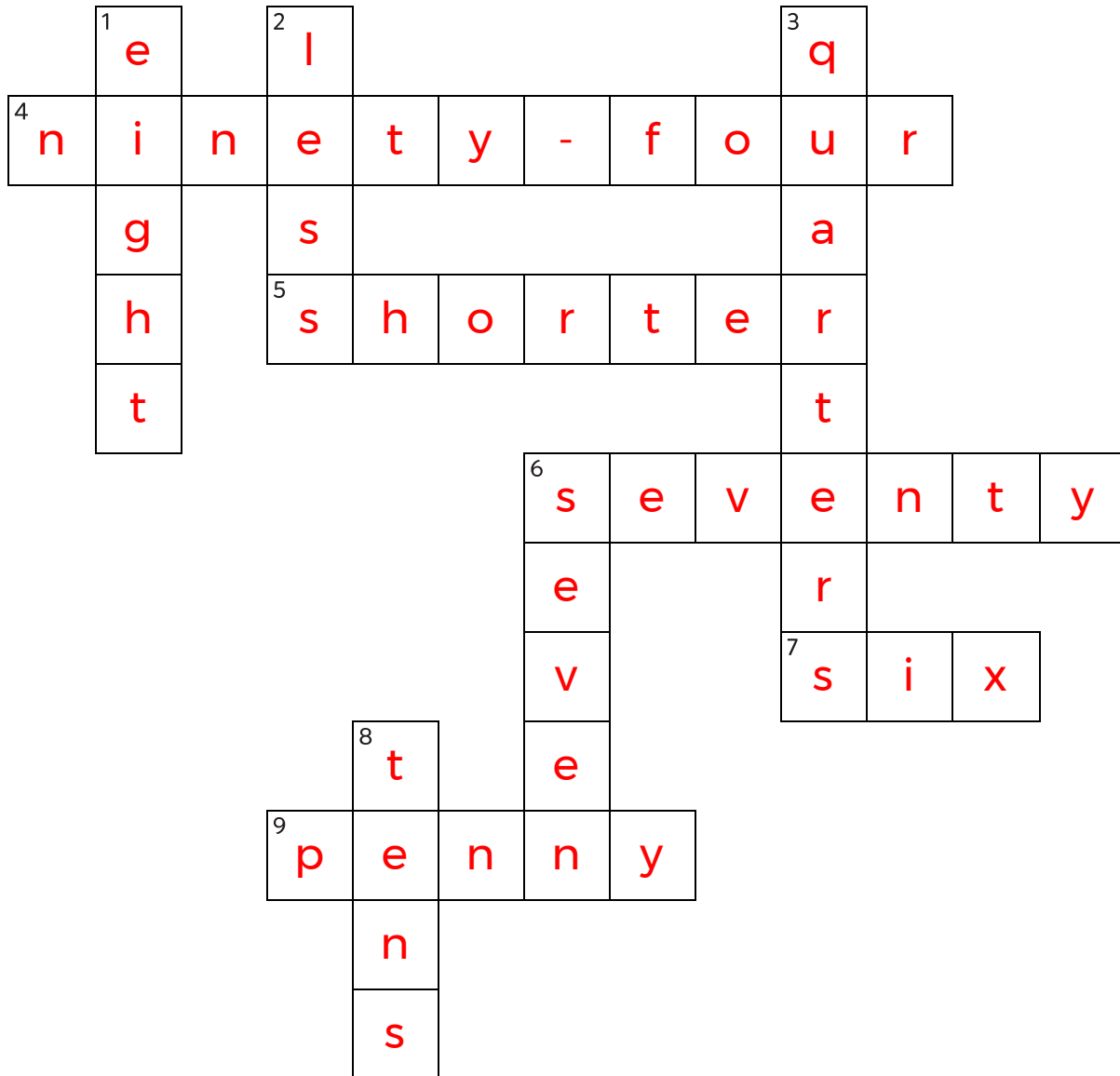
LEVEL

B

WEEK

2

Complete the crossword by filling in a word that fits each clue.



six shorter tens quarters seven penny ninety-four seventy eight less

ACROSS

4. $60 + 30 + 4$
5. 1 inch is ____ than 1 yard
6. $976 = 900 + \text{____} + 6$
7. $11 - 5$
9. 1 ____ = \$.01

DOWN

1. 2 rows of 4 plums are ____ plums
2. 961 is ____ than 965
3. 4 ____ make a whole
6. $8 + \text{____} = 15$
8. $187 = 1 \text{ hundred} + 8 \text{ ____} + 7 \text{ ones}$

Name: _____

SNAKE

PACK

1

LEVEL

B

WEEK

2

Fill in each blank box in order, combining the numbers from the previous two boxes.

4	+1	5	+8	13	+7	20	-4	16
---	----	---	----	----	----	----	----	----

-6

20	+9	11	-3	14	+3	11	+1	10
----	----	----	----	----	----	----	----	----

-14

6	+5	11	-8	3	+13	16	-12	4
---	----	----	----	---	-----	----	-----	---

12		19	-3	16		10	-4	6
-11		+17		-10		+3		-2
1		2		6		7		4
+15		-9		+6		-11		+3
16	-5	11		12	+6	18		7

Name: _____

PACK

1

LEVEL


B

WEEK


2

NUMTANGA


In each empty box, write the matching value between adjacent cards.

17	10+1
	twenty four

24

15	10+8
	twelve


15

14	10+5
	sixteen


11

12


14

18	20+9
	eleven

16

16	10+7
	twenty eight


28

13	20+8
	fourteen


29

17


13

12	10+4
	nineteen

19

19	20+1
	eighteen

21

11	10+2
	twenty one

Name: _____

KAKOOMA

PACK

1

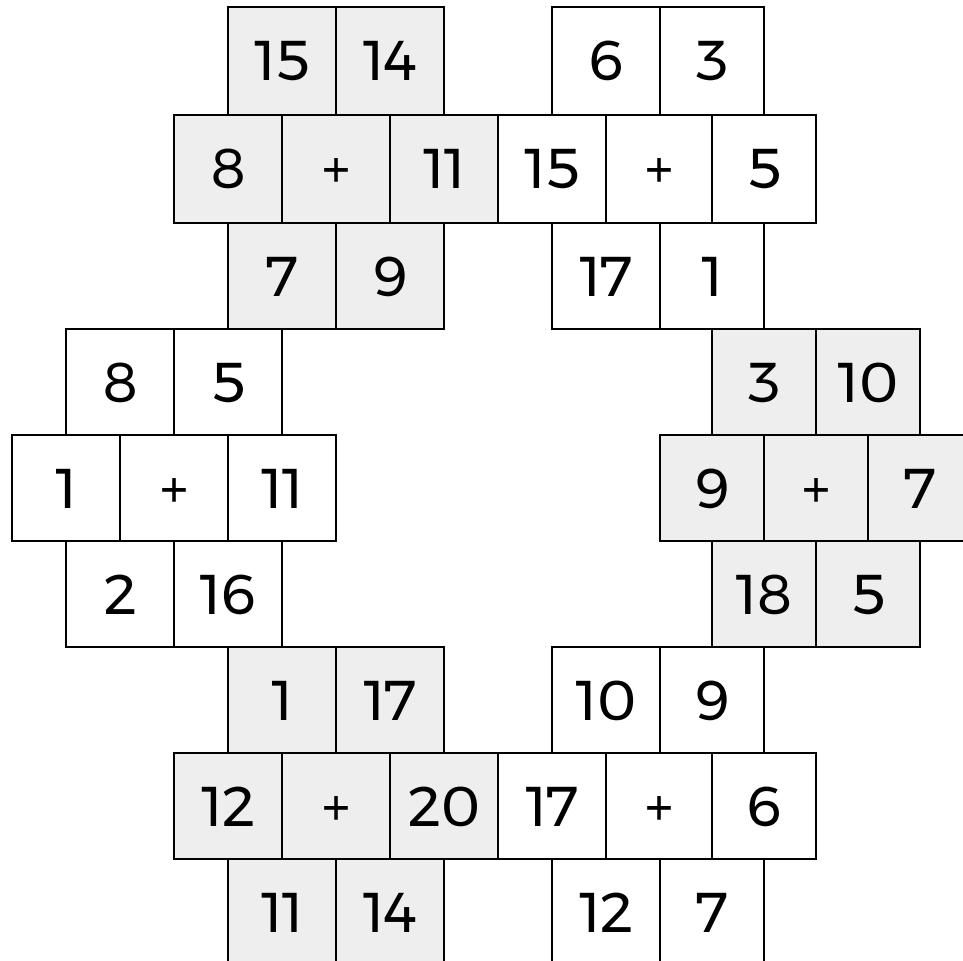
LEVEL

B

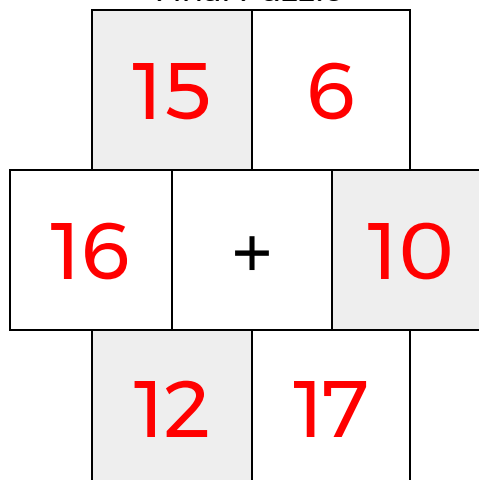
WEEK

2

In each 6-number group, find the one number that is the sum of two other numbers.
Use all 6 sums to create a final puzzle, then solve for the final answer.



Final Puzzle



Final Answer

16

Name: _____

EQUATO

PACK

1

LEVEL

B

WEEK

2

Fill in the empty boxes to make every horizontal and vertical equation correct.
Read equations left to right and top to bottom. Use every number in the bank once.

1 2 3 4 5 6

9	-	5	=	6	-	2
+		-		+		=
1	+	3	+	4	=	8
-		=		-		-
7	-	6	=	8	-	7
=		-		=		+
3	=	4	-	2	+	1

