

Name: _____

PACK

1

LEVEL

B

WEEK

6

TANGY TUESDAY

TANGY TUESDAY PUZZLE PACK!

Fun brain puzzles that make you smarter!



Name: _____

PACK

LEVEL

WEEK


1

B

6

DIGICROSS

Complete the crossword by filling in a word that fits each clue.



eight six shorter less one three forty-two fifty hundreds thirds

ACROSS

- 1 inch is ____ than 1 foot
- 2 rows of 4 plums are ____ plums
- 1 penny = ____ ¢
- $30 + 10 + 2$
- 961 is ____ than 965

DOWN

- $15 + \underline{\quad} = 18$
- $753 = 700 + \underline{\quad} + 3$
- $596 = 5 \underline{\quad} + 9 \text{ tens} + 6 \text{ ones}$
- 3 ____ make a whole
- $11 - 5$

Name: _____

PACK

LEVEL

WEEK

1

B

6

SNAKE

Fill in each blank box in order, combining the numbers from the previous two boxes.

5		-9			+1	
+4		+1		+8	-10	-8
-8		+8		+4	+16	+15
	+4			-15		16

14	-6			+2		+3	
		+1		-17			+10
	-8					-13	
+9				-1		+8	
	-5		+14			-8	3

Name: _____

PACK

LEVEL

WEEK


1


B


6


NUMTANGA


In each empty box, write the matching value between adjacent cards.


17	10+1
	twenty four


18	20+9
	eleven


15	10+8
	twelve


12	10+4
	nineteen

24	10+6
	thirteen

29	10+3
	seventeen

16	10+7
	twenty eight

21	20+4
	twenty nine

19	20+1
	eighteen

Name: _____

PACK

LEVEL

WEEK

1

B

6

KAKOOMA

In each 6-number group, find the one number that is the sum of two other numbers.
Use all 6 sums to create a final puzzle, then solve for the final answer.

8	1	15	17		
2	+	17	9	+	7
19	13	3	4		
7	18	14	9		
16	+	9	6	+	17
3	14	13	15		
20	18	12	7		
8	+	6	10	+	13
9	11	1	16		

Final Puzzle

	+	

Final Answer

--

Name: _____

PACK
1

LEVEL
B

WEEK
6

EQUATO

Fill in the empty boxes to make every horizontal and vertical equation correct.
Read equations left to right and top to bottom. Use every number in the bank once.

1 2 3 4 5 6

4	+		-		=	
+		=		+		=
9	+		-	8	=	7
-		+		-		+
5	+	2	-	6	=	1
=		-		=		-
8	-	7	+		=	