

Name: _____

PACK

1

LEVEL

C

WEEK

2

TANGY TUESDAY



Fun brain puzzles that make you smarter!

Name: _____

DIGICROSS

PACK

1

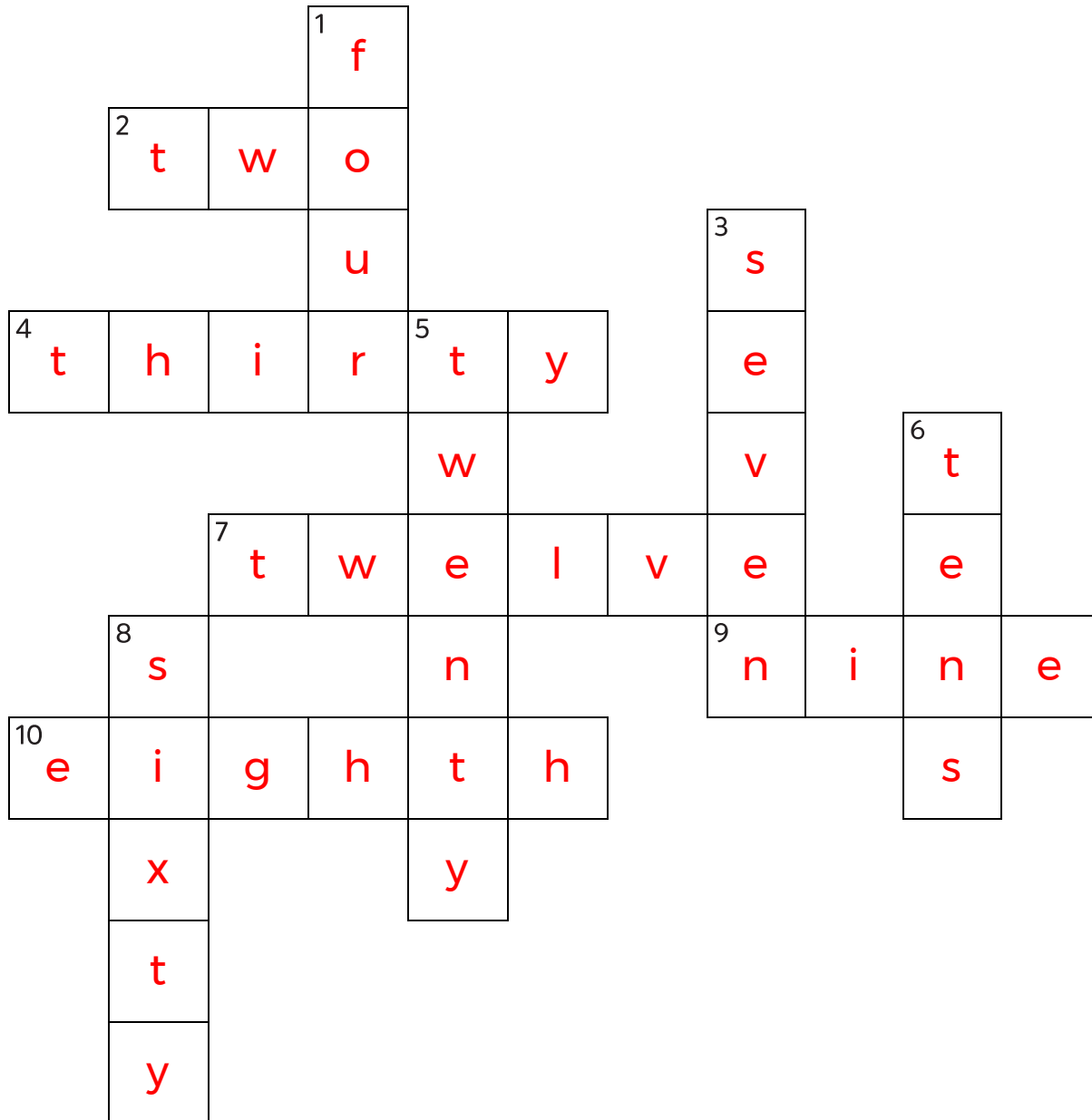
LEVEL

C

WEEK

2

Complete the crossword by filling in a word that fits each clue.



nine two tens thirty sixty seven twelve eighth twenty four

ACROSS

2. 23 is closest to ____ tens
4. 1:30 = 1 hour + ____ minutes
7. 3 groups with 4 in each group
9. area of square with side of 3
10. one of 8 equal parts

DOWN

1. 6 groups of 4 = ____ groups of 6
3. 14 divided into 2 equal groups
5. $936 - 511 = 400 + \underline{\hspace{1cm}} + 5$
6. $3 \times 20 = 3 \times 2 \underline{\hspace{1cm}}$
8. $422 + 345 = 700 + \underline{\hspace{1cm}} + 7$

Name: _____

SNAKE

PACK

1

LEVEL

C

WEEK

2

Fill in each blank box in order, combining the numbers from the previous two boxes.

45	-4	41
----	----	----

		+5
--	--	----

4	-42	46
---	-----	----

-3		
----	--	--

1	+32	33	-4	29
---	-----	----	----	----

46	-16	30	+15	45
----	-----	----	-----	----

+1				-2
----	--	--	--	----

45		19	-24	43
----	--	----	-----	----

+16		+4		
-----	--	----	--	--

	23	-17		6
--	----	-----	--	---

12		
----	--	--

-3		
----	--	--

9		
---	--	--

-7		
----	--	--

2	+12	14
---	-----	----

42	-16	26
----	-----	----

+11		+16
-----	--	-----

31		42
----	--	----

+17		+6
-----	--	----

	48	-14
--	----	-----

20	-3	17
----	----	----

+16		-7
-----	--	----

4		10
---	--	----

-30		+10
-----	--	-----

		20
--	--	----

Name: _____

PACK

1

LEVEL

C

WEEK

2

NUMTANGA

In each empty box, write the matching value between adjacent cards.

97	40+9
	sixty eight

49

97

87	60+4
	forty nine

87

78

56	70+3
	forty six

46

73	90+7
	thirty nine

73

39

78	80+3
	seventy three

68

83

64	60+8
	ninety five

95

95	70+8
	fifty six

56

54	50+6
	sixty four

54

49	90+5
	fifty four

Name: _____

KAKOOMA

PACK

1

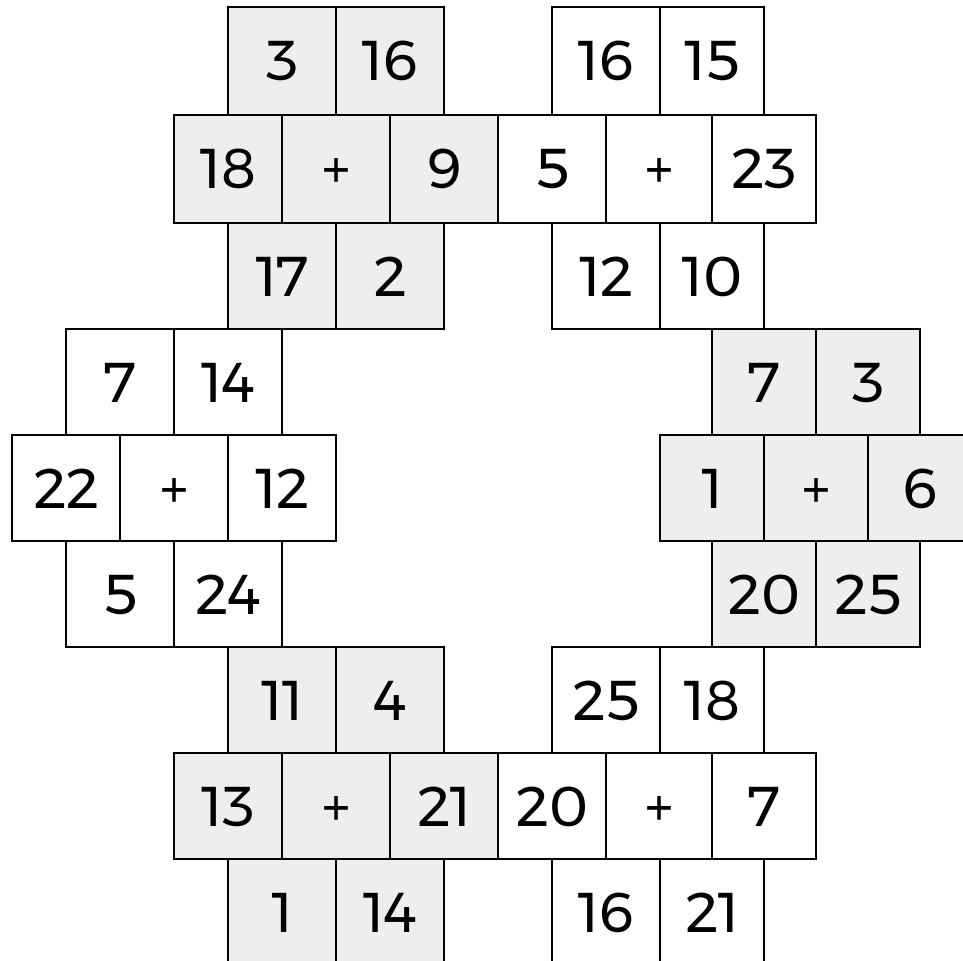
LEVEL

C

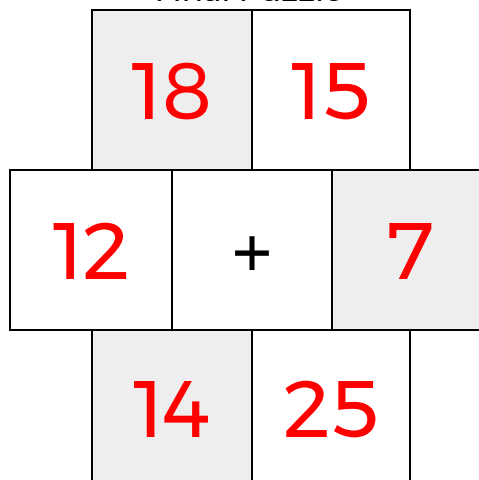
WEEK

2

In each 6-number group, find the one number that is the sum of two other numbers.
Use all 6 sums to create a final puzzle, then solve for the final answer.



Final Puzzle



Final Answer

25

Name: _____

EQUATO

PACK

1

LEVEL

C

WEEK

2

Fill in the empty boxes to make every horizontal and vertical equation correct.
Read equations left to right and top to bottom. Use every number in the bank once.

1 2 3 4 5 6 7 8

9	-	1	-	2	=	6
-		+		=		+
4	+	8	-	5	=	7
-		-		+		-
3	+	6	-	1	=	8
=		=		-		=
2	=	3	+	4	-	5

