

Name: _____

PACK

1

LEVEL

E

WEEK

5

TANGY TUESDAY



TANGY TUESDAY PUZZLE PACK!

Fun brain puzzles that make you smarter!

Name: _____


PACK
1

LEVEL
E

WEEK
5

DIGICROSS

Complete the crossword by filling in a word that fits each clue.



thirty power sixth seventeen forty twenty tenth less ninths seventy

ACROSS

- 3. $6/8 \times 16$ is ____ than 16
- 5. $20 - 4 \times 2 + 5$
- 7. $384 \div 12 =$ ____ -two
- 9. $.14 + .26 =$ ____ hundredths
- 10. $1/3 \div 2 =$ one ____

DOWN

- 1. $100 = 10$ to the 2nd ____
- 2. $1/5$ of 100
- 4. $7.0 =$ ____ tenths
- 6. $1/3 + 1/9 = 4$ ____
- 8. $.01$ is $1/10$ of one ____

Name: _____

PACK

LEVEL

WEEK

1

E

5

SNAKE

Fill in each blank box in order, combining the numbers from the previous two boxes.

2	$\times 5$		$+5$		$\div 3$		$\times 2$	
								$+30$
	$\div 3$		$\times 8$		$+12$	36		
-72							$\div 5$	
	$\times 9$		$\div 8$		$+40$		$\times 4$	

7			$\div 7$			$\div 2$	
$\times 3$	$+45$		$\times 4$		-10	$\times 5$	
$+6$	$\times 2$		-27		$\times 6$	-14	
	$\div 3$			$\div 3$		6	

Name: _____

PACK

LEVEL

WEEK


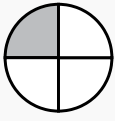
1


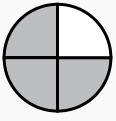
E

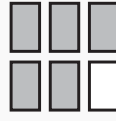
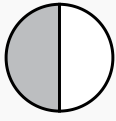
5


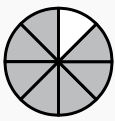
NUMTANGA


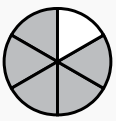
In each empty box, write the matching value between adjacent cards.


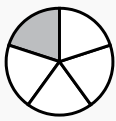
$\frac{4}{5}$	
	three eighths



$\frac{7}{8}$	
	four fifths


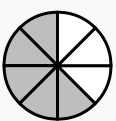
$\frac{5}{8}$	
	three fourths


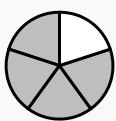
$\frac{1}{3}$	
	five sixths

$\frac{3}{8}$	
	two thirds

$\frac{1}{6}$	
	one half

$\frac{1}{5}$	
	five eighths

$\frac{1}{8}$	
	seven eighths

$\frac{5}{6}$	
	one sixth

Name: _____

PACK

LEVEL

WEEK

1

E

5

KAKOOMA

In each 8-number group, find the one number that is the sum of two other numbers.
Use all 8 sums to create a final puzzle, then solve for the final answer.

5	16	18	10	11	19	20	1	3
8	+	24	4	+	20	25	+	8
15	12	22	17	5	13	4	6	15
8	24	2				24	3	10
4	+	18				12	+	25
25	15	13				11	9	5
23	10	12	17	25	8	10	2	8
20	+	25	22	+	10	16	+	21
1	6	18	11	13	20	15	3	4

Final Puzzle

	+	

Final Answer

--

Name: _____

PACK

LEVEL

WEEK

1

E

5

EQUATO

Fill in the empty boxes to make every horizontal and vertical equation correct.
Read equations left to right and top to bottom. Use every number in the bank once.

1 2 3 4 5 6 7 8 9

6	÷	2	+	9	-	8	=	
÷		=		=		+		+
3	=	7	+		×		-	9
=		-		×		+		-
	+	3	-	4	+		=	
+		×		-		-		=
5	-	1	+		÷	4	=	6
-		-		-		=		×
	+	2	-		-	7	=	1