

Name: _____

PACK

1

LEVEL

K

WEEK

2

TANGY TUESDAY



Name: _____

DIGICROSS

PACK

1

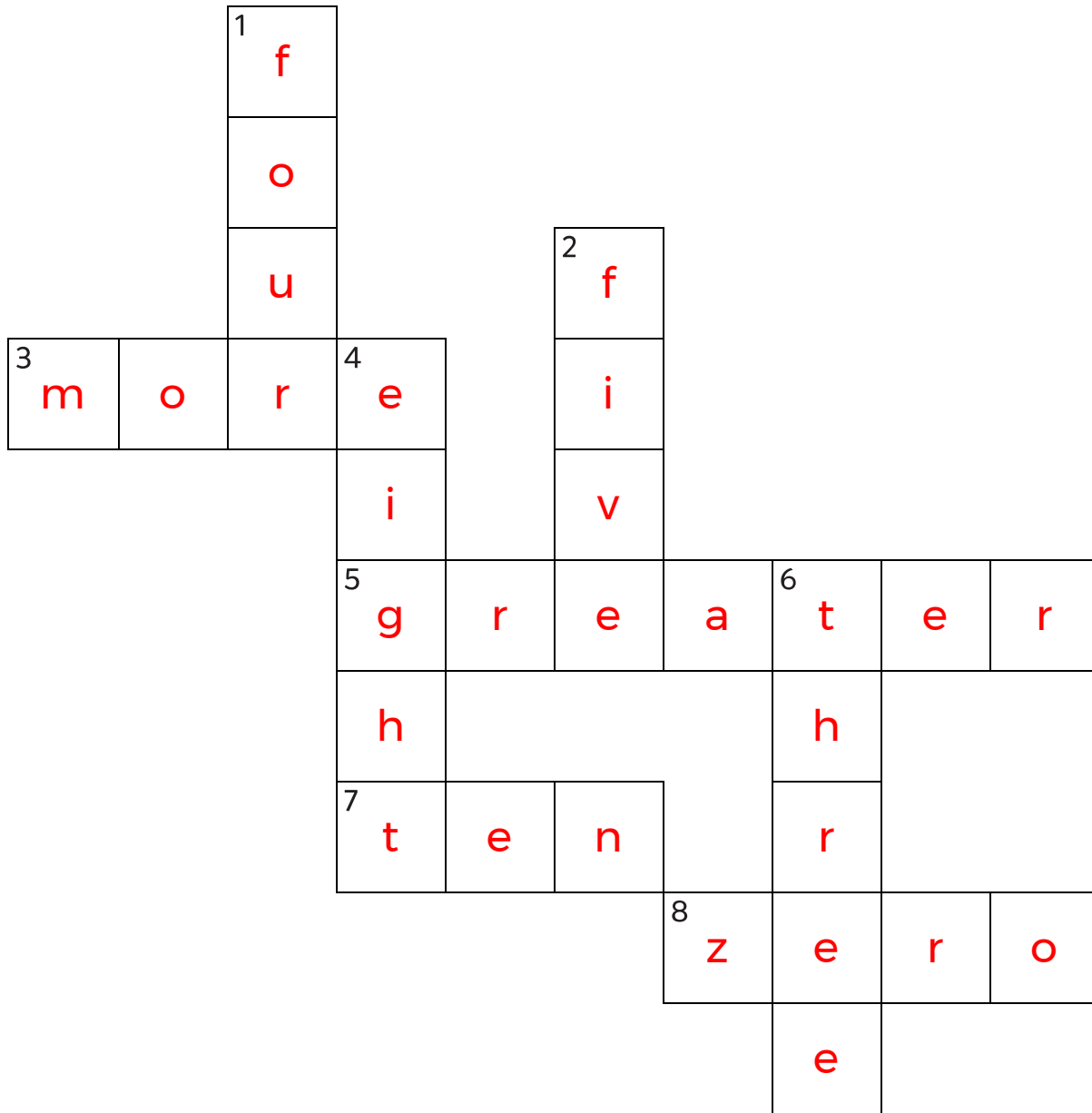
LEVEL

K

WEEK

2

Complete the crossword by filling in a word that fits each clue.



ten

three

greater

more

zero

five

four

eight

ACROSS

3. the opposite of less
5. 5 is ____ than 4
7. $5 + 5$
8. 0

DOWN

1. a square has ____ sides
2. 2, 3, 4, ____, 6
4. two plus ____ makes ten
6. 1 less than 4

Name: _____

SNAKE

PACK

1

LEVEL

K

WEEK

2

Fill in each blank box in order, combining the numbers from the previous two boxes.

3	+1	4	-3	1	+2	3	+1	4
								-2
3	+1	4	-2	2	+2	4		
-2								
5	+4	1	-2	3	-1	4	+3	1

4			2	+1	3	4	-2	2
-1			-1			-2	+1	-1
3			3			1	3	1
+1			-2			+1	-2	+3
4	+1	5			2	+3	5	4

Name: _____

PACK

1

LEVEL



K

WEEK



2

NUMTANGA



In each empty box, write the matching value between adjacent cards.

1	
	ten

1

7	
	fifteen



4

3	
	four


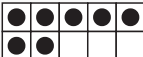
2

7



20

5	
	two

8

9	
	eight



10

10	
	zero



5

9



0

0	
	seven

3

15	
	three

6

8	
	one

Name: _____

KAKOOMA

PACK

1

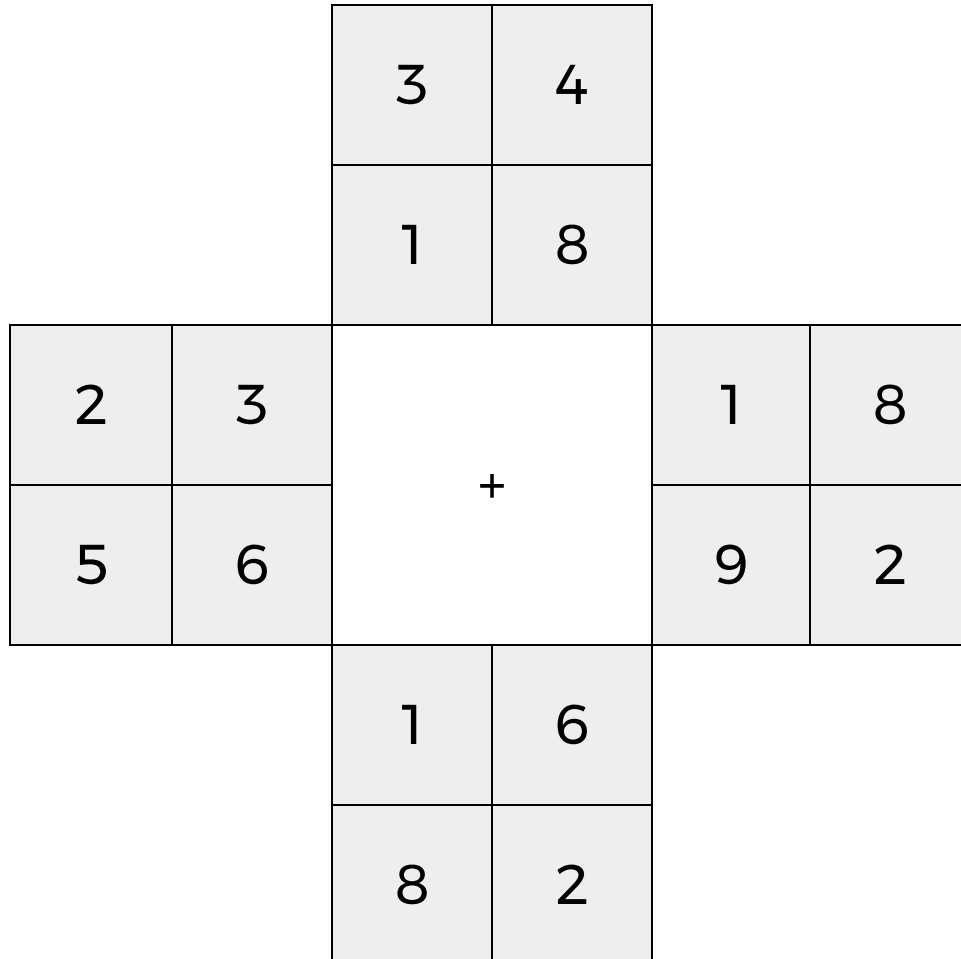
LEVEL

K

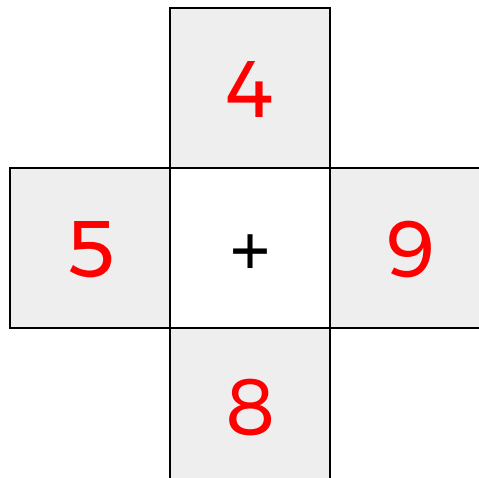
WEEK

2


In each 4-number group, find the one number that is the sum of two other numbers.
Use all 4 sums to create a final puzzle, then solve for the final answer.



Final Puzzle



Final Answer



Name: _____

EQUATO

PACK

1

LEVEL

K

WEEK

2

Fill in the empty boxes to make every horizontal and vertical equation correct.
Read equations left to right and top to bottom. Use every number in the bank once.

1	2	3	4	5
1	=	3	-	2
+		=		+
4	=	5	-	1
=		-		=
5	-	2	=	3

