

Name: _____

PACK

1

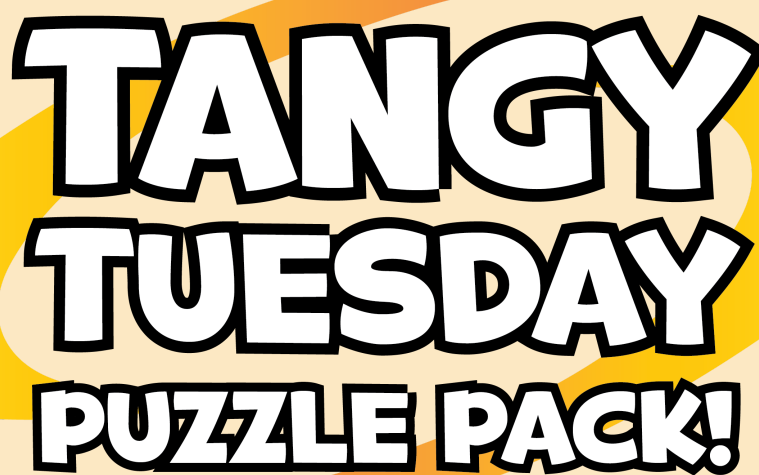
LEVEL

A

WEEK

4

TANGY TUESDAY

The graphic features the text 'TANGY TUESDAY PUZZLE PACK!' in a large, bold, white font with a thick black outline. The text is centered within a yellow oval shape that has a slight 3D effect with an orange shadow. The entire graphic is set against a light orange background with a decorative border of autumn leaves in shades of yellow and orange. At the bottom left, there is a small illustration of a brown basket filled with yellow and orange leaves.

TANGY TUESDAY PUZZLE PACK!

Fun brain puzzles that make you smarter!

Name: _____

DIGICROSS

PACK

1


LEVEL

A

WEEK

4

Complete the crossword by filling in a word that fits each clue.



sixteen

moon

two

ten

true

eighteen

eight

less

ACROSS

2. 27 has ____ tens
4. $9 + 9$
6. 78 is ____ than 79
8. $6 + 2 = 9 - 1$

DOWN

1. the ____ shines at night
3. $10 + 6$
5. $5 + 3$
7. $11 - 1$

Name: _____

SNAKE

PACK

1

LEVEL

A

WEEK

4

Fill in each blank box in order, combining the numbers from the previous two boxes.

3	+5				+3		-6	
		-3		-2				-1
	+3						+4	
-1				+2		+4		
	+3		-5				-6	3

4	+1		-1		+4		-4	
								+4
	-8		+5		-5		+1	
+8								
	-6		+4		-6		+7	8

Name: _____

PACK

1

LEVEL



A



WEEK



4



NUMTANGA


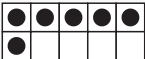
In each empty box, write the matching value between adjacent cards.


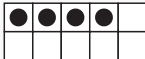
2	
	nine



5	
	two



0	
	seven



15	
	three

8	
	one

7	
	fifteen

3	
	four

10	
	zero

4	
	six

Name: _____

KAKOOMA

PACK

1

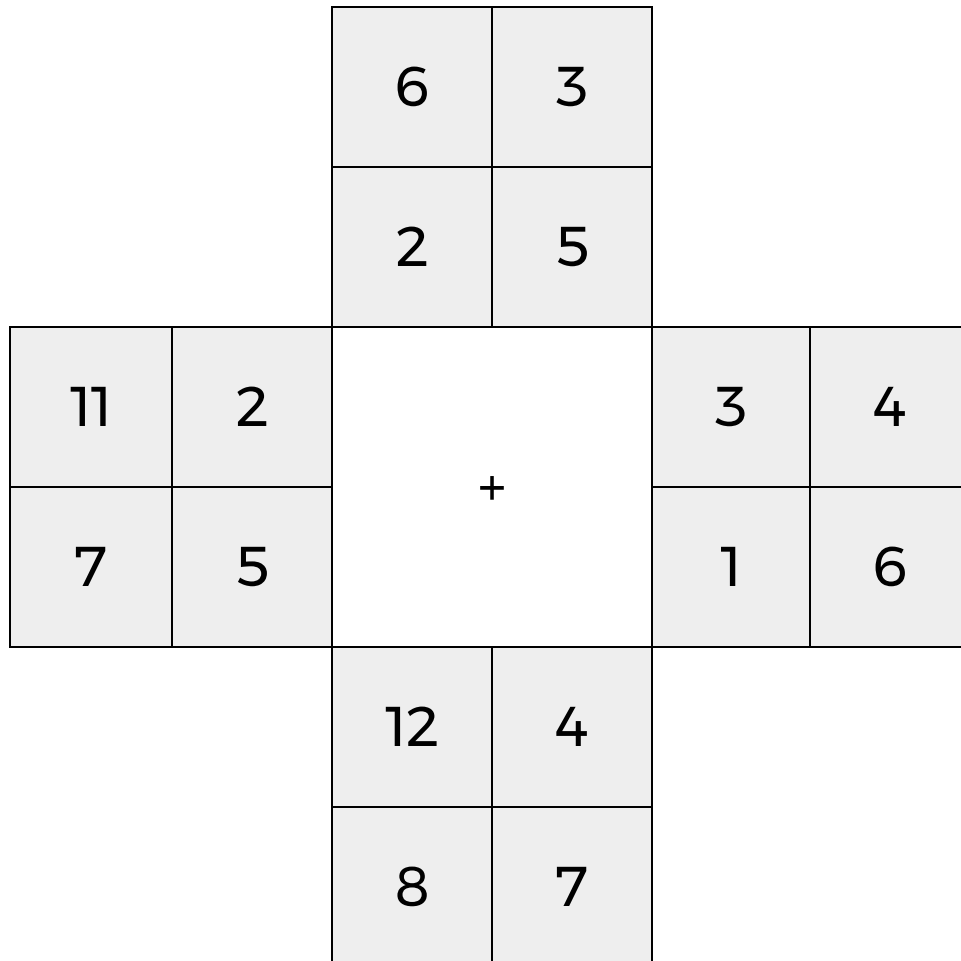
LEVEL

A

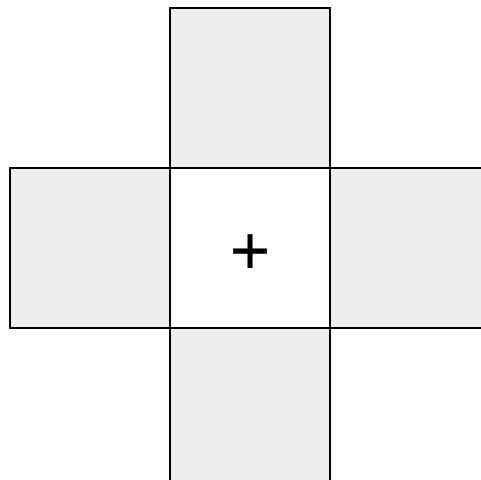
WEEK

4

In each 4-number group, find the one number that is the sum of two other numbers.
Use all 4 sums to create a final puzzle, then solve for the final answer.



Final Puzzle



Final Answer

--

Name: _____

EQUATO

PACK

1

LEVEL

A

WEEK

4

Fill in the empty boxes to make every horizontal and vertical equation correct.
Read equations left to right and top to bottom. Use every number in the bank once.

2 3 4 5 6

	=	8	-	
+		-		=
1	+		=	7
=		=		-
	-		=	2