

Name: _____

PACK

1

LEVEL

A

WEEK

4

TANGY TUESDAY

TANGY TUESDAY PUZZLE PACK!

Fun brain puzzles that make you smarter!

Name: _____

DIGICROSS

PACK

1

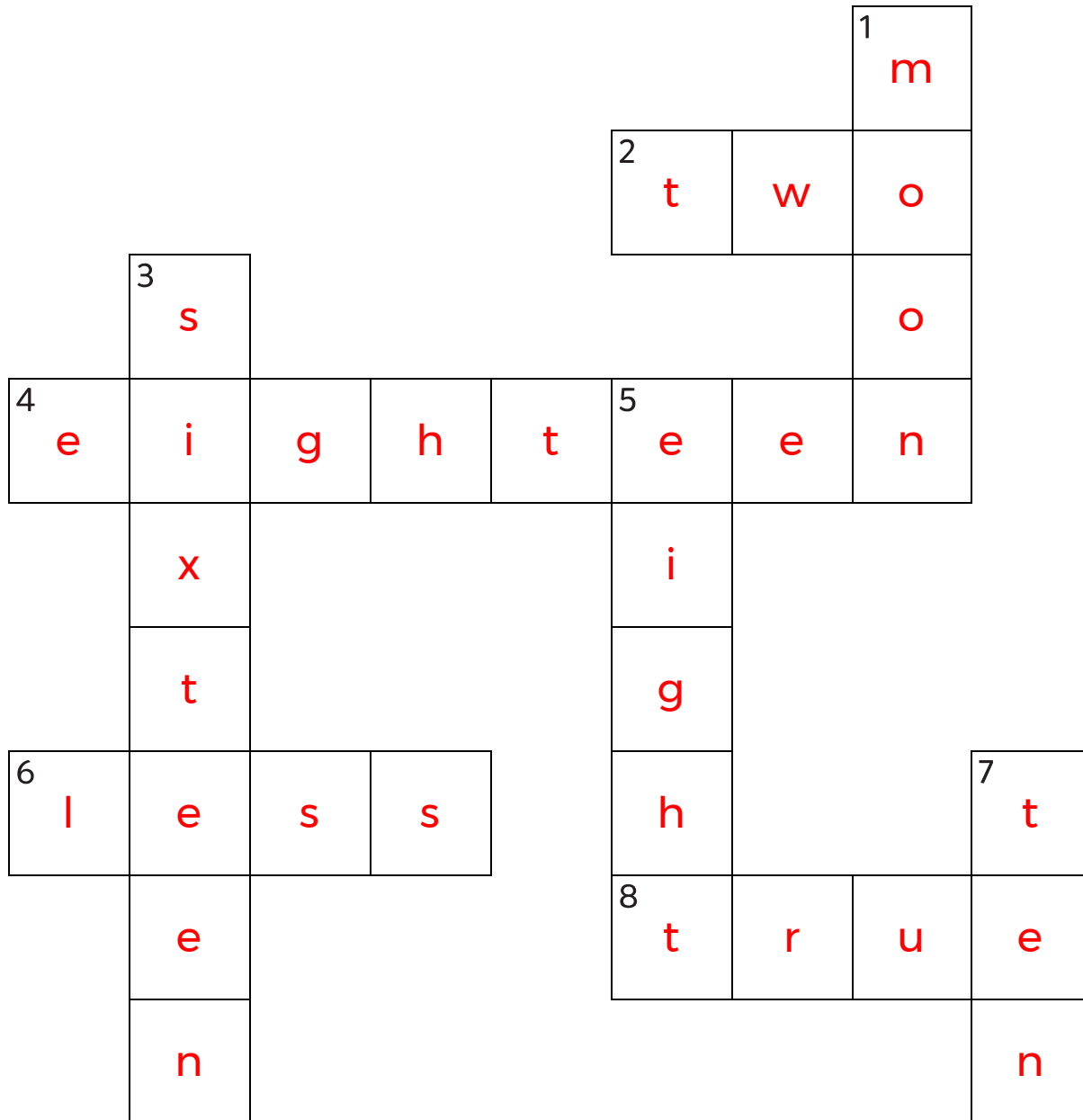
LEVEL

A

WEEK

4

Complete the crossword by filling in a word that fits each clue.



sixteen

moon

two

ten

true

eighteen

eight

less

ACROSS

2. 27 has ____ tens
4. $9 + 9$
6. 78 is ____ than 79
8. $6 + 2 = 9 - 1$

DOWN

1. the ____ shines at night
3. $10 + 6$
5. $5 + 3$
7. $11 - 1$

Name: _____

SNAKE

PACK

1

LEVEL

A

WEEK

4

Fill in each blank box in order, combining the numbers from the previous two boxes.

3	+5	8		5	+3	8	-6	2
			-3	-2				-1
8	+3	5		7		5	+4	1
-1				+2		+4		
7	+3	10	-5	5		9	-6	3

4	+1	5	-1	4	+4	8	-4	4
								+4
1	-8	9	+5	4	-5	9	+1	8
+8								
9	-6	3	+4	7	-6	1	+7	8

Name: _____

PACK

1

LEVEL



A

WEEK



4

NUMTANGA



In each empty box, write the matching value between adjacent cards.

2	
	nine

2

5	
	two



5

0	
	seven


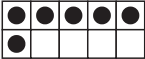
9

8


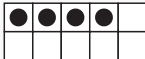
7

15	
	three

6

8	
	one



1

7	
	fifteen



3

0



4

3	
	four

20

10	
	zero

10

4	
	six

Name: _____

KAKOOMA

PACK

1

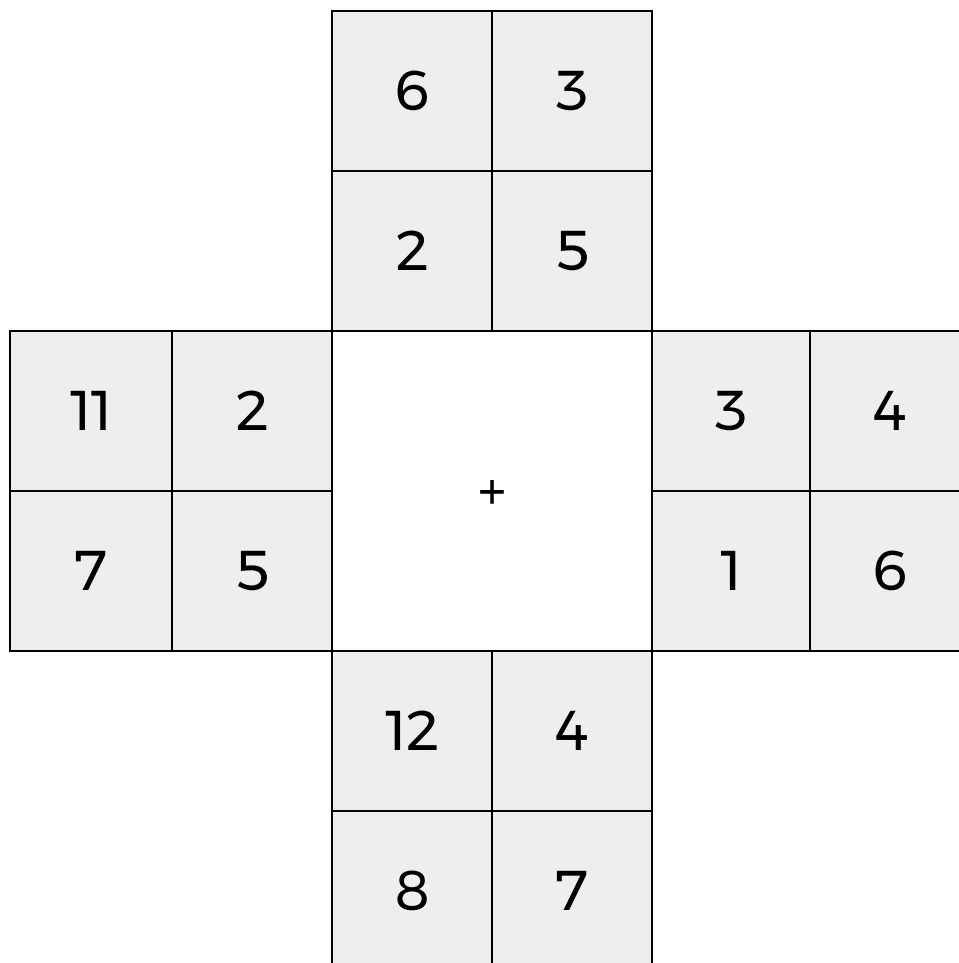
LEVEL

A

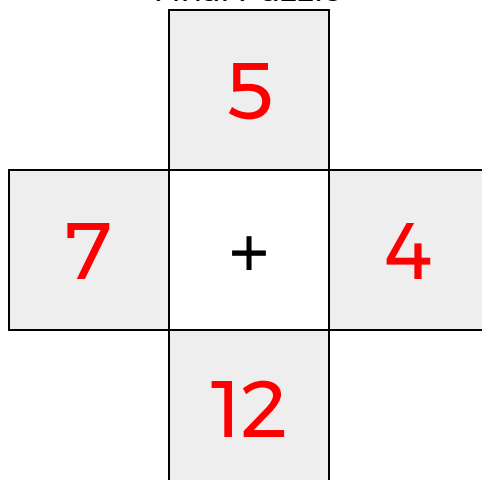
WEEK

4

In each 4-number group, find the one number that is the sum of two other numbers.
Use all 4 sums to create a final puzzle, then solve for the final answer.



Final Puzzle



Final Answer

12

Name: _____

EQUATO

PACK

1

LEVEL

A

WEEK

4

Fill in the empty boxes to make every horizontal and vertical equation correct.
Read equations left to right and top to bottom. Use every number in the bank once.

2 3 4 5 6

3	=	8	-	5
+		-		=
1	+	6	=	7
=		=		-
4	-	2	=	2