

Name: _____

PACK

1

LEVEL

A

WEEK

6

TANGY TUESDAY

TANGY TUESDAY PUZZLE PACK!

Fun brain puzzles that make you smarter!



Name: _____

DIGICROSS

PACK

1

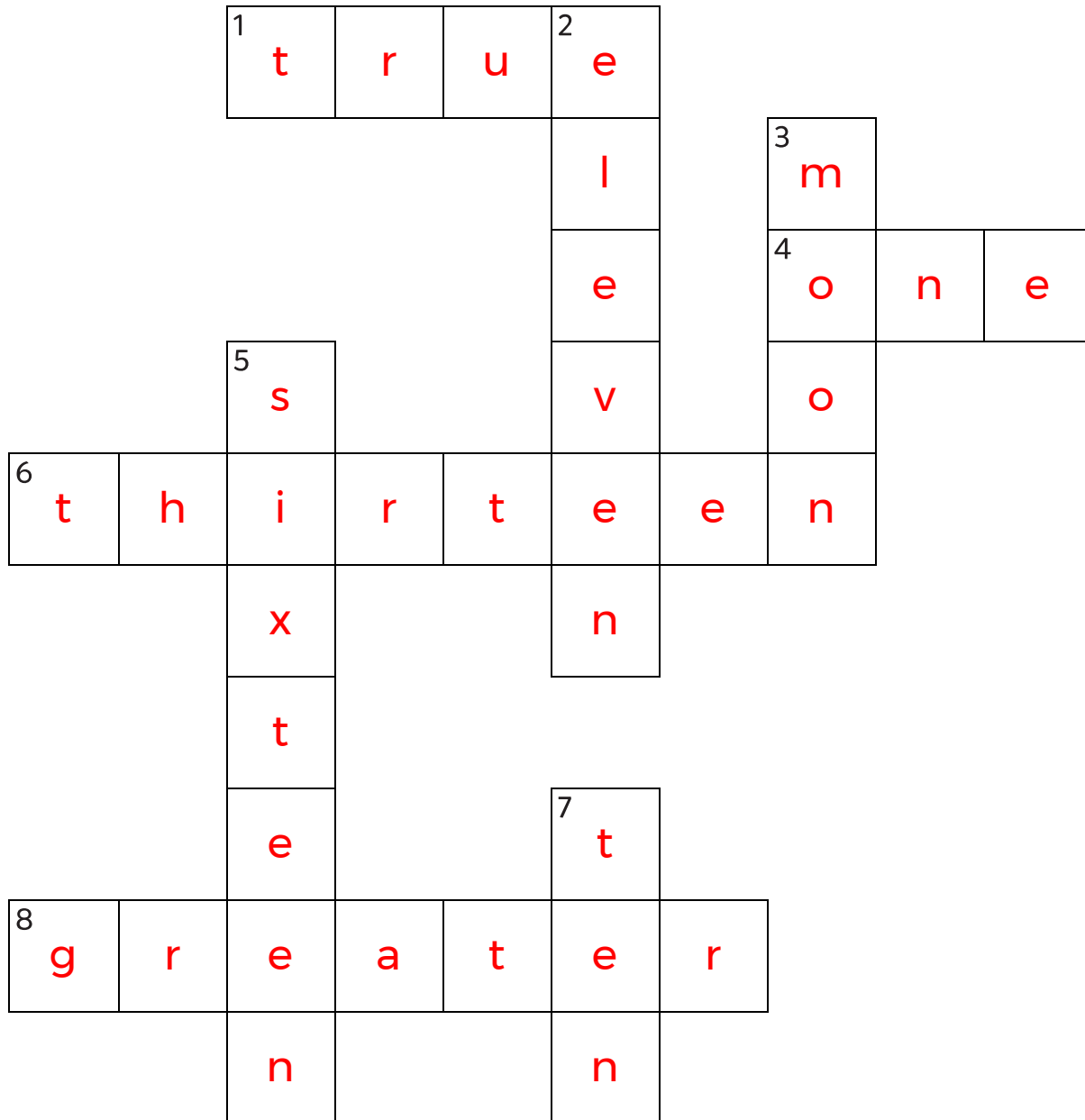
LEVEL

A

WEEK

6

Complete the crossword by filling in a word that fits each clue.



true

ten

moon

greater

sixteen

thirteen

eleven

one

ACROSS

1. $10 - 2 = 3 + 5$
4. 18 has ____ ten
6. $10 + 3$
8. 63 is ____ than 61

DOWN

2. $8 + 3$
3. the ____ shines at night
5. $8 + 8$
7. $13 - 3$

Name: _____

SNAKE

PACK

1

LEVEL

A

WEEK

6

Fill in each blank box in order, combining the numbers from the previous two boxes.

5	-4	1
		+4
2	-3	5
+4		
6	+1	7

4	+5	9	-1	8
+2				-7
2		8	+7	1
-8			+1	
	9	+1	10	

5		3	-1	2
+4		-5		+5
9		8		7
-5		+3		+2
4	+1	5		

10	-2	8
+4		+1
6		9
-2		-2
9	-1	8
		7

Name: _____

PACK

1

LEVEL



A

WEEK


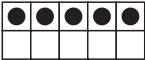
6

NUMTANGA



In each empty box, write the matching value between adjacent cards.

2	
	nine

0

0	
	seven



3

15	
	three



4

7



9

4	
	six

6

6	
	twenty


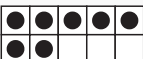
20

20	
	five



10

2


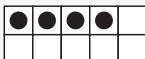
1

9	
	eight

8

5	
	two

15

7	
	fifteen

Name: _____

KAKOOMA

PACK

1

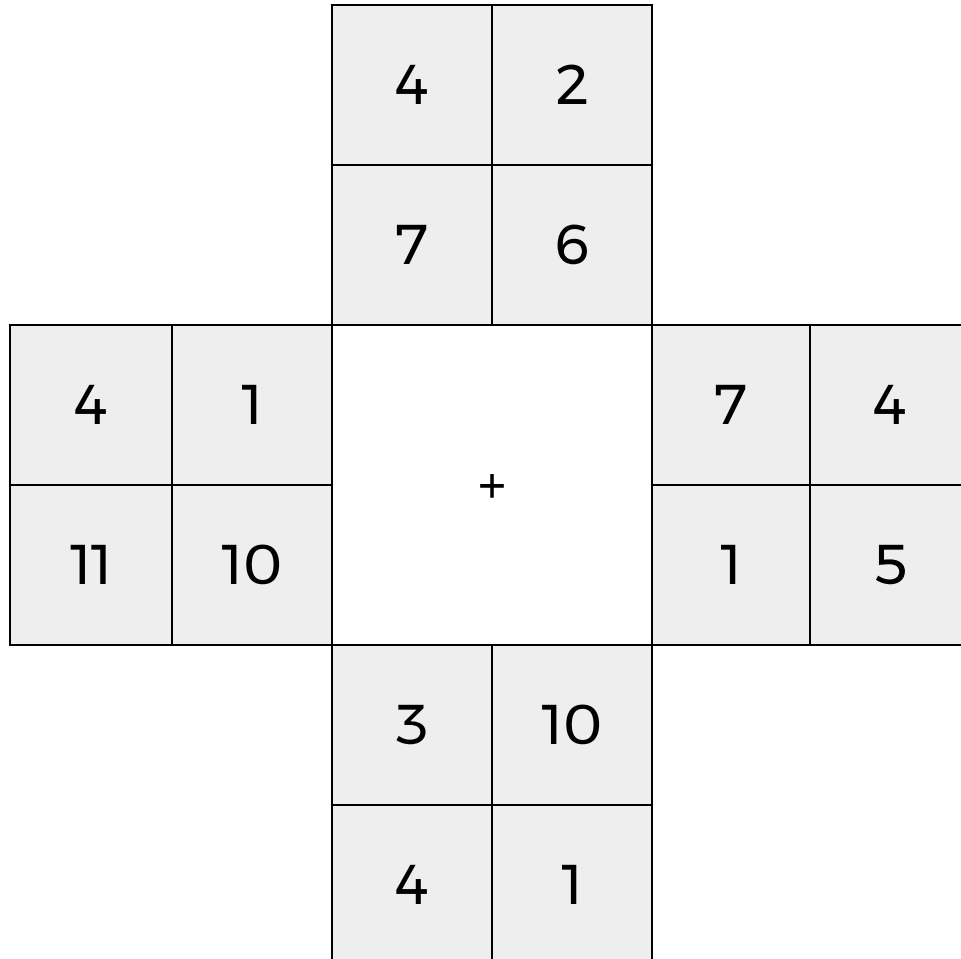
LEVEL

A

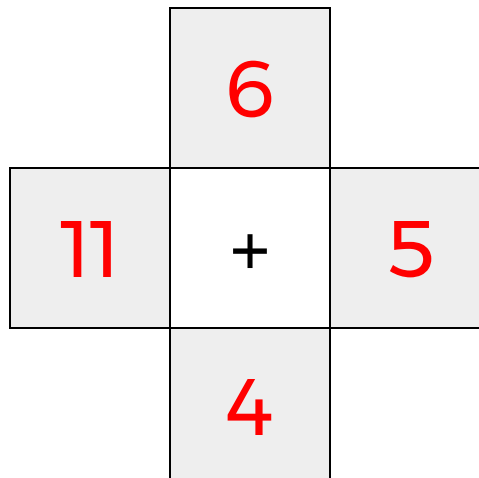
WEEK

6


In each 4-number group, find the one number that is the sum of two other numbers.
Use all 4 sums to create a final puzzle, then solve for the final answer.



Final Puzzle



Final Answer



Name: _____

EQUATO

PACK

1

LEVEL

A

WEEK

6

Fill in the empty boxes to make every horizontal and vertical equation correct.
Read equations left to right and top to bottom. Use every number in the bank once.

2 3 4 5 6

3	+	1	=	4
=		+		-
8	-	6	=	2
-		=		=
5	=	7	-	2