

Name: \_\_\_\_\_

PACK

1

LEVEL

A

WEEK

10

# TANGY TUESDAY



Name: \_\_\_\_\_

# DIGICROSS

PACK
1

LEVEL
A

WEEK
10

Complete the crossword by filling in a word that fits each clue.

night      false      eleven      fourteen      ten      twelve      two      less

## ACROSS

2. 15 - 5
4. 24 is \_\_\_\_ than 28
5. 6 + 5
6. you can see stars at \_\_\_\_

## DOWN

1. 7 + 7
2. 10 + 2
3. 2 + 5 = 9 - 3
7. 12 has \_\_\_\_ ones

Name: \_\_\_\_\_

**PACK**

7

**LEVEL**

A

WEEK

10

# SNAKE

Fill in each blank box in order, combining the numbers from the previous two boxes.

7	-3	
		+1
	-2	
+3		
	+3	-3

	+4		-2	
+4				-4
			-1	
	-4			
		-2		
			+3	4

7	-2		-4		+2		+5	
								-5
	+1		+1		-6		+4	
+1								
	+4		-3		-1		+3	7

Name: \_\_\_\_\_

PACK

1

LEVEL


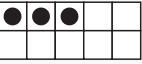
A



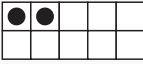
WEEK





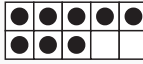
10



# NUMTANGA


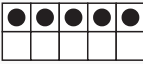
In each empty box, write the matching value between adjacent cards.


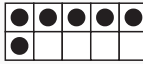
<b>1</b>	
	<b>ten</b>



<b>6</b>	 
	<b>twenty</b>




<b>3</b>	   
	<b>four</b>


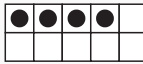
<b>4</b>	
	<b>six</b>

<b>0</b>	
	<b>seven</b>

<b>8</b>	
	<b>one</b>

<b>2</b>	
	<b>nine</b>

<b>15</b>	 
	<b>three</b>

<b>7</b>	
	<b>fifteen</b>

Name: \_\_\_\_\_

# KAKOOMA

PACK

1

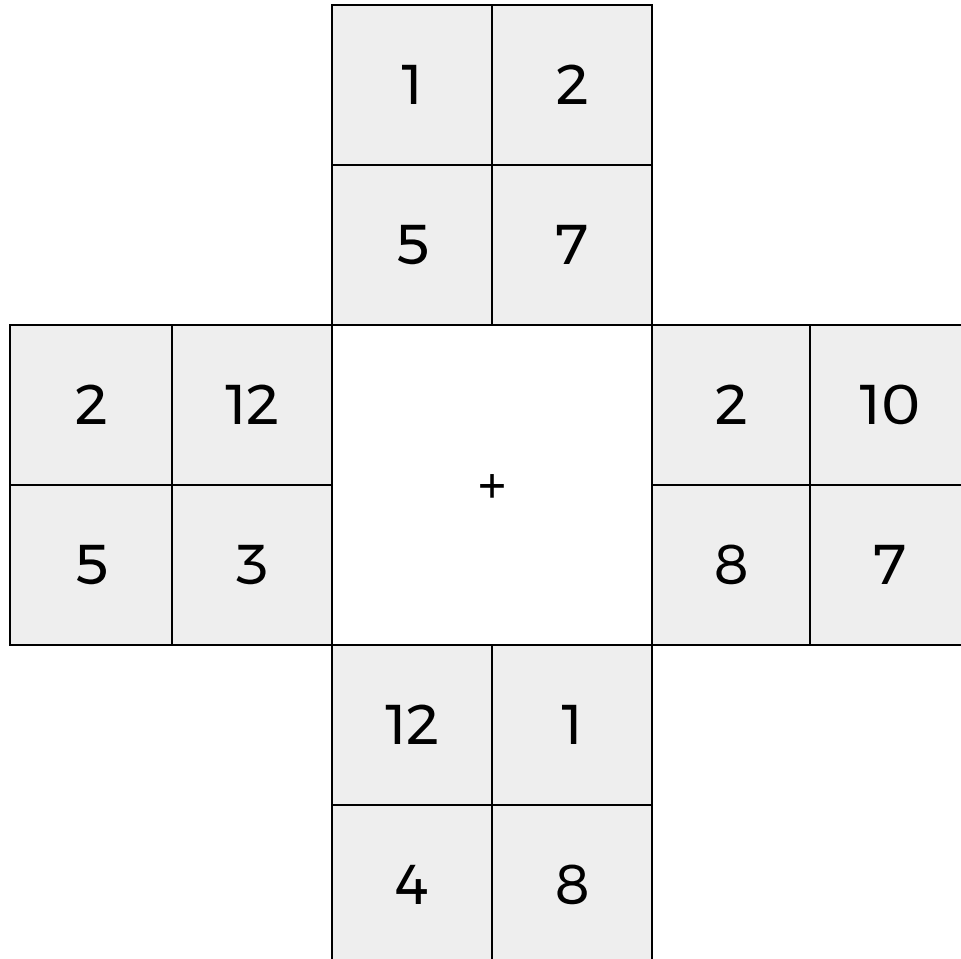
LEVEL

A

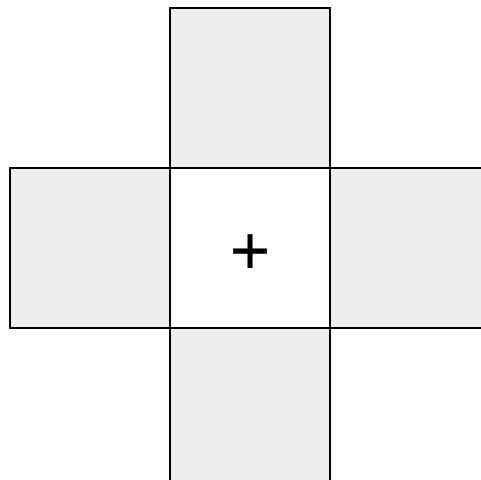
WEEK

10

In each 4-number group, find the one number that is the sum of two other numbers.  
Use all 4 sums to create a final puzzle, then solve for the final answer.



Final Puzzle



Final Answer

--

Name: \_\_\_\_\_

# EQUATO

PACK

1

LEVEL

A

WEEK

10

Fill in the empty boxes to make every horizontal and vertical equation correct.  
Read equations left to right and top to bottom. Use every number in the bank once.

2                  3                  4                  5                  6

	+		=	7
=		+		-
6	-		=	1
-		=		=
	=	8	-	