

Name: _____

PACK

1

LEVEL

A

WEEK

10

TANGY TUESDAY



Name: _____

DIGICROSS

PACK

1

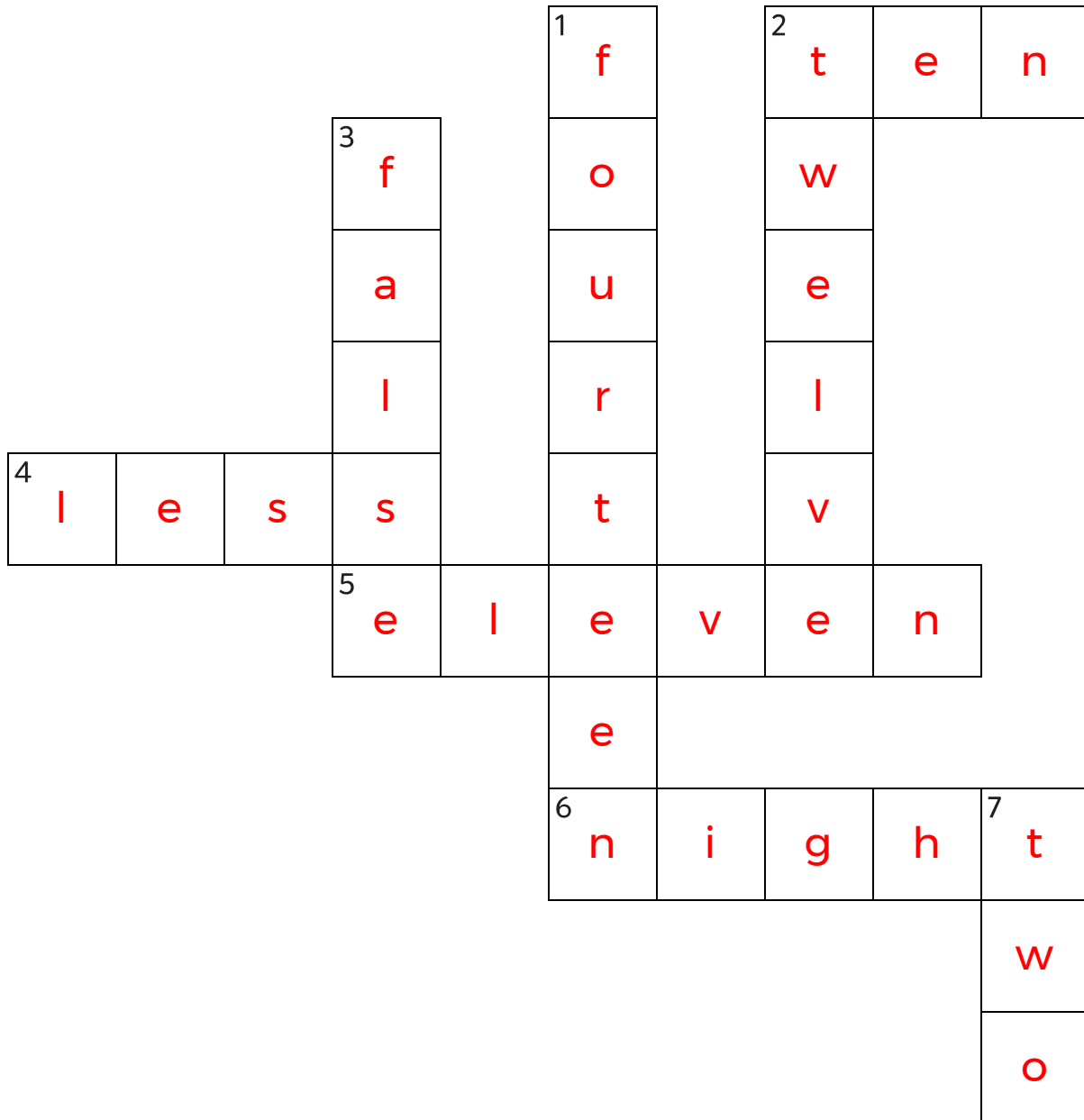
LEVEL

A

WEEK

10

Complete the crossword by filling in a word that fits each clue.



night

false

eleven

fourteen

ten

twelve

two

less

ACROSS

2. 15 - 5
4. 24 is ____ than 28
5. 6 + 5
6. you can see stars at ____

DOWN

1. 7 + 7
2. 10 + 2
3. 2 + 5 = 9 - 3
7. 12 has ____ ones

Name: _____

SNAKE

PACK

1

LEVEL

A

WEEK

10

Fill in each blank box in order, combining the numbers from the previous two boxes.

7	-3	4	6	+4	10	-2	8
		+1	+4				-4
3	-2	5	2		3	-1	4
+3			-4		-2		
6	+3	9	-3	6	1	+3	4

7	-2	5	-4	1	+2	3	+5	8
								-5
3	+1	2	+1	1	-6	7	+4	3
+1								
4	+4	8	-3	5	-1	4	+3	7

Name: _____

PACK

1

LEVEL


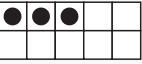
A

WEEK



10

NUMTANGA




In each empty box, write the matching value between adjacent cards.

1	
	ten

2

6	
	twenty



20

3	 
	four



10

7


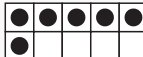
8

4	
	six

5

0	
	seven



0

8	
	one



4

3


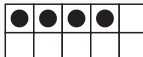
1

2	
	nine

9

15	
	three

15

7	
	fifteen

Name: _____

KAKOOMA

PACK

1

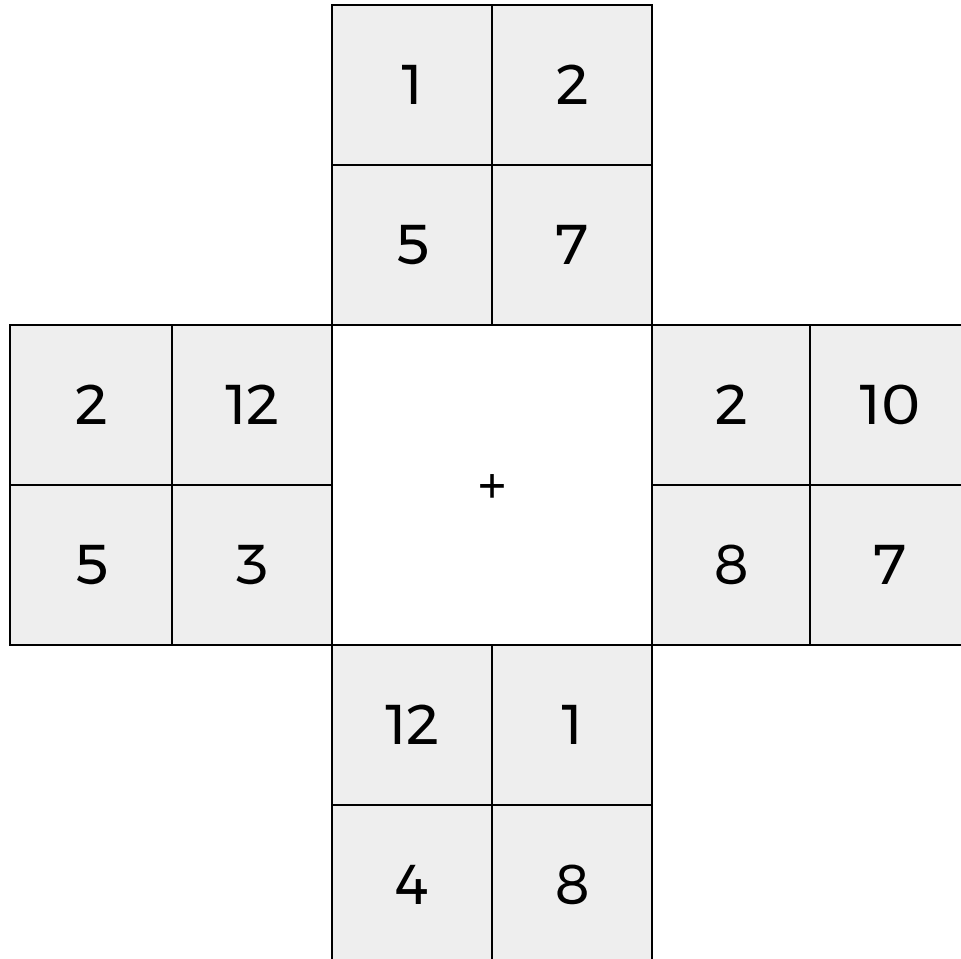
LEVEL

A

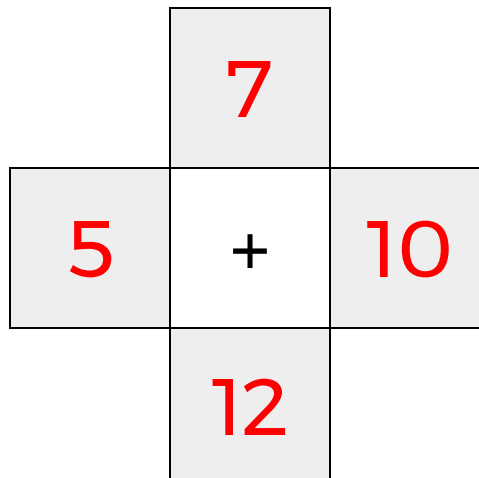
WEEK

10

In each 4-number group, find the one number that is the sum of two other numbers.
Use all 4 sums to create a final puzzle, then solve for the final answer.



Final Puzzle



Final Answer

12

Name: _____

EQUATO

PACK

1

LEVEL

A

WEEK

10

Fill in the empty boxes to make every horizontal and vertical equation correct.
Read equations left to right and top to bottom. Use every number in the bank once.

2 3 4 5 6

4	+	3	=	7
=		+		-
6	-	5	=	1
-		=		=
2	=	8	-	6