

Name: _____

PACK

1

LEVEL

A

WEEK

11

TANGY TUESDAY

TANGY TUESDAY PUZZLE PACK!

Fun brain puzzles that make you smarter!



Name: _____

DIGICROSS

PACK

1

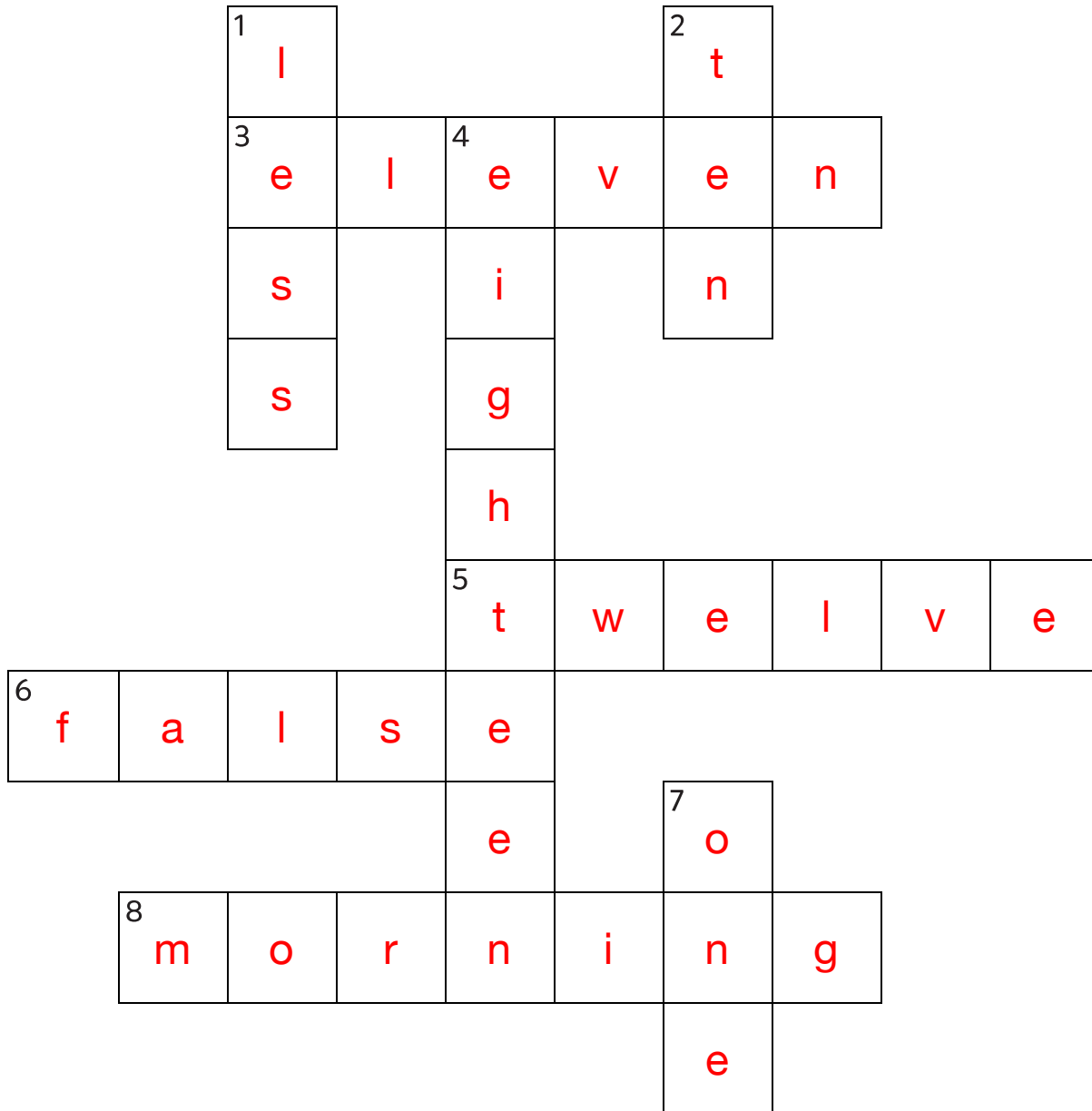
LEVEL

A

WEEK

11

Complete the crossword by filling in a word that fits each clue.



eighteen

false

ten

eleven

twelve

one

less

morning

ACROSS

3. $6 + 5$
5. $10 + 2$
6. $2 + 3 = 8 - 4$
8. kids wake up in the ____

DOWN

1. 24 is ____ than 28
2. $12 - 2$
4. $9 + 9$
7. 18 has ____ ten

Name: _____

PACK

1

LEVEL

A

WEEK

11

SNAKE

Fill in each blank box in order, combining the numbers from the previous two boxes.

5	+5	10	-7	3	+1	4	-2	2
								+4
10	-5	5	+2	7	-1	6		
+1								
9	+6	3	-3	6	-1	7	+3	4

11	-5	6						
		-5						
4	+3	1						
-3								
1	+1	2	-1	1				

7	+3	10	-7	3
-2				+9
9				
+8				
11	-1	12		
-9				
2	+7	9		

Name: _____

PACK

1

LEVEL


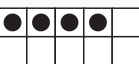
A

WEEK


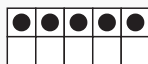
11

NUMTANGA



In each empty box, write the matching value between adjacent cards.

7	
	fifteen


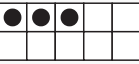
1

0	
	seven



5

10	
	zero



15

1	
	ten



2

4	
	six



4

15	
	three


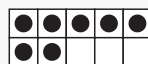
9

6	
	twenty

20

3	
	four

8

9	
	eight

Name: _____

KAKOOMA

PACK

1

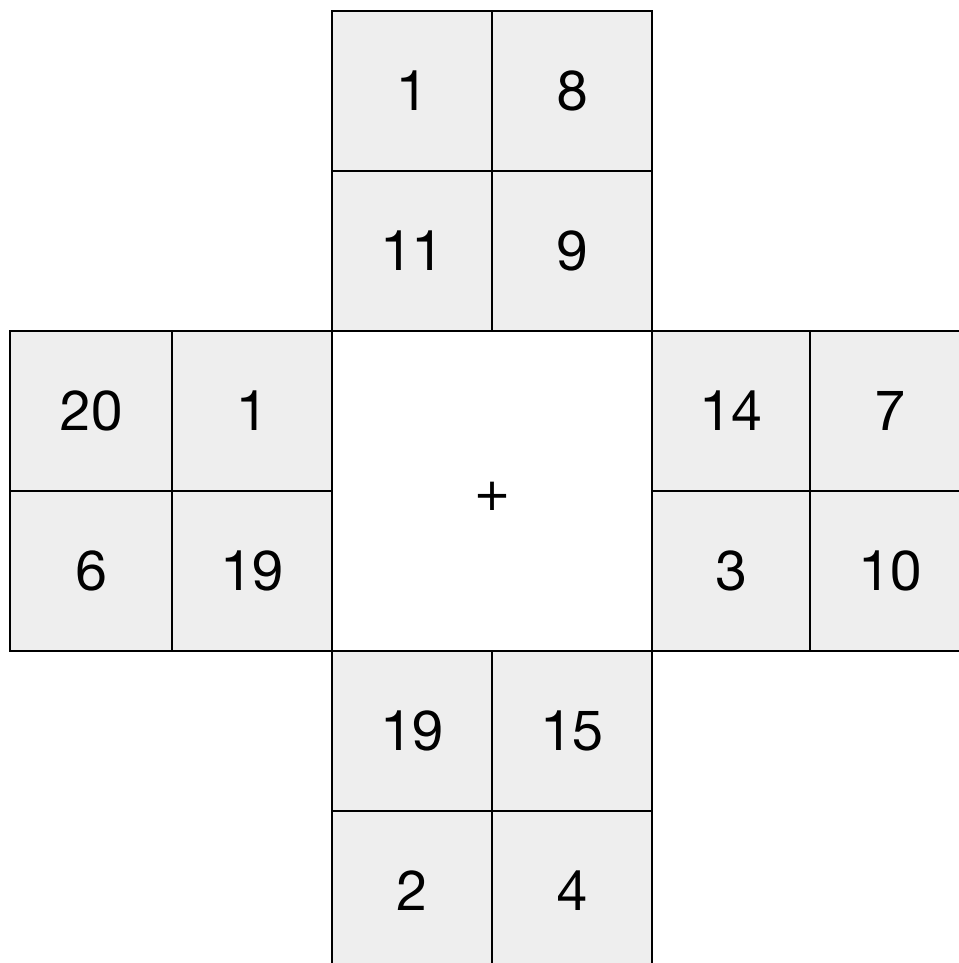
LEVEL

A

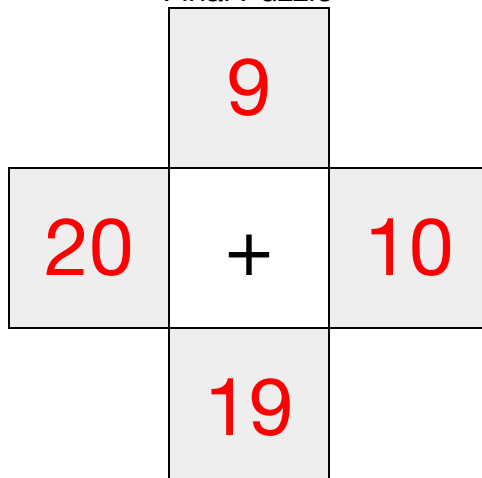
WEEK

11

In each 4-number group, find the one number that is the sum of two other numbers.
Use all 4 sums to create a final puzzle, then solve for the final answer.



Final Puzzle



Final Answer

19

Name: _____

EQUATO

PACK

1

LEVEL

A

WEEK

11

Fill in the empty boxes to make every horizontal and vertical equation correct.
Read equations left to right and top to bottom. Use every number in the bank once.

2 3 4 5 6

6	+	2	=	8
+		=		-
1	=	5	-	4
=		-		=
7	-	3	=	4