

Name: _____

PACK

1

LEVEL

A

WEEK

12

TANGY TUESDAY

TANGY TUESDAY PUZZLE PACK!

Fun brain puzzles that make you smarter!



Name: _____

DIGICROSS

PACK

1

LEVEL

A

WEEK

12

Complete the crossword by filling in a word that fits each clue.

1					2		
			3				
4							
5							6
					7		

ones

sixty-nine

fifteen

false

eight

greater

forty

nine

ACROSS

1. $42 = 2 \text{ } \underline{\hspace{1cm}} + 4 \text{ tens}$
4. $9:00 = \text{ } \underline{\hspace{1cm}} \text{ o'clock}$
5. $7 + 8$
7. $13 - 5$

DOWN

2. $60 + 9$
3. 100 is $\text{ } \underline{\hspace{1cm}}$ than 90
5. $19 \hat{=} 5 = 6 + 9$
6. 1 ten + 3 tens

Name: _____

SNAKE

PACK

1

LEVEL

A

WEEK

12

Fill in each blank box in order, combining the numbers from the previous two boxes.

11	-7	
		-2
	+4	
-1		
	-4	+10

	-5		+5	
+3				-6
			-2	
	+8			
		-2	9	

2		-4	
+5	+6		+1
-1	+2		
	-4		

	+6	
-6		-1
+10		-5
	+1	6

Name: _____

PACK

1

LEVEL



A



WEEK


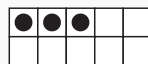
12



NUMTANGA


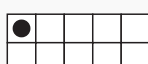
In each empty box, write the matching value between adjacent cards.



10	
	zero



2	
	nine



1	
	ten



7	
	fifteen

20	
	five

4	
	six

0	
	seven

3	
	four

8	
	one

Name: _____

KAKOOMA

PACK

1

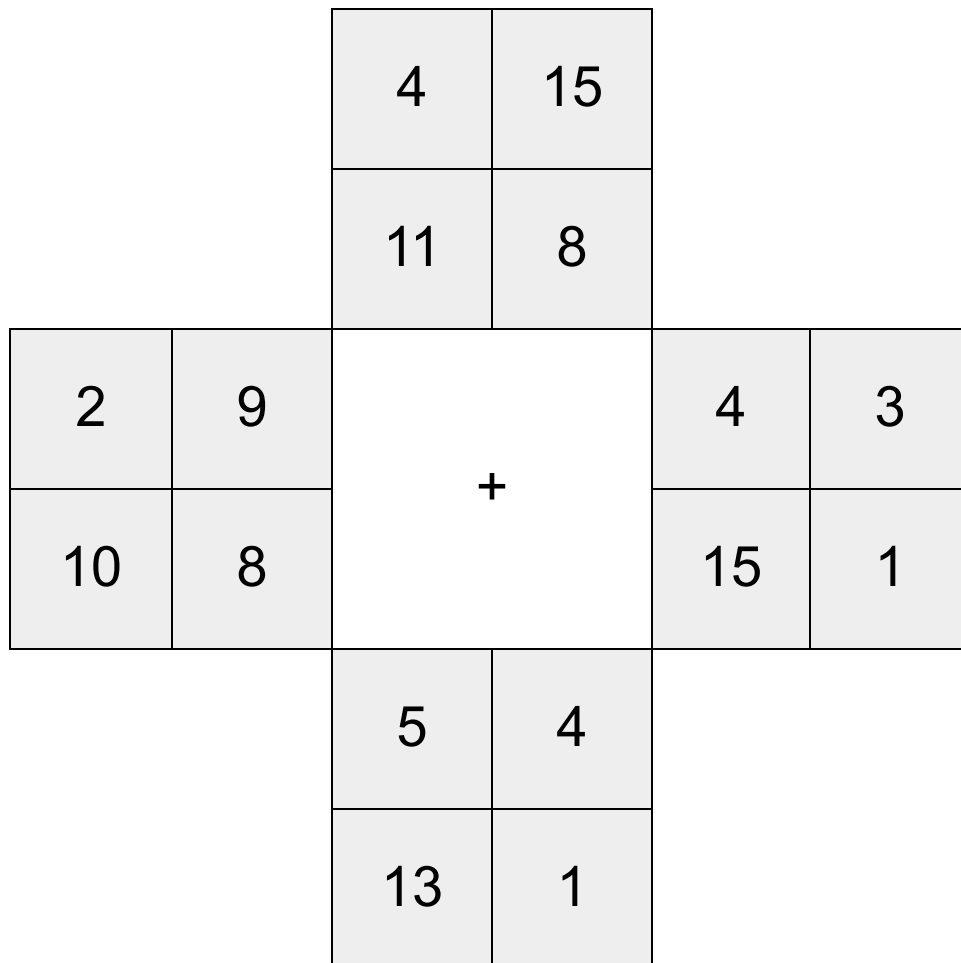
LEVEL

A

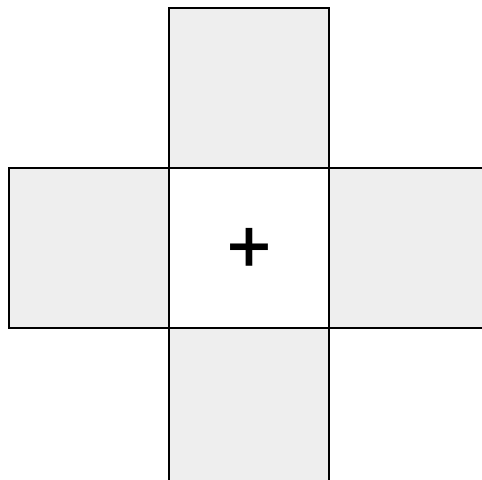
WEEK

12

In each 4-number group, find the one number that is the sum of two other numbers.
Use all 4 sums to create a final puzzle, then solve for the final answer.



Final Puzzle



Final Answer

--

Name: _____

EQUATO

PACK

1

LEVEL

A

WEEK

12

Fill in the empty boxes to make every horizontal and vertical equation correct.
Read equations left to right and top to bottom. Use every number in the bank once.

2 3 4 5 6

	=	8	-	
+		-		=
1	+		=	
=		=		-
7	-		=	2