

Name: _____

PACK

1

LEVEL

A

WEEK

2

TANGY TUESDAY



Name: _____

DIGICROSS

PACK

1


LEVEL

A

WEEK

2

Complete the crossword by filling in a word that fits each clue.



one moon ten false twelve less eight twenty

ACROSS

2. 11 - 1
4. 24 is ____ than 28
5. the ____ shines at night
6. 10 + 2

DOWN

1. 18 has ____ ten
2. 10 + 10
3. 2 + 5 = 9 - 3
7. 5 + 3

Name: _____

SNAKE

PACK

1

LEVEL

A

WEEK

2

Fill in each blank box in order, combining the numbers from the previous two boxes.

5	-1		+2		-4		+1	
---	----	--	----	--	----	--	----	--

+6

	+5		+3		-8		+1	
--	----	--	----	--	----	--	----	--

-2

	-6		+1		+2		+1	6
--	----	--	----	--	----	--	----	---

1	+4	
---	----	--

-3

	+5	
--	----	--

-3

	+4		-1	
--	----	--	----	--

	+5		+2	
--	----	--	----	--

-3

-4

	+1	
--	----	--

-3

-4

	+4	5
--	----	---

Name: _____

PACK

1

LEVEL



A



WEEK



2



NUMTANGA



In each empty box, write the matching value between adjacent cards.



9	
	eight



15	
	three



4	
	six


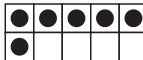
7	
	fifteen

1	
	ten

5	
	two

3	
	four

10	
	zero

8	
	one

Name: _____

KAKOOMA

PACK

1

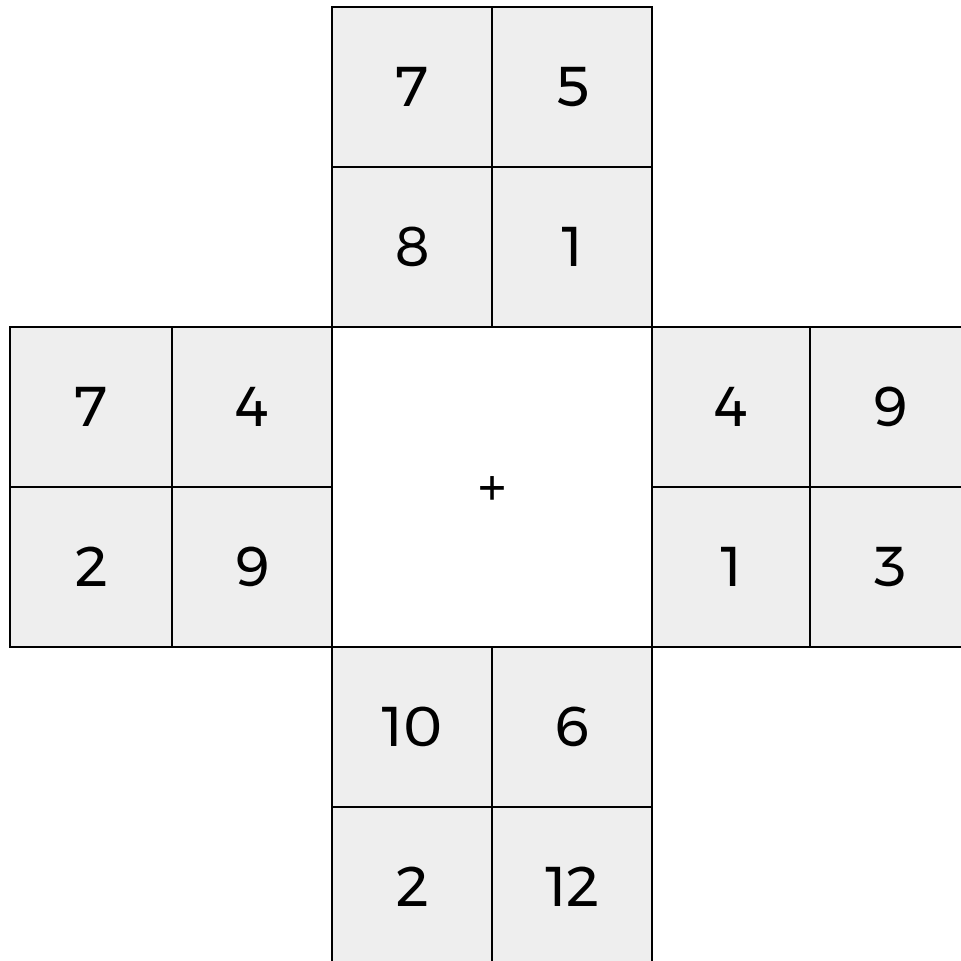
LEVEL

A

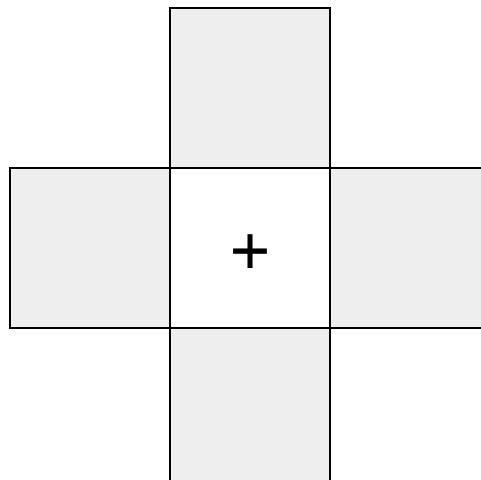
WEEK

2

In each 4-number group, find the one number that is the sum of two other numbers.
Use all 4 sums to create a final puzzle, then solve for the final answer.



Final Puzzle



Final Answer

--

Name: _____

EQUATO

PACK

1

LEVEL

A

WEEK

2

Fill in the empty boxes to make every horizontal and vertical equation correct.
Read equations left to right and top to bottom. Use every number in the bank once.

2 3 4 5 6

	+		=	8
+		=		-
1	=		-	4
=		-		=
7	-		=	

