

Name: _____

PACK

1

LEVEL

A

WEEK

6

TANGY TUESDAY

TANGY TUESDAY PUZZLE PACK!

Fun brain puzzles that make you smarter!



Name: _____

DIGICROSS

PACK

1


LEVEL

A

WEEK

6

Complete the crossword by filling in a word that fits each clue.



true

ten

moon

greater

sixteen

thirteen

eleven

one

ACROSS

1. $10 - 2 = 3 + 5$
4. 18 has ____ ten
6. $10 + 3$
8. 63 is ____ than 61

DOWN

2. $8 + 3$
3. the ____ shines at night
5. $8 + 8$
7. $13 - 3$

Name: _____

SNAKE

PACK

1

LEVEL

A

WEEK

6

Fill in each blank box in order, combining the numbers from the previous two boxes.

5	-4	
		+4
	-3	
+4		
	+1	

	+5		-1	
+2				-7
			+7	
		+1		
		+1		10

5		-1	
+4		-5	+5
-5		+3	
	+1		

	-2	
+4		+1
-2		-2
	-1	
		7

Name: _____

PACK

1

LEVEL



A


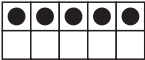
WEEK



6



NUMTANGA



In each empty box, write the matching value between adjacent cards.



2	
	nine



0	
	seven



15	
	three



4	
	six

6	
	twenty

20	
	five

9	
	eight

5	
	two

7	
	fifteen

Name: _____

KAKOOMA

PACK

1

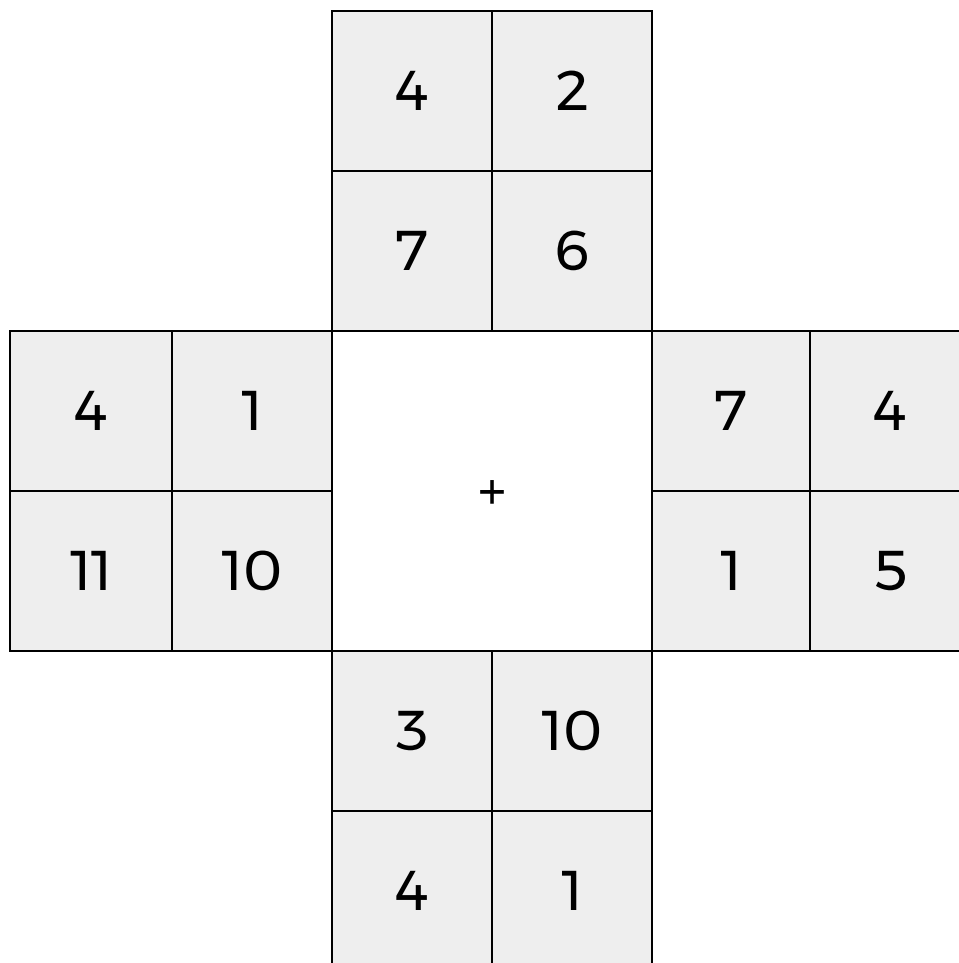
LEVEL

A

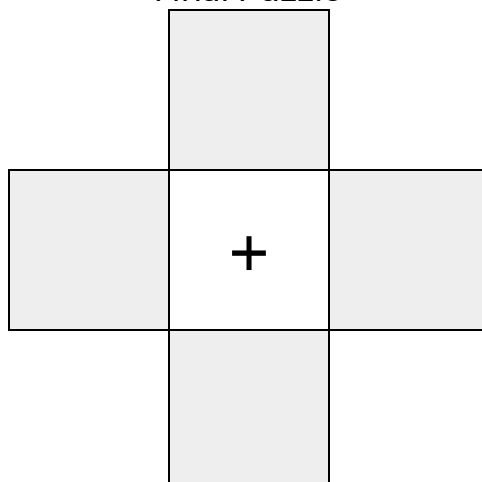
WEEK

6

In each 4-number group, find the one number that is the sum of two other numbers.
Use all 4 sums to create a final puzzle, then solve for the final answer.



Final Puzzle



Final Answer

--

Name: _____

EQUATO

PACK

1

LEVEL

A

WEEK

6

Fill in the empty boxes to make every horizontal and vertical equation correct.
Read equations left to right and top to bottom. Use every number in the bank once.

2 3 4 5 6

	+	1	=	
=		+		-
8	-		=	
-		=		=
	=	7	-	2