

Name: _____

PACK

1

LEVEL

A

WEEK

8

TANGY TUESDAY



Fun brain puzzles that make you smarter!

Name: _____

DIGICROSS

PACK

1


LEVEL

A

WEEK

8

Complete the crossword by filling in a word that fits each clue.



eleven

eighteen

ten

less

sixteen

false

one

sun

ACROSS

2. 18 has ____ ten
5. 24 is ____ than 28
7. $10 + 6$
8. $11 - 1$

DOWN

1. the ____ shines during the day
3. $9 + 9$
4. $8 + 3$
6. $2 + 5 = 9 - 3$

Name: _____

SNAKE

PACK

1

LEVEL

A

WEEK

8

Fill in each blank box in order, combining the numbers from the previous two boxes.

7	-4		+2		-4		+2	
								+3
	+5		-4		+2	5		
-3							+2	
	+2		-4		+2		-3	

8	-2				+6		-5	
		-4		-1				-2
	+1					+3		
+5				+2			-4	
	+1		-7			+4	5	

Name: _____

PACK

1

LEVEL


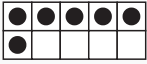
A


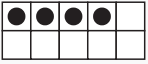
WEEK



8



NUMTANGA



In each empty box, write the matching value between adjacent cards.


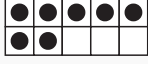
8	
	one



7	
	fifteen


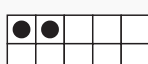
10	
	zero


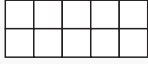
0	
	seven

3	
	four

9	
	eight

4	
	six

6	
	twenty

2	
	nine

Name: _____

KAKOOMA

PACK

1

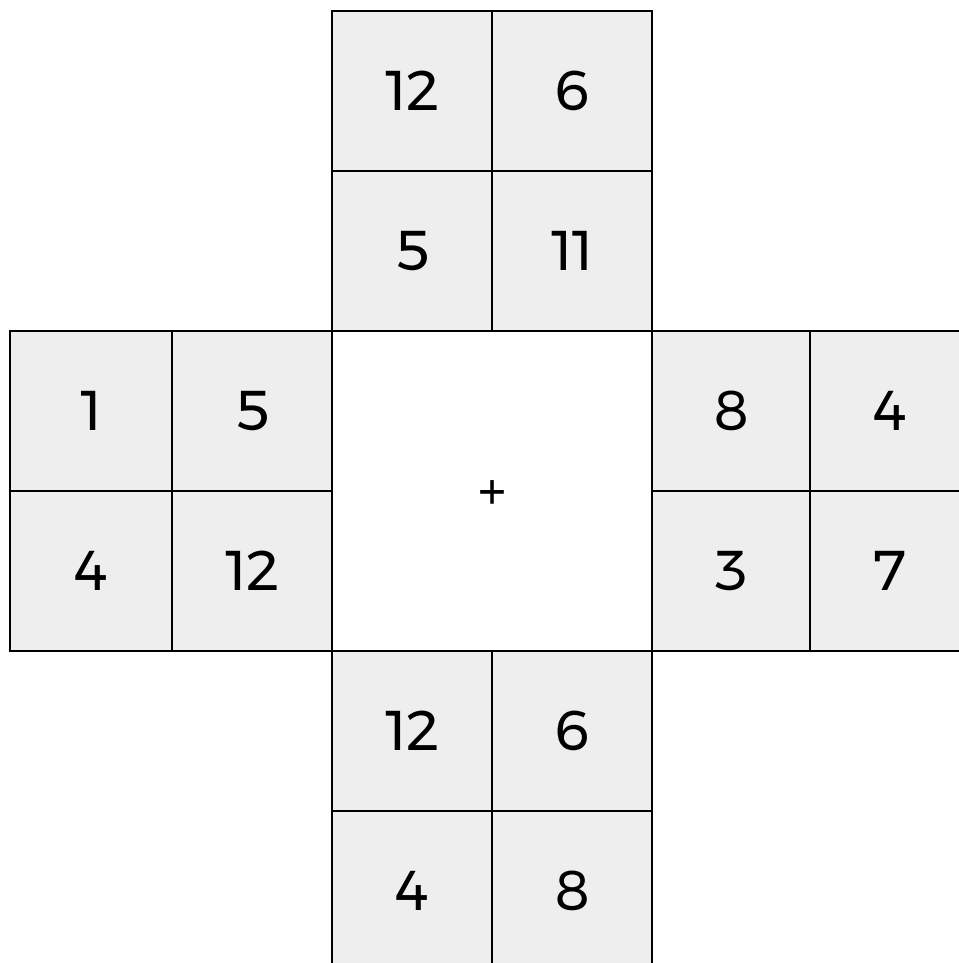
LEVEL

A

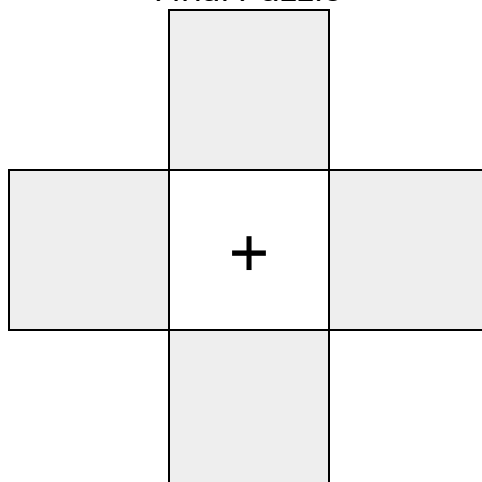
WEEK

8

In each 4-number group, find the one number that is the sum of two other numbers.
Use all 4 sums to create a final puzzle, then solve for the final answer.



Final Puzzle



Final Answer

--

Name: _____

EQUATO

PACK

1

LEVEL

A

WEEK

8

Fill in the empty boxes to make every horizontal and vertical equation correct.
Read equations left to right and top to bottom. Use every number in the bank once.

2 3 4 5 6

	+		=	8
+		=		-
1	=		-	4
=		-		=
7	-		=	