

Name: _____

PACK

1

LEVEL

A

WEEK

8

TANGY TUESDAY



Name: _____

DIGICROSS

PACK

1

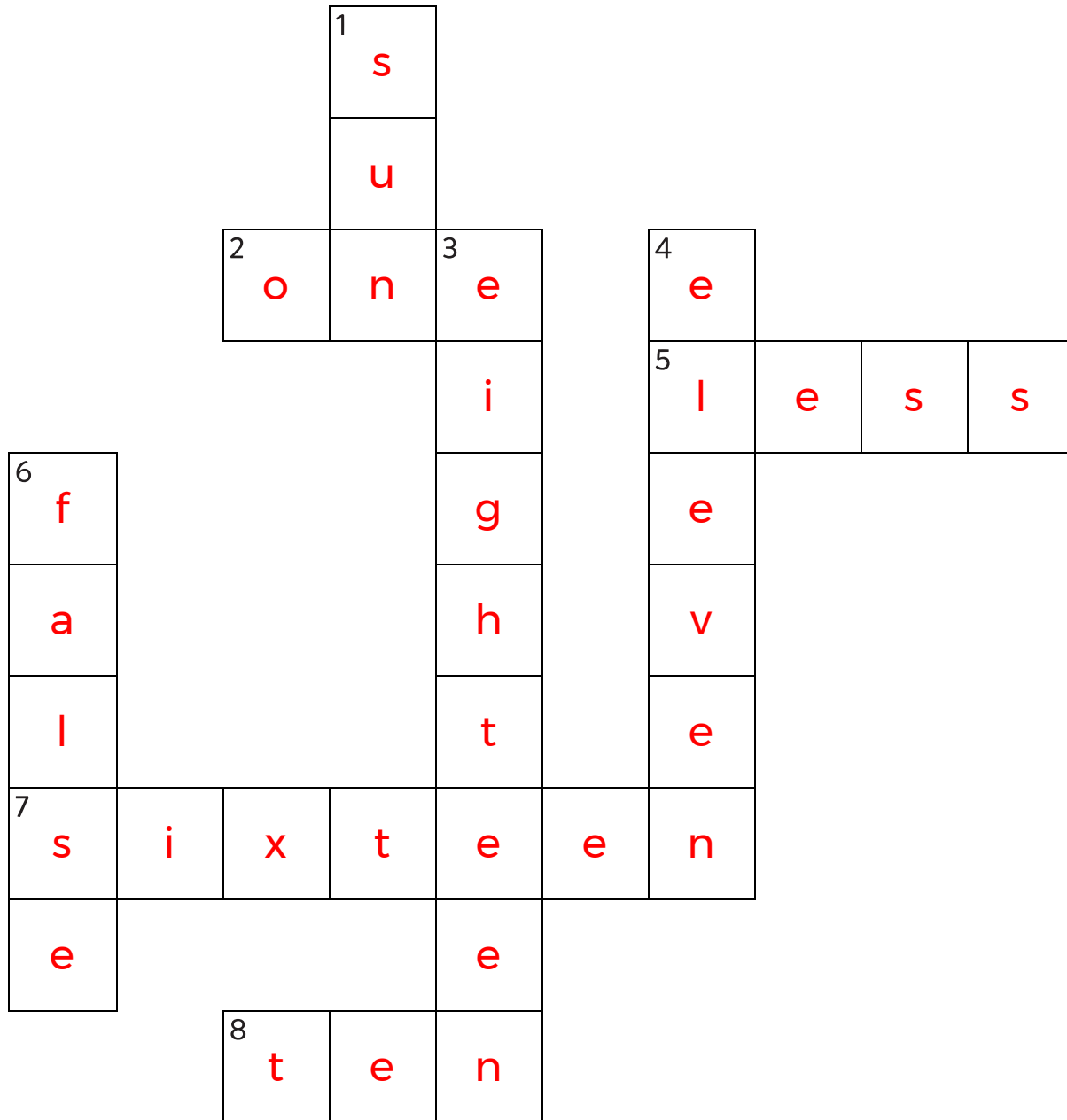
LEVEL

A

WEEK

8

Complete the crossword by filling in a word that fits each clue.



eleven

eighteen

ten

less

sixteen

false

one

sun

ACROSS

2. 18 has ____ ten
5. 24 is ____ than 28
7. $10 + 6$
8. $11 - 1$

DOWN

1. the ____ shines during the day
3. $9 + 9$
4. $8 + 3$
6. $2 + 5 = 9 - 3$

Name: _____

SNAKE

PACK

1

LEVEL

A

WEEK

8

Fill in each blank box in order, combining the numbers from the previous two boxes.

7	-4	3	+2	5	-4	1	+2	3
								+3
2	+5	7	-4	3	+2	5		
-3								
5	+2	3	-4	7	+2	5	-3	8

8	-2	6				3	+6	9	-5	4
		-4				-1				-2
3	+1	2				4				5
+5							+2			
8	+1	9	-7	2				-4		
						1	+4	5		

Name: _____

PACK

1

LEVEL


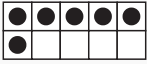
A

WEEK


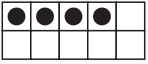
8

NUMTANGA



In each empty box, write the matching value between adjacent cards.

8	
	one

1

7	
	fifteen



15

10	
	zero



0

4


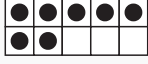
10

0	
	seven

3

3	
	four



8

9	
	eight


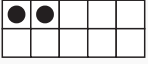
5

20


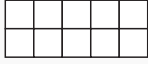
9

4	
	six

6

6	
	twenty

2

2	
	nine

Name: _____

KAKOOMA

PACK

1

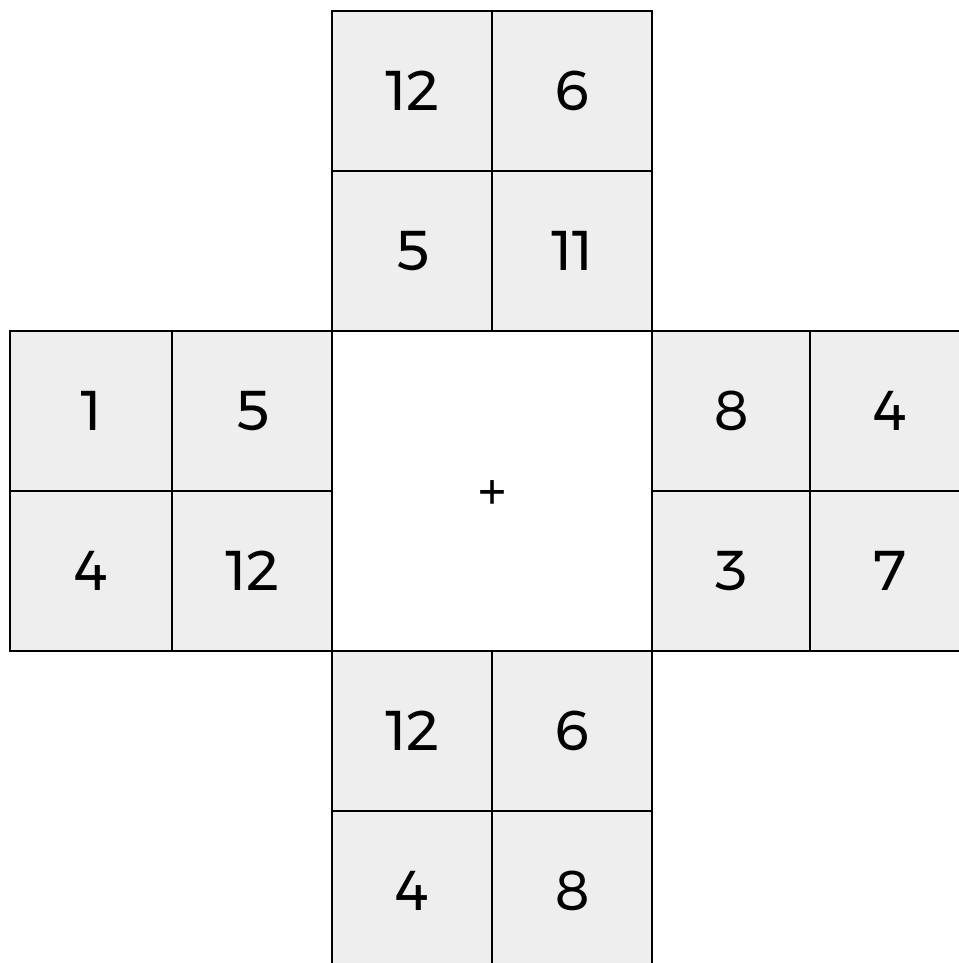
LEVEL

A

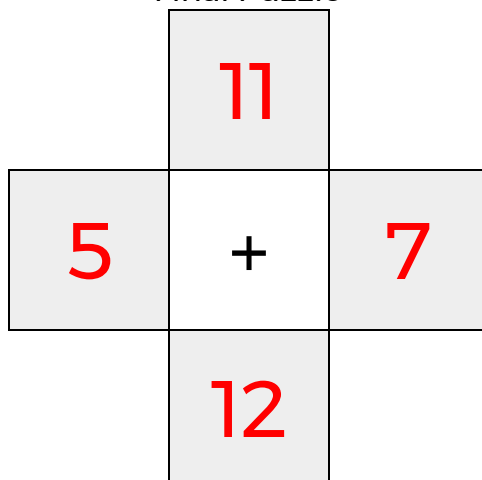
WEEK

8


In each 4-number group, find the one number that is the sum of two other numbers.
Use all 4 sums to create a final puzzle, then solve for the final answer.



Final Puzzle



Final Answer



Name: _____

EQUATO

PACK

1

LEVEL

A

WEEK

8

Fill in the empty boxes to make every horizontal and vertical equation correct.
Read equations left to right and top to bottom. Use every number in the bank once.

2 3 4 5 6

6	+	2	=	8
+		=		-
1	=	5	-	4
=		-		=
7	-	3	=	4