

Name: _____

PACK

1

LEVEL

B

WEEK

7

TANGY TUESDAY

TANGY TUESDAY PUZZLE PACK!

Fun brain puzzles that make you smarter!

Name: _____

DIGICROSS

PACK

1


LEVEL

B

WEEK

7

Complete the crossword by filling in a word that fits each clue.



one less ten nine five foot ninety-four fifty hundreds whole

ACROSS

2. 3 thirds make a ____
5. 2 rows of 5 hats are ____ hats
6. 1 inch is shorter than 1 ____
8. $60 + 30 + 4$
9. 1 penny = ____ ¢

DOWN

1. $11 + \underline{\hspace{1cm}} = 16$
3. $257 = 2 \underline{\hspace{1cm}} + 5 \text{ tens} + 7 \text{ ones}$
4. 961 is ____ than 965
6. $753 = 700 + \underline{\hspace{1cm}} + 3$
7. $13 - 4$

Name: _____

SNAKE

PACK

1

LEVEL

B

WEEK

7

Fill in each blank box in order, combining the numbers from the previous two boxes.

17	-4		+4		-5		-9	
								+17
	+2		+9		-5	11		
-14								-7
	+4		-2		+1		+3	

10	+2			-5		-10	
		+4		+2			+15
	-15					-6	
+2				+12		+4	
	+11		-12			-9	5

Name: _____

PACK

1

LEVEL


B


WEEK


7


NUMTANGA


In each empty box, write the matching value between adjacent cards.


19	20+1
	eighteen


28	10+9
	fifteen


13	20+8
	fourteen


15	10+8
	twelve

17	10+1
	twenty four

29	10+3
	seventeen

11	10+2
	twenty one

14	10+5
	sixteen

18	20+9
	eleven

Name: _____

KAKOOMA

PACK

1

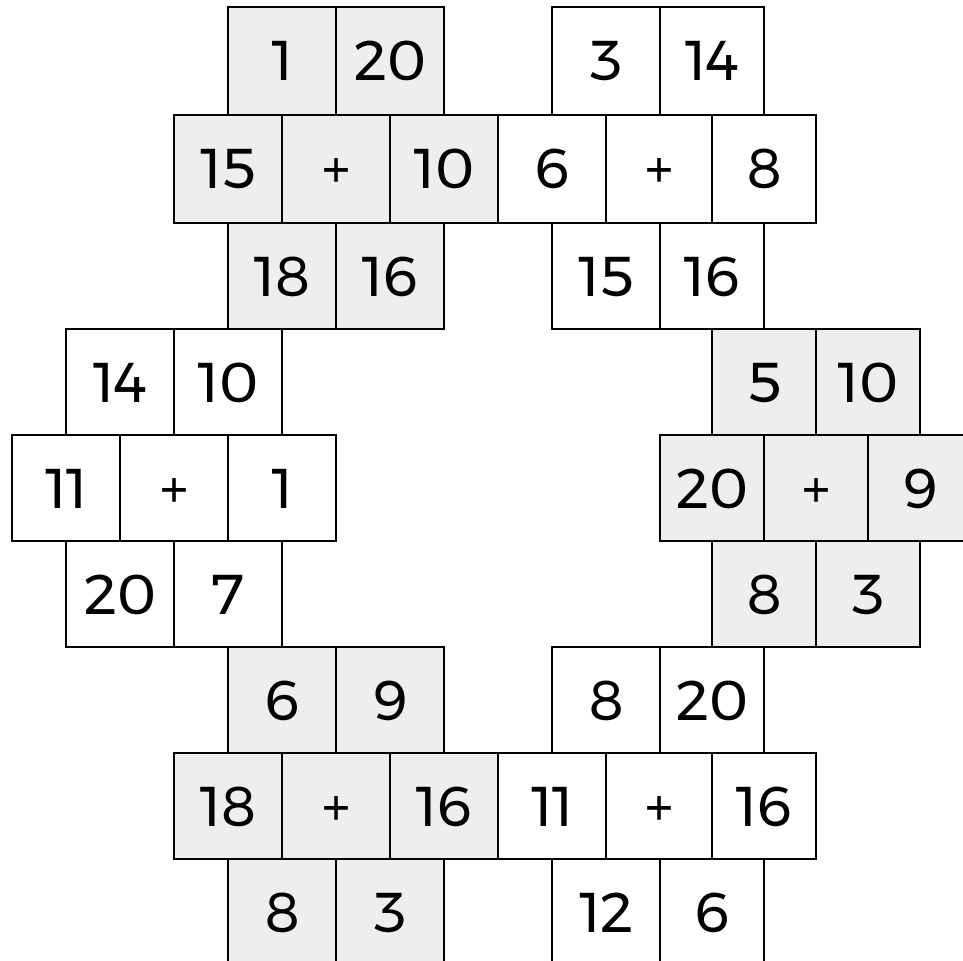
LEVEL

B

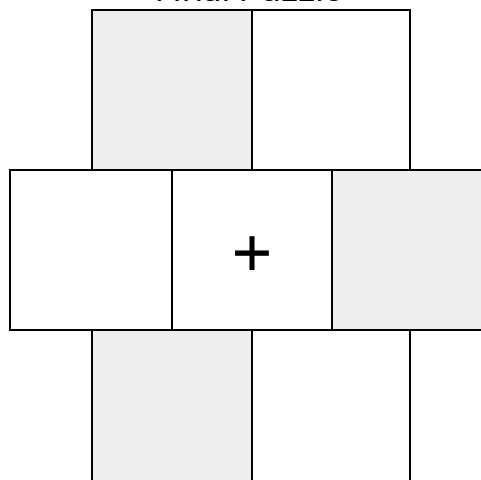
WEEK

7

In each 6-number group, find the one number that is the sum of two other numbers.
Use all 6 sums to create a final puzzle, then solve for the final answer.



Final Puzzle



Final Answer

Name: _____

EQUATO

PACK

1

LEVEL

B

WEEK

7

Fill in the empty boxes to make every horizontal and vertical equation correct.
Read equations left to right and top to bottom. Use every number in the bank once.

1 2 3 4 5 6

6	=	8	+	2	-	4
=		+		+		-
9	-		=	7	-	
+		-		-		-
	=	7	-	3	+	1
-		=		=		=
8	-		=		-	