

Name: _____

PACK

1

LEVEL

B

WEEK

10

TANGY TUESDAY



Fun brain puzzles that make you smarter!

Name: _____

DIGICROSS

PACK

1


LEVEL

B

WEEK

10

Complete the crossword by filling in a word that fits each clue.



one eight hundreds forty less three whole ninety-four yard six

ACROSS

2. $12 - 4$
5. $257 = 2 \text{ ____} + 5 \text{ tens} + 7 \text{ ones}$
6. 3 thirds make a ____
8. 3 rows of 2 plates are ____ plates
9. $342 = 300 + \text{ ____} + 2$

DOWN

1. $60 + 30 + 4$
3. $15 + \text{ ____} = 18$
4. 1 penny = ____ ¢
7. 961 is ____ than 965
10. 1 foot is shorter than 1 ____

Name: _____

SNAKE

PACK

1

LEVEL

B

WEEK

10

Fill in each blank box in order, combining the numbers from the previous two boxes.

3			-4				-1	
+13		-6		+2		+4		-4
-14		+6		+9		+11		+2
	+5				-10			16

8	-2			-11		+1	
		-3		+1			+1
	+1					+14	
+9				+7		-1	
	-12		+3			+3	19

Name: _____

PACK

1

LEVEL


B


WEEK


10


NUMTANGA


In each empty box, write the matching value between adjacent cards.


12	10+4
	nineteen


11	10+2
	twenty one


21	20+4
	twenty nine


13	20+8
	fourteen

18	20+9
	eleven

24	10+6
	thirteen

28	10+9
	fifteen

29	10+3
	seventeen

19	20+1
	eighteen

Name: _____

KAKOOMA

PACK

1

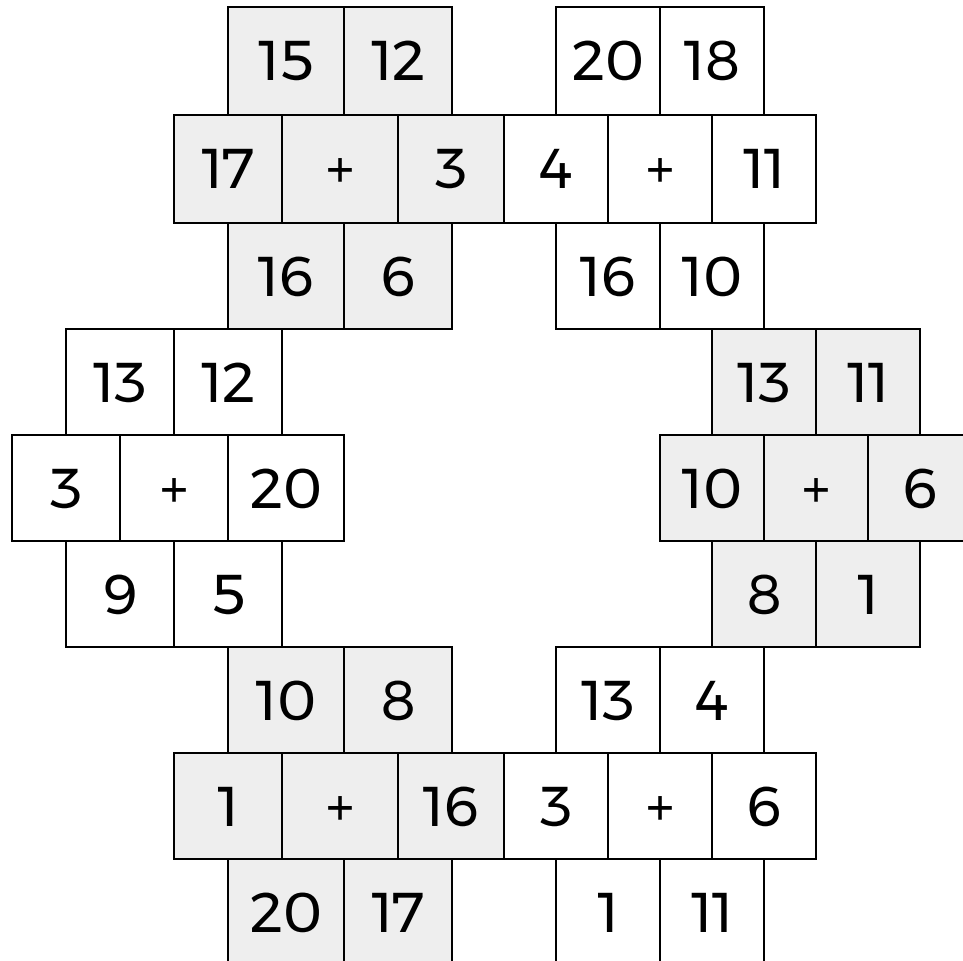
LEVEL

B

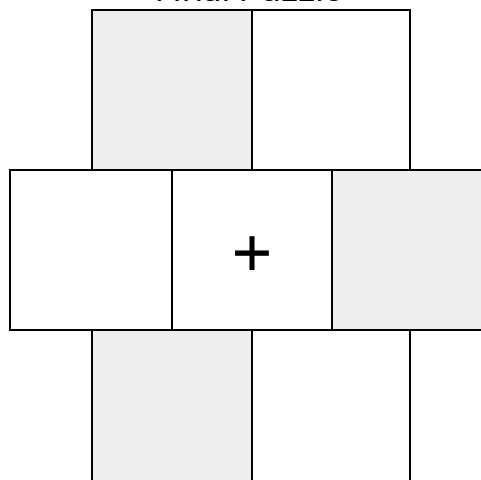
WEEK

10

In each 6-number group, find the one number that is the sum of two other numbers.
Use all 6 sums to create a final puzzle, then solve for the final answer.



Final Puzzle



Final Answer

Name: _____

EQUATO

PACK

1

LEVEL

B

WEEK

10

Fill in the empty boxes to make every horizontal and vertical equation correct.
Read equations left to right and top to bottom. Use every number in the bank once.

1 2 3 4 5 6

4	-	2	+	6	=	8
-		-		-		=
	+		+		=	9
=		+		=		+
7	-	1	=	9	-	3
-		=		-		-
	-		=	8	-	