

Name: \_\_\_\_\_

PACK

1

LEVEL

B

WEEK

12

# TANGY TUESDAY

## TANGY TUESDAY PUZZLE PACK!

Fun brain puzzles that make you smarter!



Name: \_\_\_\_\_

# DIGICROSS

PACK

1


LEVEL

B

WEEK

12

Complete the crossword by filling in a word that fits each clue.



forty-two

seven

forty-nine

less

eight

eleven

evening

greater

fifteen

twelve

## ACROSS

3. 1 nickel + 1 dime = \_\_\_\_ ¢
5.  $841 = 800 + 30 + \underline{\hspace{1cm}}$
6.  $53 - 4 = \underline{\hspace{1cm}}$
7. 734 is \_\_\_\_ than 685
9. 4 rows of 2 cups are \_\_\_\_ cups

## DOWN

1.  $20 + 50 + 8 + 4 = 70 + \underline{\hspace{1cm}}$
2.  $16 - \underline{\hspace{1cm}} = 9$
4. 420 has \_\_\_\_ tens
5. 6:15 p.m. is in the \_\_\_\_
8. 1 fourth of a pie is \_\_\_\_ than 1 third

Name: \_\_\_\_\_

PACK

1

LEVEL

B

WEEK

12

# SNAKE

Fill in each blank box in order, combining the numbers from the previous two boxes.

|     |     |     |
|-----|-----|-----|
| 1   | +18 |     |
|     |     | -9  |
|     | +18 |     |
| -16 |     |     |
|     | -5  | +19 |

|     |    |    |     |    |
|-----|----|----|-----|----|
|     | -9 |    | -2  |    |
| -10 |    |    |     | +7 |
|     |    |    | -4  |    |
|     | +4 |    | +13 |    |
|     |    | -5 |     | 20 |

|     |     |     |     |
|-----|-----|-----|-----|
| 10  |     | -15 |     |
| +6  | +5  |     | +25 |
|     |     |     |     |
| +13 | +5  |     |     |
|     | -21 |     |     |

|     |     |    |
|-----|-----|----|
|     | -10 |    |
| +11 |     | +9 |
|     |     |    |
| -15 |     | -7 |
|     | +15 | 6  |

Name: \_\_\_\_\_

PACK

1

LEVEL


B


WEEK


12

# NUMTANGA


In each empty box, write the matching value between adjacent cards.


|   |                 |
|---|-----------------|
| <b>19</b>   | <b>20+1</b>     |
|  | <b>eighteen</b> |


|   |               |
|---|---------------|
| <b>15</b>   | <b>10+8</b>   |
|  | <b>twelve</b> |

|   |                  |
|---|------------------|
| <b>29</b>   | <b>10+3</b>      |
|  | <b>seventeen</b> |






|  |                    |
|--|--------------------|
| <b>21</b>  | <b>20+4</b>        |
|  | <b>twenty nine</b> |


|   |                 |
|---|-----------------|
| <b>12</b>   | <b>10+4</b>     |
|  | <b>nineteen</b> |

|   |                 |
|---|-----------------|
| <b>24</b>   | <b>10+6</b>     |
|  | <b>thirteen</b> |




|   |                |
|---|----------------|
| <b>28</b>   | <b>10+9</b>    |
|  | <b>fifteen</b> |

|   |                    |
|---|--------------------|
| <b>17</b>   | <b>10+1</b>        |
|  | <b>twenty four</b> |

|   |                     |
|---|---------------------|
| <b>16</b>   | <b>10+7</b>         |
|  | <b>twenty eight</b> |

Name: \_\_\_\_\_

# KAKOOMA

PACK

1

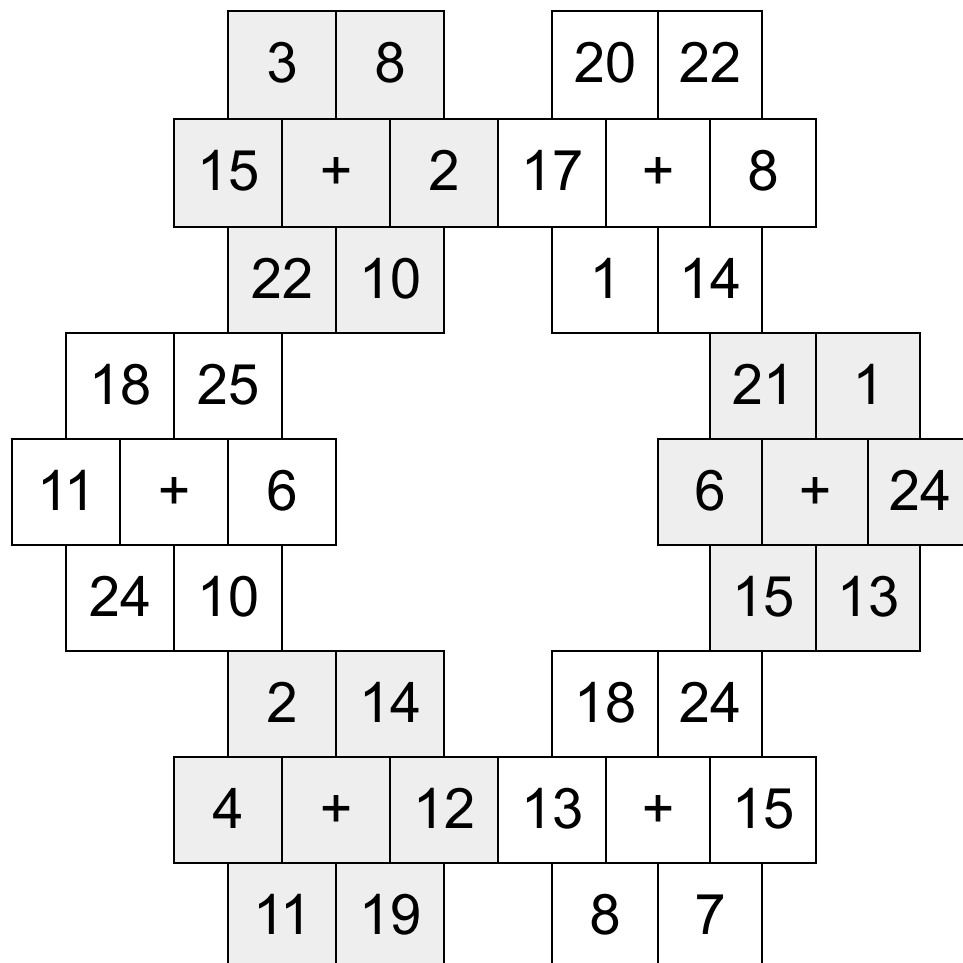
LEVEL

B

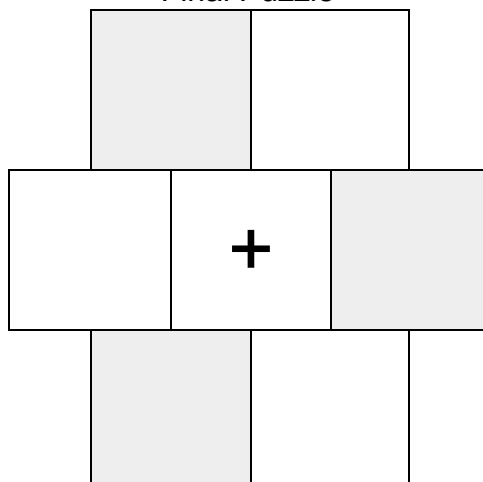
WEEK

12

In each 6-number group, find the one number that is the sum of two other numbers.  
Use all 6 sums to create a final puzzle, then solve for the final answer.



Final Puzzle



Final Answer

Name: \_\_\_\_\_

# EQUATO

PACK

1

LEVEL

B

WEEK

12

Fill in the empty boxes to make every horizontal and vertical equation correct.  
Read equations left to right and top to bottom. Use every number in the bank once.

1      2      3      4      5      6

|   |   |   |   |   |   |   |
|---|---|---|---|---|---|---|
| 8 | + |   | - |   | = | 7 |
| + |   | + |   | = |   | + |
| 4 | - |   | + |   | = |   |
| - |   | + |   | - |   | - |
| 9 | - |   | + | 2 | = | 7 |
| = |   | = |   | - |   | = |
| 3 | = | 8 | + | 1 | - | 6 |