

Name: _____

PACK

1

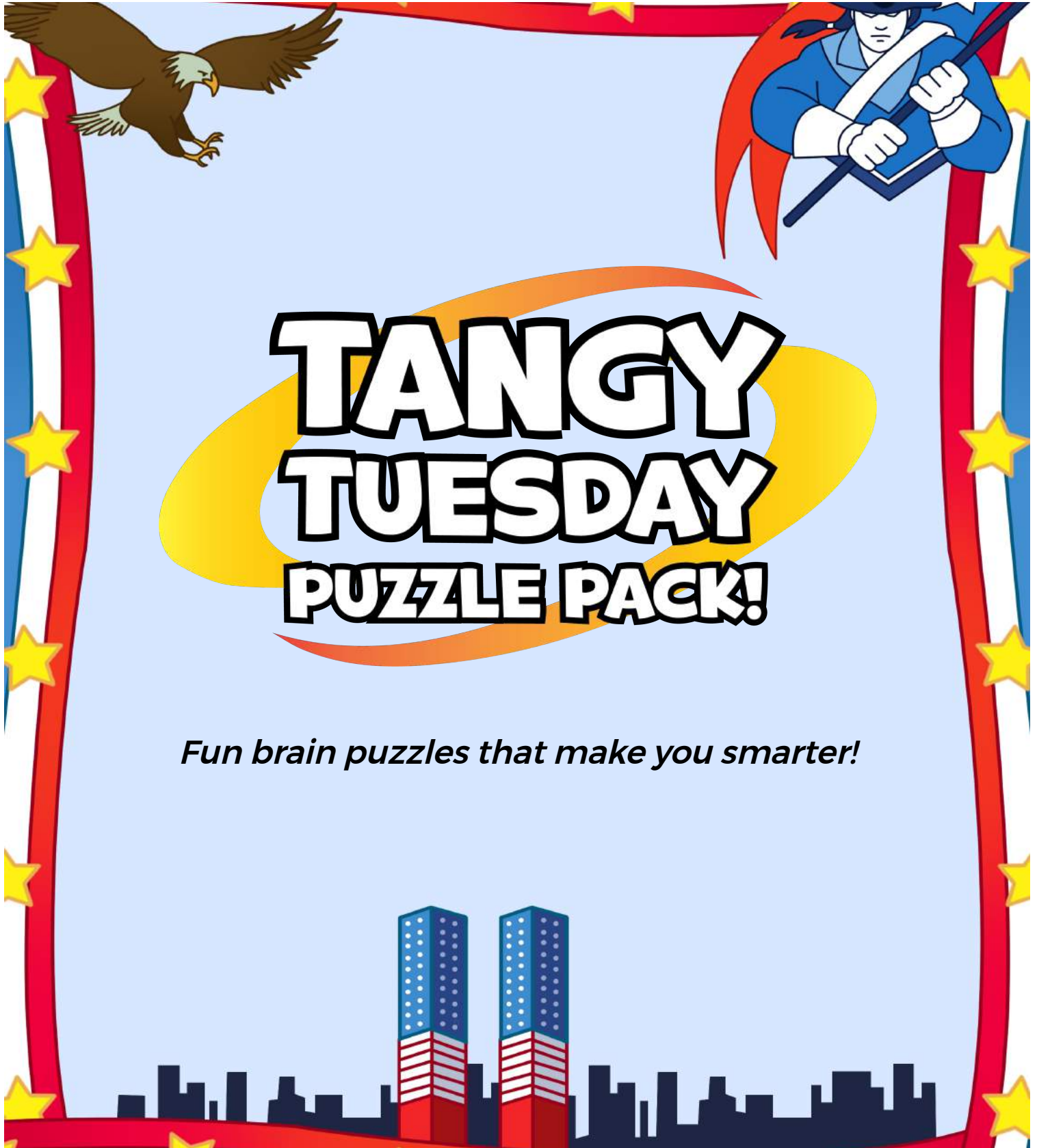
LEVEL

B

WEEK

2

TANGY TUESDAY



Fun brain puzzles that make you smarter!

Name: _____

DIGICROSS

PACK

1


LEVEL

B

WEEK

2

Complete the crossword by filling in a word that fits each clue.



six shorter tens quarters seven penny ninety-four seventy eight less

ACROSS

4. $60 + 30 + 4$
5. 1 inch is ____ than 1 yard
6. $976 = 900 + \text{____} + 6$
7. $11 - 5$
9. 1 ____ = \$.01

DOWN

1. 2 rows of 4 plums are ____ plums
2. 961 is ____ than 965
3. 4 ____ make a whole
6. $8 + \text{____} = 15$
8. $187 = 1 \text{ hundred} + 8 \text{ ____} + 7 \text{ ones}$

Name: _____

SNAKE

PACK

1

LEVEL

B

WEEK

2

Fill in each blank box in order, combining the numbers from the previous two boxes.

4	+1		+8		+7		-4	
								-6
	+9		-3		+3		+1	
-14								
	+5		-8		+13		-12	4

12			-3				-4	
-11		+17		-10		+3		-2
+15		-9		+6		-11		+3
	-5				+6			7

Name: _____

PACK

1

LEVEL


B


WEEK


2


NUMTANGA


In each empty box, write the matching value between adjacent cards.


17	10+1
	twenty four


15	10+8
	twelve


14	10+5
	sixteen


18	20+9
	eleven

16	10+7
	twenty eight

13	20+8
	fourteen

12	10+4
	nineteen

19	20+1
	eighteen

11	10+2
	twenty one

Name: _____

KAKOOMA

PACK

1

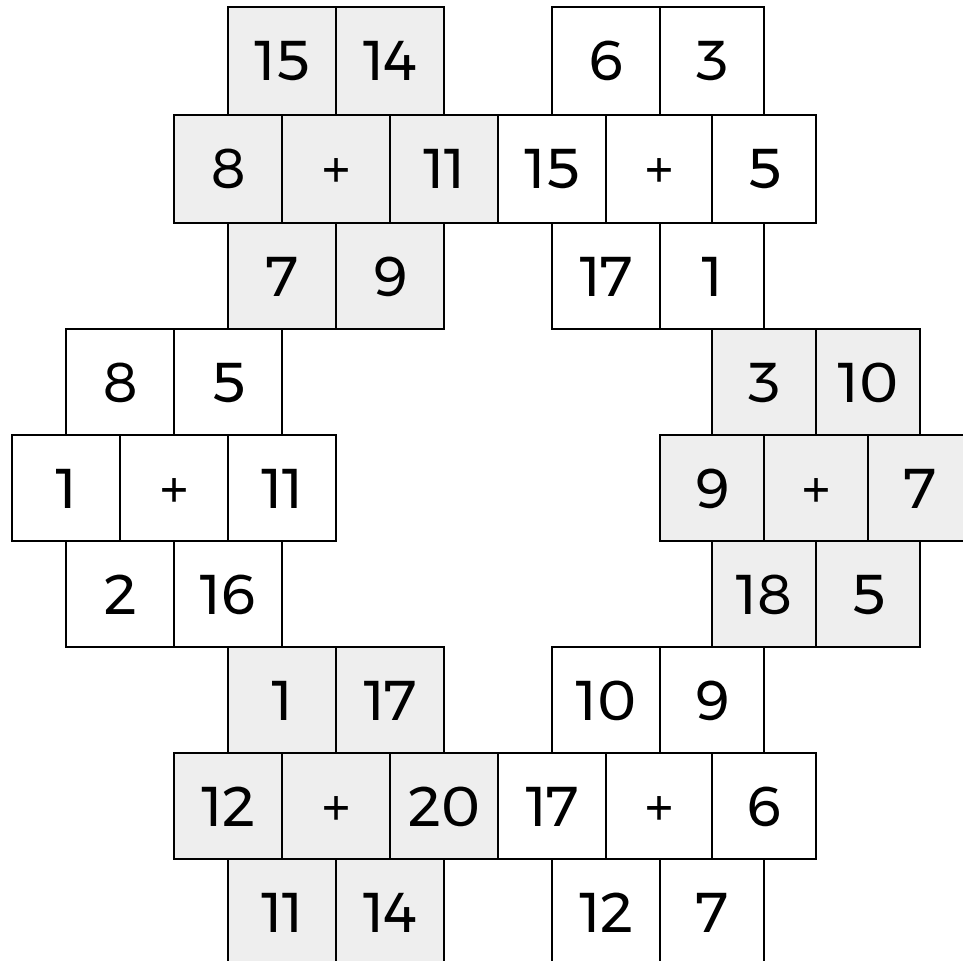
LEVEL

B

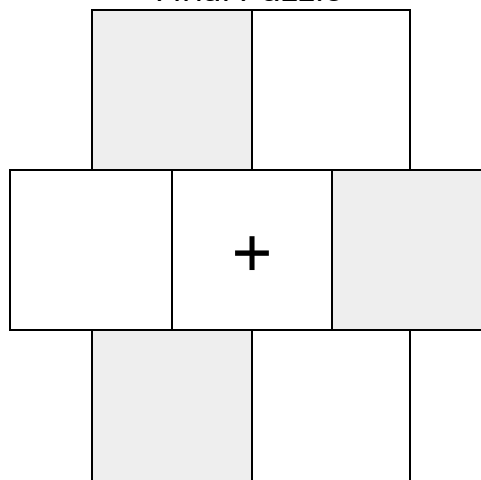
WEEK

2

In each 6-number group, find the one number that is the sum of two other numbers.
Use all 6 sums to create a final puzzle, then solve for the final answer.



Final Puzzle



Final Answer

--

Name: _____

EQUATO

PACK

1

LEVEL

B

WEEK

2

Fill in the empty boxes to make every horizontal and vertical equation correct.
Read equations left to right and top to bottom. Use every number in the bank once.

1 2 3 4 5 6

9	-		=		-	2
+		-		+		=
	+		+		=	8
-		=		-		-
7	-	6	=	8	-	7
=		-		=		+
3	=	4	-		+	1

