

Name: \_\_\_\_\_

PACK

1

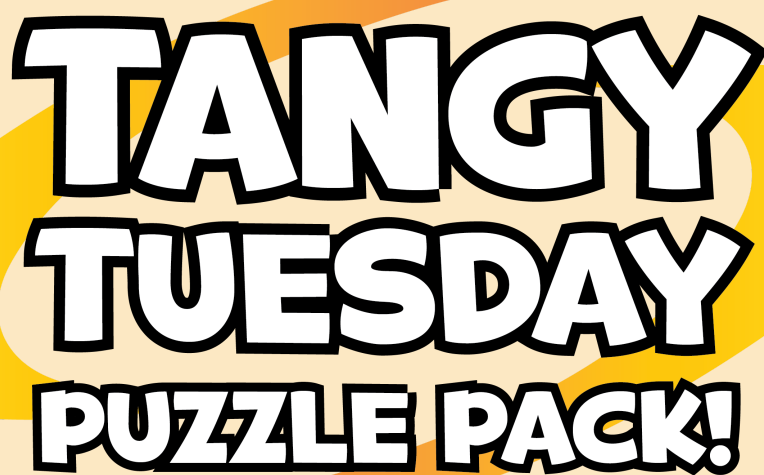
LEVEL

B

WEEK

4

# TANGY TUESDAY

The title 'TANGY TUESDAY PUZZLE PACK!' is written in a large, bold, white font with a thick black outline. It is centered on a light orange background. Behind the text is a large, stylized yellow and orange swirl. The entire page is framed by a border of autumn leaves in shades of yellow and orange. At the bottom, there is a small illustration of a brown basket filled with yellow and orange leaves.

## TANGY TUESDAY PUZZLE PACK!

*Fun brain puzzles that make you smarter!*

Name: \_\_\_\_\_

# DIGICROSS

PACK

1


LEVEL

B

WEEK

4

Complete the crossword by filling in a word that fits each clue.



ninety-four    less    tens    eight    seven    forty    yard    ten    one    thirds

## ACROSS

4.  $458 = 4 \text{ hundreds} + 5 \text{ } \underline{\hspace{1cm}} + 8 \text{ ones}$
5.  $1 \text{ penny} = \underline{\hspace{1cm}} \text{ ¢}$
6.  $60 + 30 + 4$
8.  $12 - 4$
10.  $1 \text{ foot is shorter than } 1 \text{ } \underline{\hspace{1cm}}$

## DOWN

1.  $961 \text{ is } \underline{\hspace{1cm}} \text{ than } 965$
2.  $8 + \underline{\hspace{1cm}} = 15$
3.  $342 = 300 + \underline{\hspace{1cm}} + 2$
7.  $3 \text{ } \underline{\hspace{1cm}} \text{ make a whole}$
9.  $2 \text{ rows of } 5 \text{ hats are } \underline{\hspace{1cm}} \text{ hats}$

Name: \_\_\_\_\_

# SNAKE

PACK

1

LEVEL

B

WEEK

4

Fill in each blank box in order, combining the numbers from the previous two boxes.

3	+7		-8		+7		-1	
								-1
	+5		+1		-11	7		
+10								+1
	-9		+10		-18		+11	

20	-7				+5		+6	
			+2		-13			-3
	-6						-5	
-3					+10		+16	
	+2		-4				-7	13

Name: \_\_\_\_\_

PACK

1

LEVEL


B


WEEK


4


# NUMTANGA


In each empty box, write the matching value between adjacent cards.


<b>13</b>	<b>20+8</b>
	<b>fourteen</b>


<b>11</b>	<b>10+2</b>
	<b>twenty one</b>


<b>21</b>	<b>20+4</b>
	<b>twenty nine</b>


<b>18</b>	<b>20+9</b>
	<b>eleven</b>

<b>16</b>	<b>10+7</b>
	<b>twenty eight</b>

<b>17</b>	<b>10+1</b>
	<b>twenty four</b>

<b>12</b>	<b>10+4</b>
	<b>nineteen</b>

<b>28</b>	<b>10+9</b>
	<b>fifteen</b>

<b>14</b>	<b>10+5</b>
	<b>sixteen</b>

Name: \_\_\_\_\_

# KAKOOMA

PACK

1

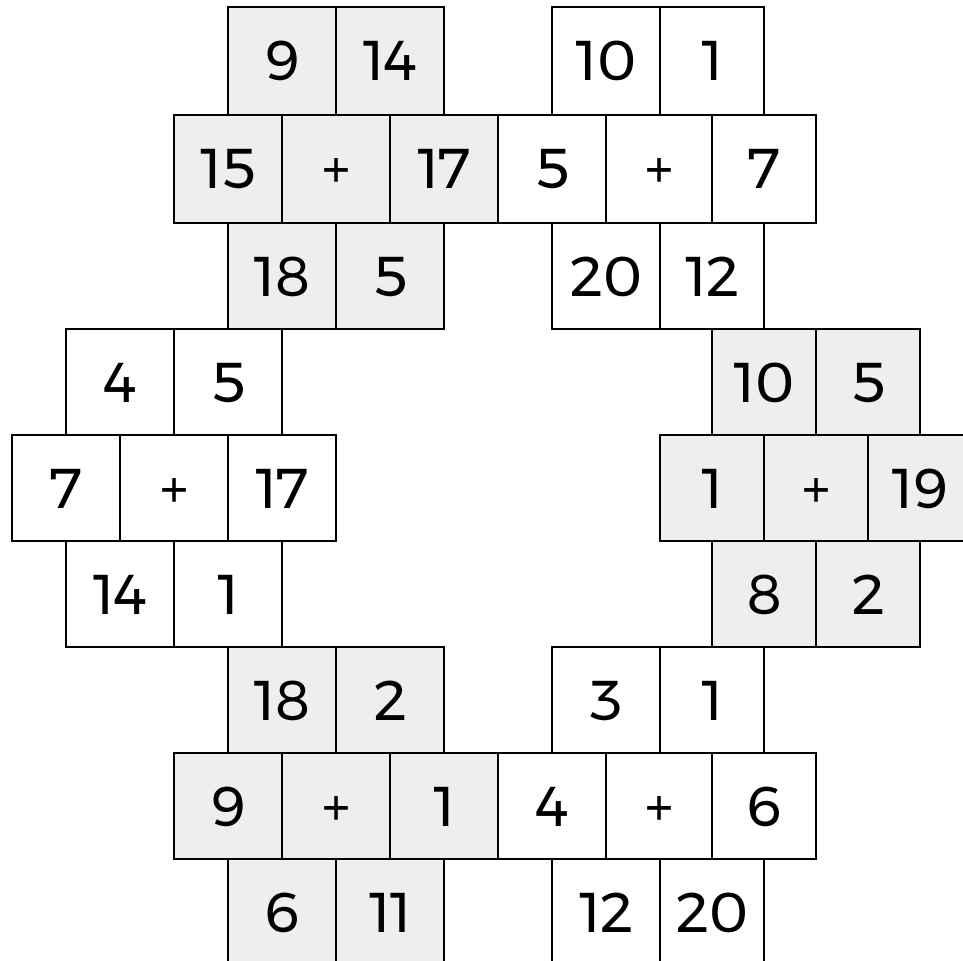
LEVEL

B

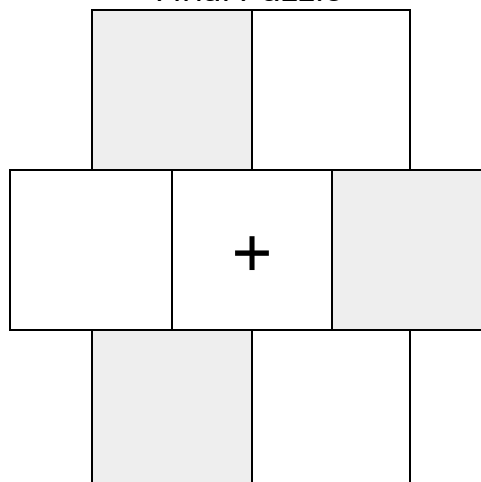
WEEK

4

In each 6-number group, find the one number that is the sum of two other numbers.  
Use all 6 sums to create a final puzzle, then solve for the final answer.



Final Puzzle



Final Answer

Name: \_\_\_\_\_

# EQUATO

PACK

1

LEVEL

B

WEEK

4

Fill in the empty boxes to make every horizontal and vertical equation correct.  
Read equations left to right and top to bottom. Use every number in the bank once.

1      2      3      4      5      6

2	=	9	-		-	
=		-		=		=
8	-	7	+		=	
-		=		-		+
	=	3	+	4	-	6
-		-		+		-
5	+	1	+		=	8