

Name: _____

PACK

1

LEVEL

B

WEEK

5

TANGY TUESDAY



Name: _____

DIGICROSS

PACK

1


LEVEL

B

WEEK

5

Complete the crossword by filling in a word that fits each clue.



less eight tens thirty-six six one yard twenty halves nine

ACROSS

2. $6 + \underline{\hspace{1cm}} = 14$
4. 2 rows of 3 cups are cups
6. $428 = 400 + \underline{\hspace{1cm}} + 8$
9. 2 make a whole
10. $187 = 1 \text{ hundred} + 8 \underline{\hspace{1cm}} + 7 \text{ ones}$

DOWN

1. 961 is than 965
3. $20 + 10 + 6$
5. 1 penny = ¢
7. $13 - 4$
8. 1 foot is shorter than 1

Name: _____

PACK

1

LEVEL

B

WEEK

5

SNAKE

Fill in each blank box in order, combining the numbers from the previous two boxes.

10	+8		-12		+4		-2	
								-5
	+2		-5		+6		+8	
-5								
	+5		-12		+12		+4	18

18	-9			-3		+12	
		-1	-12				+5
	+7					-2	
-14			+3			-15	
	+13		-1			+9	10

Name: _____

PACK

1

LEVEL


B


WEEK


5


NUMTANGA


In each empty box, write the matching value between adjacent cards.


24	10+6
	thirteen


19	20+1
	eighteen


16	10+7
	twenty eight


21	20+4
	twenty nine

13	20+8
	fourteen

14	10+5
	sixteen

12	10+4
	nineteen

11	10+2
	twenty one

28	10+9
	fifteen

Name: _____

KAKOOMA

PACK

1

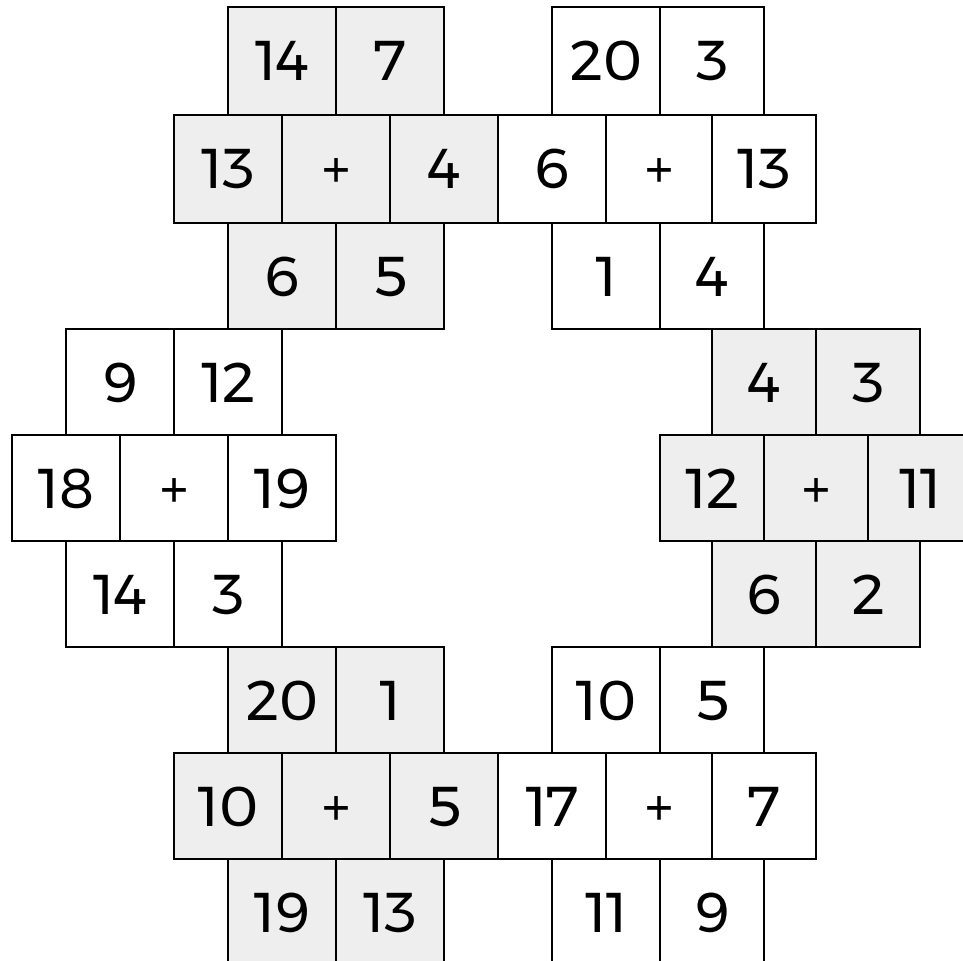
LEVEL

B

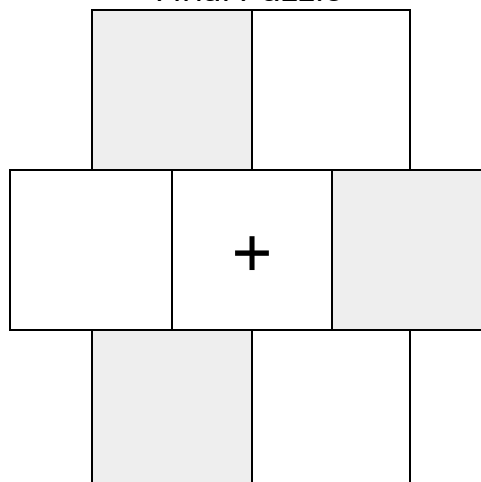
WEEK

5

In each 6-number group, find the one number that is the sum of two other numbers.
Use all 6 sums to create a final puzzle, then solve for the final answer.



Final Puzzle



Final Answer

Name: _____

EQUATO

PACK

1

LEVEL

B

WEEK

5

Fill in the empty boxes to make every horizontal and vertical equation correct.
Read equations left to right and top to bottom. Use every number in the bank once.

1 2 3 4 5 6

5	=	9	-		-	3
-		-		=		=
4	=	8	+		-	
=		=		+		+
7	=	8	-		+	2
-		-		-		-
6	=	7	+		-	