

Name: _____

PACK

1

LEVEL

B

WEEK

8

TANGY TUESDAY



Fun brain puzzles that make you smarter!

Name: _____

DIGICROSS

PACK

1


LEVEL

B

WEEK

8

Complete the crossword by filling in a word that fits each clue.



one whole eight seven fifty less tens six longer fifty-four

ACROSS

1. $753 = 700 + \underline{\hspace{1cm}} + 3$
3. $12 - 4$
4. 2 rows of 3 cups are $\underline{\hspace{1cm}}$ cups
8. 1 penny = $\underline{\hspace{1cm}}$ ¢
9. 1 yard is $\underline{\hspace{1cm}}$ than 1 foot

DOWN

1. $20 + 30 + 4$
2. $187 = 1 \text{ hundred} + 8 \underline{\hspace{1cm}} + 7 \text{ ones}$
5. $8 + \underline{\hspace{1cm}} = 15$
6. 3 thirds make a $\underline{\hspace{1cm}}$
7. 961 is $\underline{\hspace{1cm}}$ than 965

Name: _____

SNAKE

PACK

1

LEVEL

B

WEEK

8

Fill in each blank box in order, combining the numbers from the previous two boxes.

| | | | | | | | |
|-----|-----|-----|----|----|-----|----|-----|
| 19 | | | -4 | | | +1 | |
| -15 | | -10 | | +1 | +17 | | -4 |
| | | | | | | | |
| +10 | | +16 | | -1 | -14 | | -11 |
| | -10 | | | | +10 | | 5 |

| | | | | | | | | |
|---|----|--|-----|--|----|--|----|-----|
| 1 | +4 | | +10 | | -5 | | -9 | |
| | | | | | | | | +17 |

| | | | | | | | | |
|----|----|--|-----|--|----|--|-----|---|
| | +1 | | +1 | | +8 | | -17 | |
| -7 | | | | | | | | |
| | +4 | | +12 | | -9 | | -9 | 2 |

Name: _____

PACK

1

LEVEL


B


WEEK


8


NUMTANGA


In each empty box, write the matching value between adjacent cards.


| | |
|---|--------------------|
| 17 | 10+1 |
|  | twenty four |


| | |
|---|-----------------|
| 13 | 20+8 |
|  | fourteen |


| | |
|---|-----------------|
| 24 | 10+6 |
|  | thirteen |


| | |
|---|---------------|
| 18 | 20+9 |
|  | eleven |

| | |
|---|--------------------|
| 21 | 20+4 |
|  | twenty nine |

| | |
|---|-----------------|
| 19 | 20+1 |
|  | eighteen |

| | |
|---|----------------|
| 14 | 10+5 |
|  | sixteen |

| | |
|---|---------------|
| 15 | 10+8 |
|  | twelve |

| | |
|---|---------------------|
| 16 | 10+7 |
|  | twenty eight |

Name: _____

KAKOOMA

PACK

1

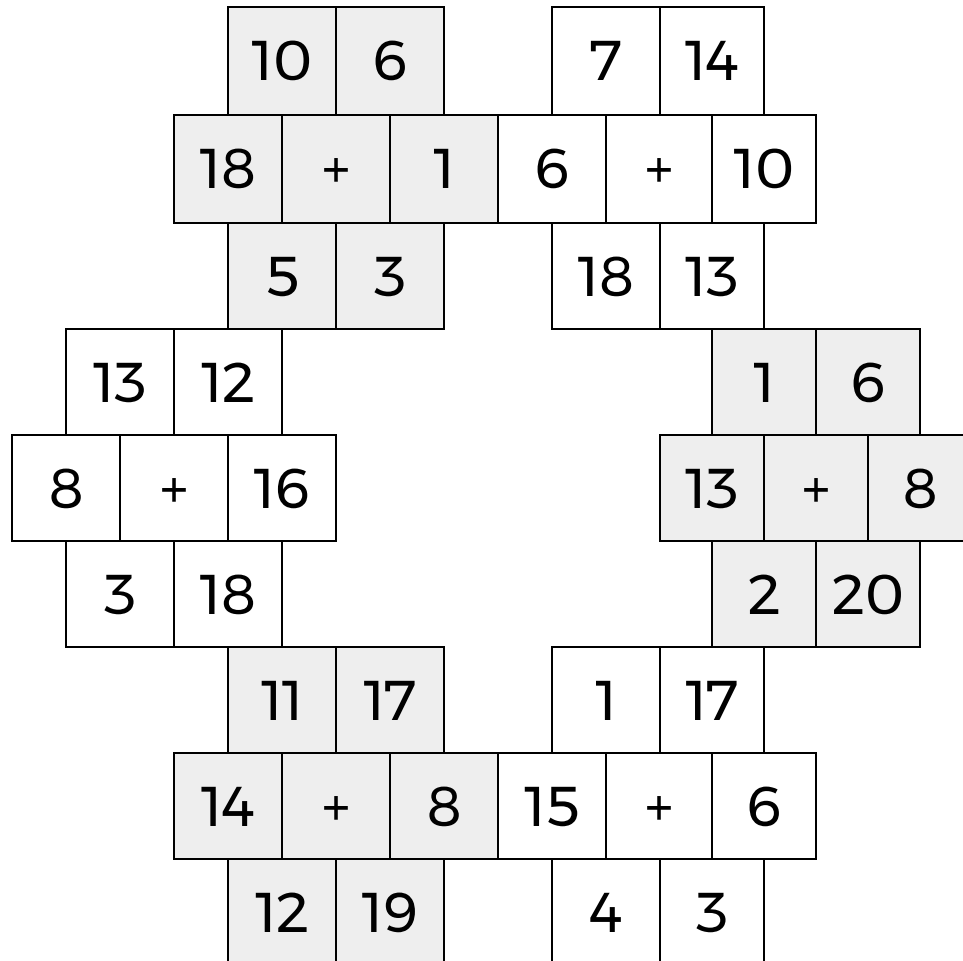
LEVEL

B

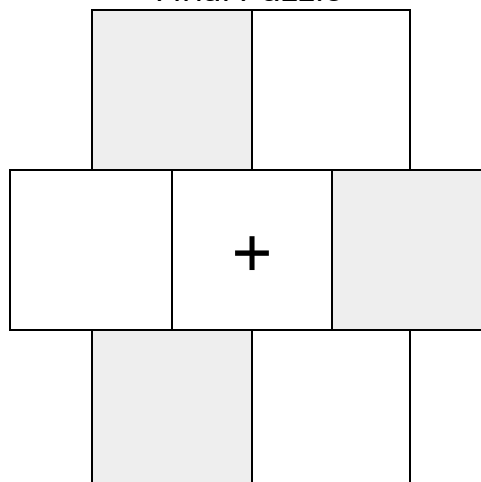
WEEK

8

In each 6-number group, find the one number that is the sum of two other numbers.
Use all 6 sums to create a final puzzle, then solve for the final answer.



Final Puzzle



Final Answer

Name: _____

EQUATO

PACK

1

LEVEL

B

WEEK

8

Fill in the empty boxes to make every horizontal and vertical equation correct.
Read equations left to right and top to bottom. Use every number in the bank once.

1 2 3 4 5 6

| | | | | | | |
|---|---|---|---|---|---|---|
| 8 | - | 3 | + | | = | |
| + | | + | | = | | + |
| 5 | + | | - | | = | 7 |
| - | | - | | + | | - |
| 9 | + | 1 | - | 2 | = | 8 |
| = | | = | | - | | = |
| 4 | = | 6 | + | | - | |