

Name: \_\_\_\_\_

PACK

1

LEVEL

B

WEEK

8

# TANGY TUESDAY



Name: \_\_\_\_\_

# DIGICROSS

PACK

1

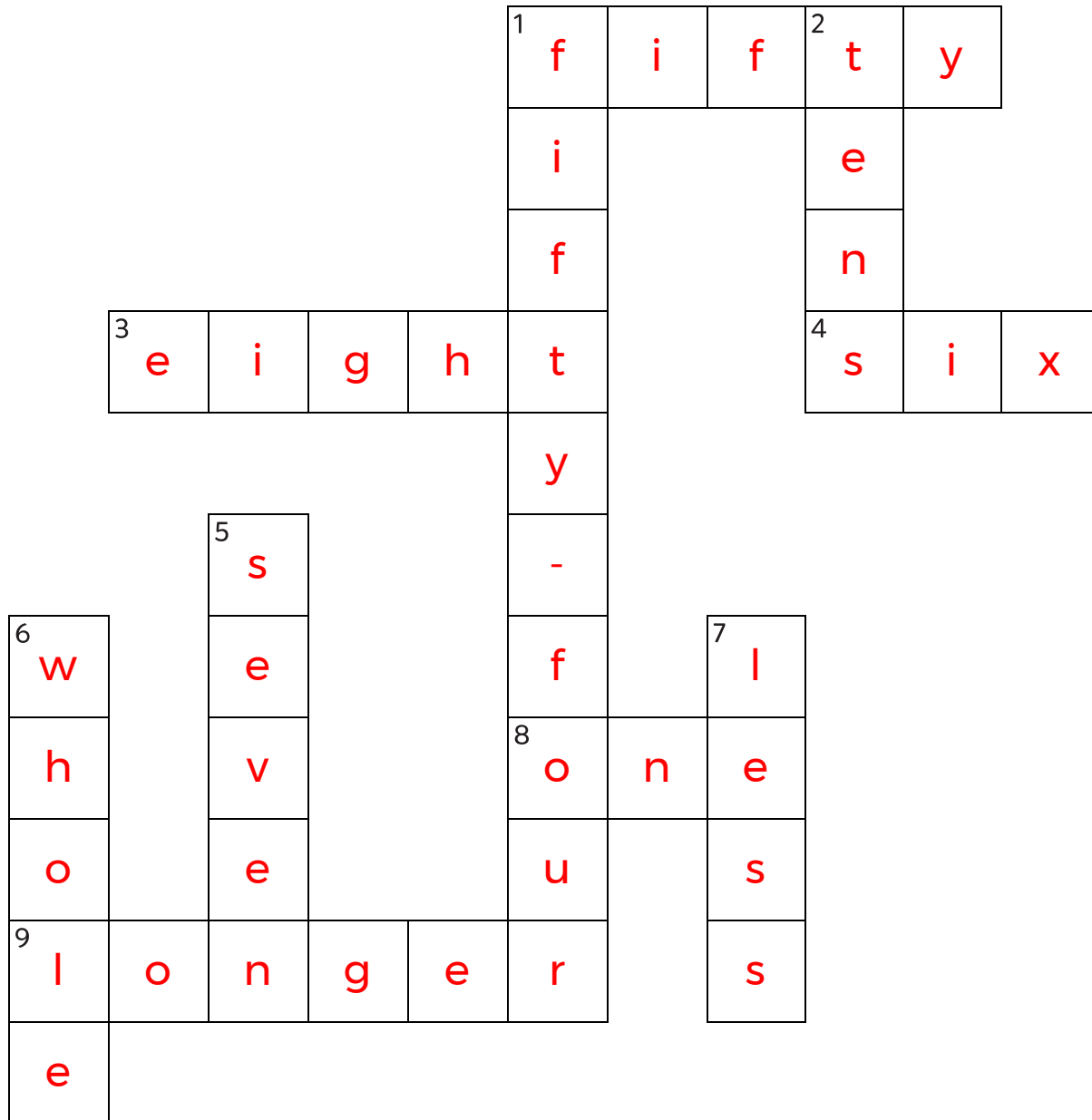
LEVEL

B

WEEK

8

Complete the crossword by filling in a word that fits each clue.



one      whole      eight      seven      fifty      less      tens      six      longer      fifty-four

## ACROSS

1.  $753 = 700 + \underline{\hspace{1cm}} + 3$
3.  $12 - 4$
4. 2 rows of 3 cups are  $\underline{\hspace{1cm}}$  cups
8. 1 penny =  $\underline{\hspace{1cm}}$  ¢
9. 1 yard is  $\underline{\hspace{1cm}}$  than 1 foot

## DOWN

1.  $20 + 30 + 4$
2.  $187 = 1 \text{ hundred} + 8 \underline{\hspace{1cm}} + 7 \text{ ones}$
5.  $8 + \underline{\hspace{1cm}} = 15$
6. 3 thirds make a  $\underline{\hspace{1cm}}$
7. 961 is  $\underline{\hspace{1cm}}$  than 965

Name: \_\_\_\_\_

# SNAKE

PACK

1

LEVEL

B

WEEK

8

Fill in each blank box in order, combining the numbers from the previous two boxes.

19		10	-4	6		19	+1	20
-15		-10		+1		+17		-4
4		20		7		2		16
+10		+16		-1		-14		-11
14	-10	4		6	+10	16		5

1	+4	5	+10	15	-5	10	-9	1
								+17
11	+1	10	+1	9	+8	1	-17	18
-7								
4	+4	8	+12	20	-9	11	-9	2

Name: \_\_\_\_\_

PACK

1

LEVEL


B

WEEK


8

# NUMTANGA


In each empty box, write the matching value between adjacent cards.

<b>17</b>	<b>10+1</b>
	<b>twenty four</b>

14

<b>13</b>	<b>20+8</b>
	<b>fourteen</b>


13

<b>24</b>	<b>10+6</b>
	<b>thirteen</b>


11

28


19

<b>18</b>	<b>20+9</b>
	<b>eleven</b>

29

<b>21</b>	<b>20+4</b>
	<b>twenty nine</b>


21

<b>19</b>	<b>20+1</b>
	<b>eighteen</b>


16

24


17

<b>14</b>	<b>10+5</b>
	<b>sixteen</b>

15

<b>15</b>	<b>10+8</b>
	<b>twelve</b>

12

<b>16</b>	<b>10+7</b>
	<b>twenty eight</b>

Name: \_\_\_\_\_

# KAKOOMA

PACK

1

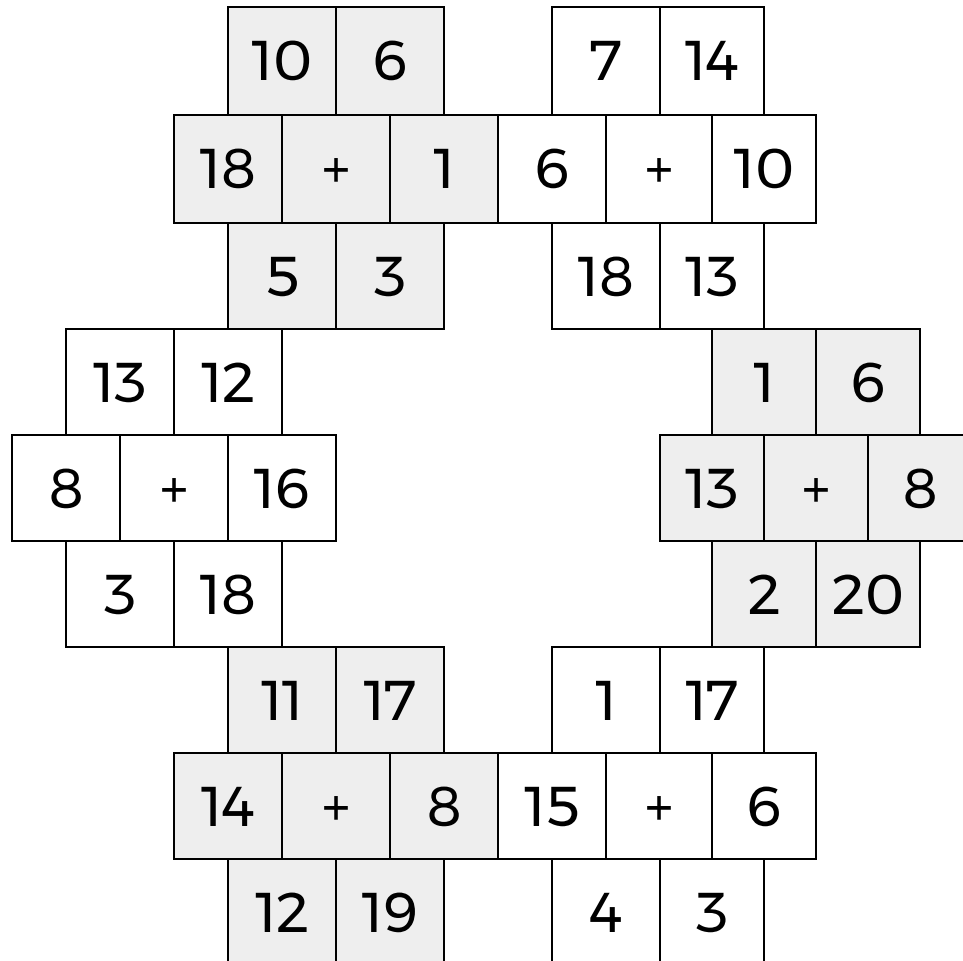
LEVEL

B

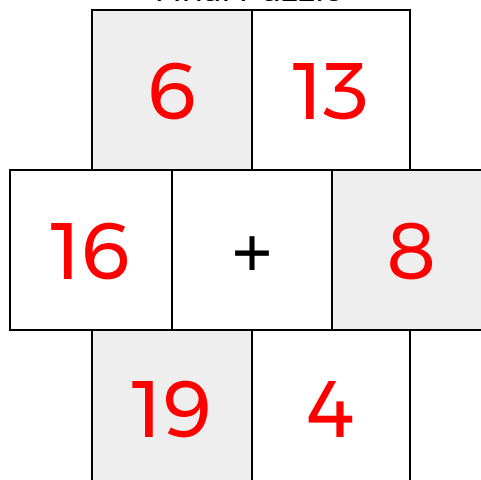
WEEK

8

In each 6-number group, find the one number that is the sum of two other numbers.  
Use all 6 sums to create a final puzzle, then solve for the final answer.



Final Puzzle



Final Answer



Name: \_\_\_\_\_

# EQUATO

PACK

1

LEVEL

B

WEEK

8

Fill in the empty boxes to make every horizontal and vertical equation correct.  
Read equations left to right and top to bottom. Use every number in the bank once.

1      2      3      4      5      6

8	-	3	+	1	=	6
+		+		=		+
5	+	4	-	2	=	7
-		-		+		-
9	+	1	-	2	=	8
=		=		-		=
4	=	6	+	3	-	5