

Name: \_\_\_\_\_

PACK

1

LEVEL

B

WEEK

9

# TANGY TUESDAY

# TANGY TUESDAY PUZZLE PACK!

*Fun brain puzzles that make you smarter!*

Name: \_\_\_\_\_

# DIGICROSS

PACK

1


LEVEL

B

WEEK

9

Complete the crossword by filling in a word that fits each clue.



whole      penny      less      forty-two      eight      tens      twenty      five      four      foot

## ACROSS

1. 2 rows of 2 pears are \_\_\_\_ pears
3. 3 thirds make a \_\_\_\_
4.  $428 = 400 + \underline{\hspace{1cm}} + 8$
7. 325 is \_\_\_\_ than 335
8. 1 inch is shorter than 1 \_\_\_\_

## DOWN

1.  $11 + \underline{\hspace{1cm}} = 16$
2.  $30 + 10 + 2$
4.  $187 = 1 \text{ hundred} + 8 \underline{\hspace{1cm}} + 7 \text{ ones}$
5.  $11 - 3$
6.  $1 \underline{\hspace{1cm}} = \$0.01$

Name: \_\_\_\_\_

# SNAKE

PACK

1

LEVEL

B

WEEK

9

Fill in each blank box in order, combining the numbers from the previous two boxes.

14			-3			-6	
-1		-4		+9		+6	+3
-6		-4		-12		-12	-1
	+11				+15		9

4	+13		-16		+9		+7	
								-11
	-16		+2		-2		+11	
+11								
	-5		+12		-16		+14	17

Name: \_\_\_\_\_

PACK

1

LEVEL


B


WEEK


9

# NUMTANGA


In each empty box, write the matching value between adjacent cards.


<b>13</b>	<b>20+8</b>
	<b>fourteen</b>


<b>24</b>	<b>10+6</b>
	<b>thirteen</b>

<b>18</b>	<b>20+9</b>
	<b>eleven</b>






<b>21</b>	<b>20+4</b>
	<b>twenty nine</b>


<b>12</b>	<b>10+4</b>
	<b>nineteen</b>

<b>17</b>	<b>10+1</b>
	<b>twenty four</b>




<b>14</b>	<b>10+5</b>
	<b>sixteen</b>

<b>15</b>	<b>10+8</b>
	<b>twelve</b>

<b>19</b>	<b>20+1</b>
	<b>eighteen</b>

Name: \_\_\_\_\_

# KAKOOMA

PACK

1

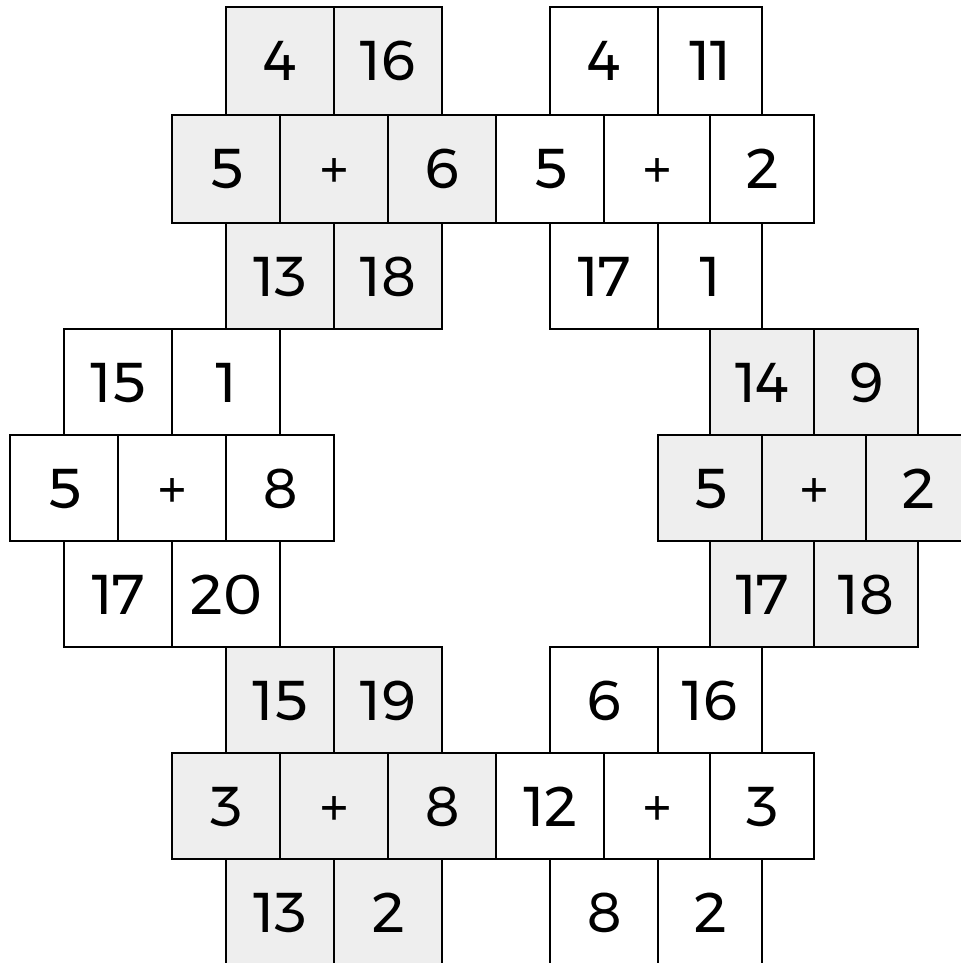
LEVEL

B

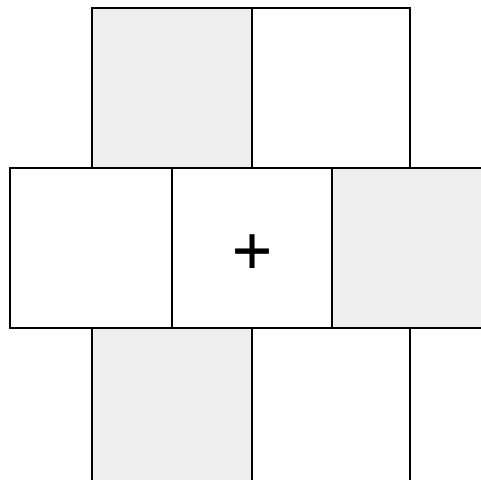
WEEK

9

In each 6-number group, find the one number that is the sum of two other numbers.  
Use all 6 sums to create a final puzzle, then solve for the final answer.



Final Puzzle



Final Answer

--

Name: \_\_\_\_\_

# EQUATO

PACK

1

LEVEL

B

WEEK

9

Fill in the empty boxes to make every horizontal and vertical equation correct.  
Read equations left to right and top to bottom. Use every number in the bank once.

1      2      3      4      5      6

9	+		-	8	=	7
+		+		-		-
2	-		+		=	
-		=		-		+
3	=	9	-	1	-	5
=		-		=		=
8	+		-		=	7