

Name: _____

PACK

1

LEVEL

C

WEEK

2

TANGY TUESDAY



Name: _____

DIGICROSS

PACK

1


LEVEL

C

WEEK

2

Complete the crossword by filling in a word that fits each clue.



nine two tens thirty sixty seven twelve eighth twenty four

ACROSS

2. 23 is closest to ____ tens
4. 1:30 = 1 hour + ____ minutes
7. 3 groups with 4 in each group
9. area of square with side of 3
10. one of 8 equal parts

DOWN

1. 6 groups of 4 = ____ groups of 6
3. 14 divided into 2 equal groups
5. $936 - 511 = 400 + \underline{\hspace{1cm}} + 5$
6. $3 \times 20 = 3 \times 2 \underline{\hspace{1cm}}$
8. $422 + 345 = 700 + \underline{\hspace{1cm}} + 7$

Name: _____

SNAKE

PACK

1

LEVEL

C

WEEK

2

Fill in each blank box in order, combining the numbers from the previous two boxes.

45	-4	
		+5
	-42	
-3		
	+32	

	-16		+15	
+1				-2
			-24	
	+16		+4	
			-17	6

12		
-3		+11
-7		+17
	+12	

	-16	
		+16
	+6	
	-14	

	-3	
+16		-7
-30		+10
		20

Name: _____

PACK

1

LEVEL

C

WEEK

2

NUMTANGA

In each empty box, write the matching value between adjacent cards.

97	40+9
	sixty eight

87	60+4
	forty nine

56	70+3
	forty six

73	90+7
	thirty nine

78	80+3
	seventy three

64	60+8
	ninety five

95	70+8
	fifty six

54	50+6
	sixty four

49	90+5
	fifty four

Name: _____

KAKOOMA

PACK

1

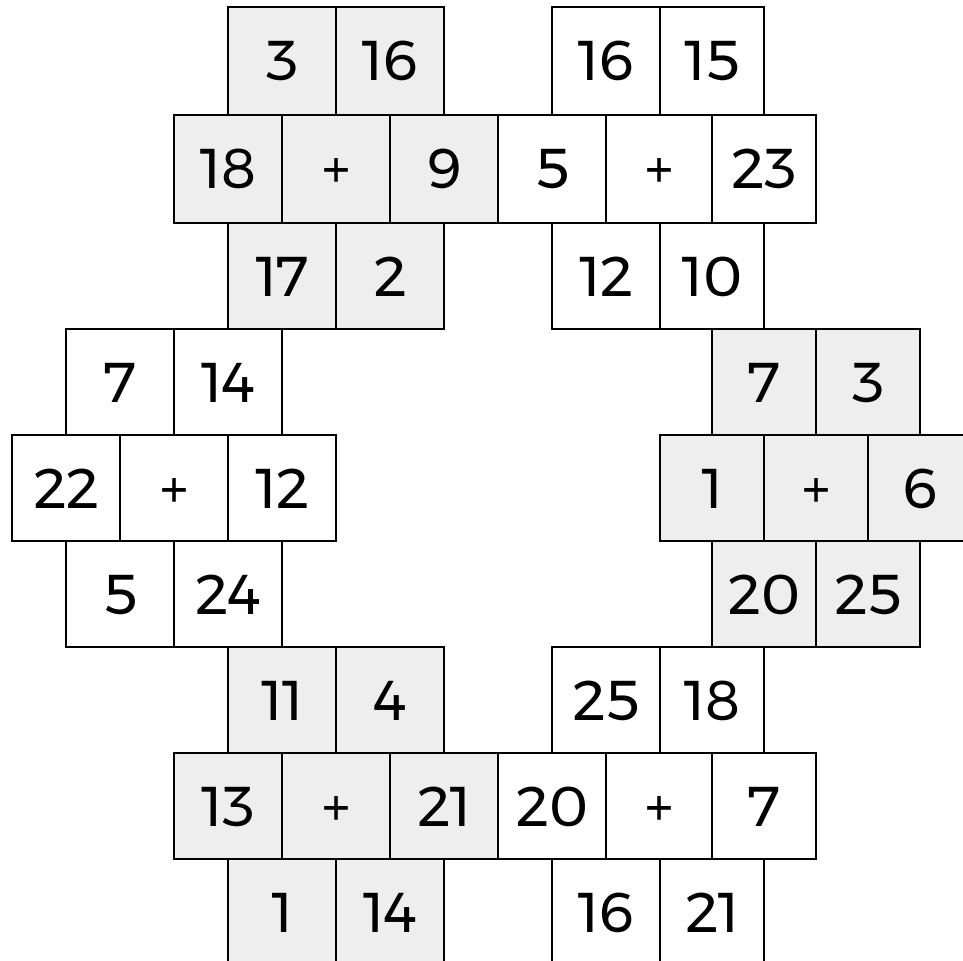
LEVEL

C

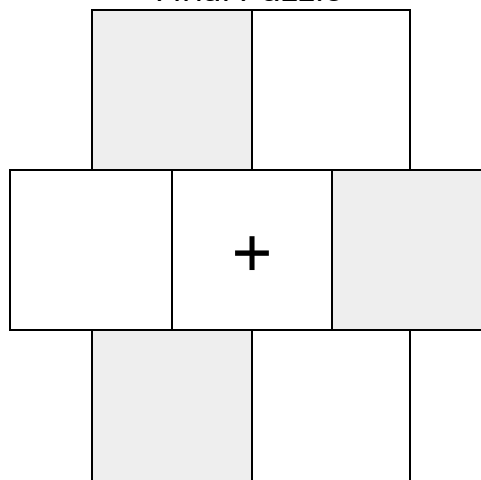
WEEK

2

In each 6-number group, find the one number that is the sum of two other numbers.
Use all 6 sums to create a final puzzle, then solve for the final answer.



Final Puzzle



Final Answer

Name: _____

EQUATO

PACK

1

LEVEL

C

WEEK

2

Fill in the empty boxes to make every horizontal and vertical equation correct.
Read equations left to right and top to bottom. Use every number in the bank once.

1 2 3 4 5 6 7 8

9	-		-		=	
-		+		=		+
4	+	8	-	5	=	
-		-		+		-
	+	6	-	1	=	
=		=		-		=
2	=	3	+		-	

