

Name: _____

PACK

1

LEVEL

C

WEEK

5

TANGY TUESDAY



Fun brain puzzles that make you smarter!

Name: _____

DIGICROSS

PACK

1

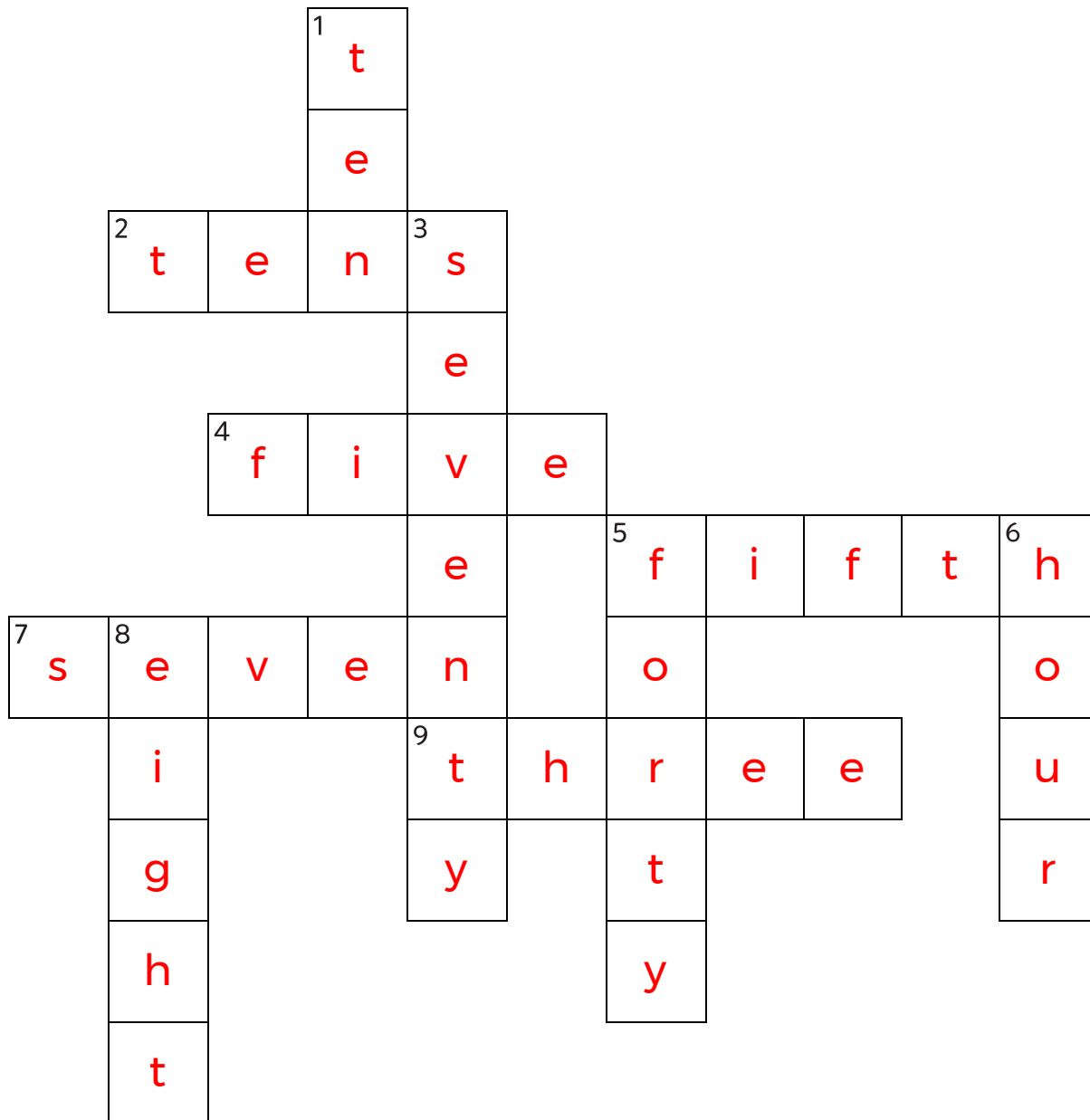
LEVEL

C

WEEK

5

Complete the crossword by filling in a word that fits each clue.



tens forty eight three hour seventy ten fifth five seven

ACROSS

2. $3 \times 20 = 3 \times 2$ ____
4. 10 divided into 2 equal groups
5. one of 5 equal parts
7. 4 groups of 7 = ____ groups of 4
9. 32 is closest to ____ tens

DOWN

1. 2 groups with 5 in each group
3. $127 + 452 = 500 + \text{____} + 9$
5. $478 - 237 = 200 + \text{____} + 1$
6. $:45 + :15 = 1 \text{ ____}$
8. area of rectangle with sides 2 and 4

Name: _____

SNAKE

PACK

1

LEVEL

C

WEEK

5

Fill in each blank box in order, combining the numbers from the previous two boxes.

41		30	-10	20		10	+23	33
-17		+12		-13		-3		-8
24		18		7		13		25
+20		-13		-5		+7		-11
44	-13	31		2	+4	6		14

7	+8	15	+8	23	+18	41	+2	43
								+5
48	-40	8	+39	47	-35	12		48
+43								-32
5	+3	2	-48	50	+32	18	+2	16

Name: _____

PACK

1

LEVEL

C

WEEK

5

NUMTANGA

In each empty box, write the matching value between adjacent cards.

68	30+9
	eighty seven

39

73	90+7
	thirty nine

97

83	80+7
	ninety seven

68

64

95

78	80+3
	seventy three

83

54	50+6
	sixty four

54

49	90+5
	fifty four

78

56

49

87	60+4
	forty nine

87

56	70+3
	forty six

46

39	40+6
	eighty three

Name: _____

KAKOOMA

PACK

1

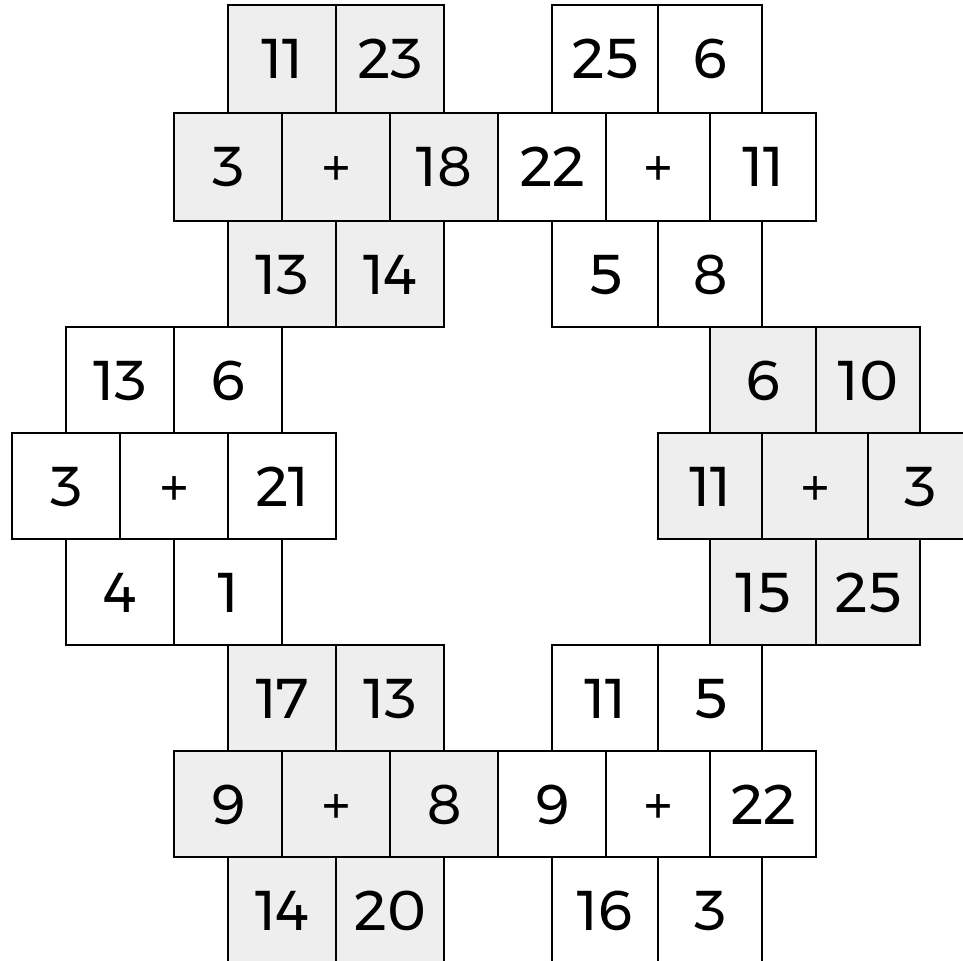
LEVEL

C

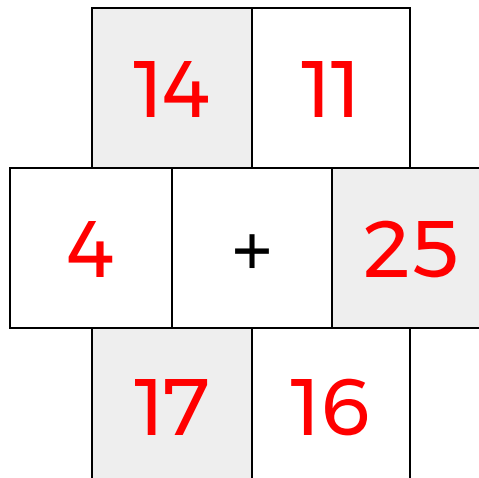
WEEK

5

In each 6-number group, find the one number that is the sum of two other numbers.
Use all 6 sums to create a final puzzle, then solve for the final answer.



Final Puzzle



Final Answer

25

Name: _____

EQUATO

PACK

1

LEVEL

C

WEEK

5

Fill in the empty boxes to make every horizontal and vertical equation correct.
Read equations left to right and top to bottom. Use every number in the bank once.

1 2 3 4 5 6 7 8

6	+	3	-	1	=	8
-		+		+		+
4	=	7	-	5	+	2
=		-		-		-
9	-	8	+	5	=	6
-		=		=		=
7	-	2	-	1	=	4