

Name: _____

PACK

1

LEVEL

C

WEEK

6

TANGY TUESDAY

TANGY TUESDAY PUZZLE PACK!

Fun brain puzzles that make you smarter!



Name: _____

DIGICROSS

PACK

1

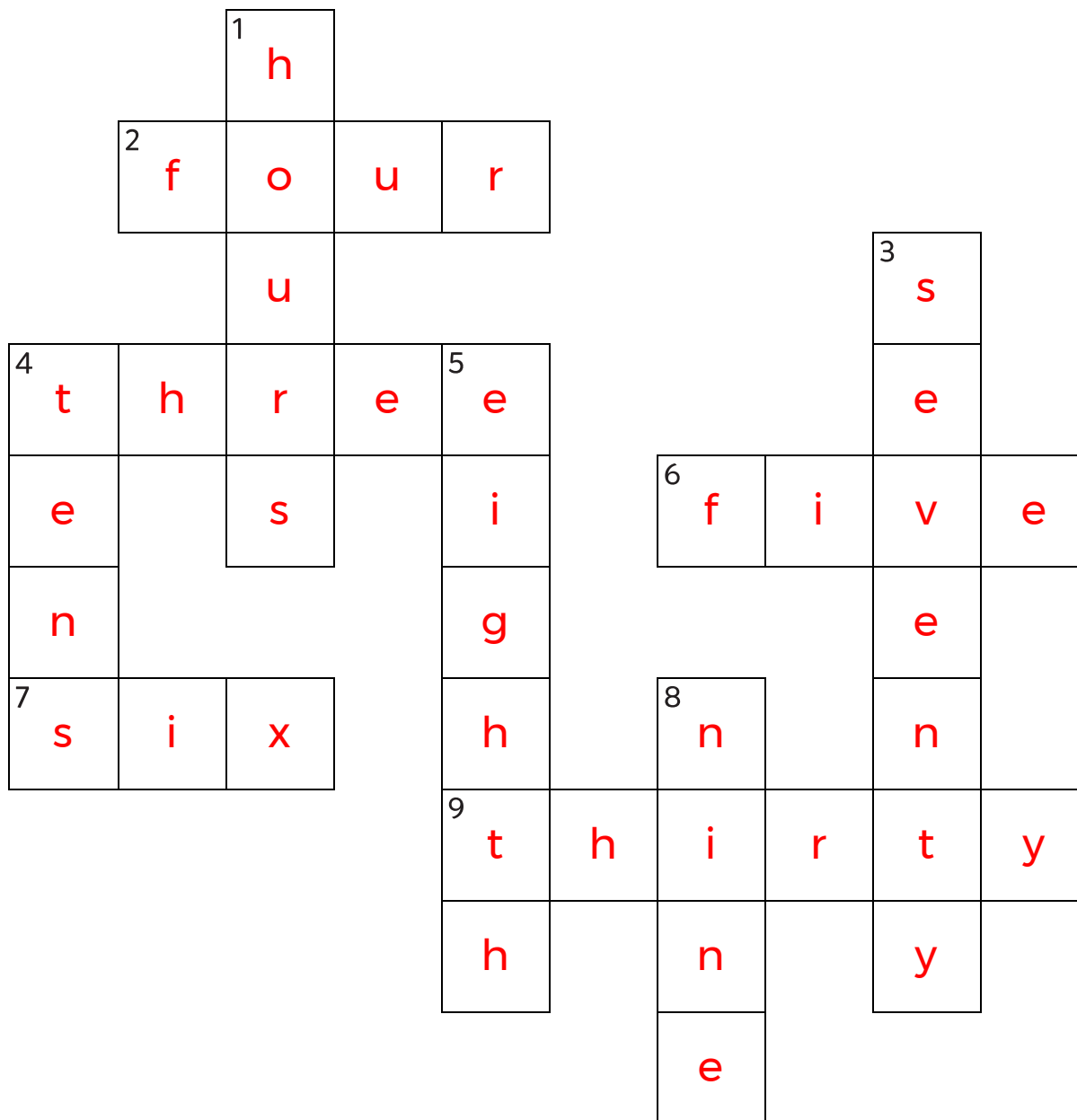
LEVEL

C

WEEK

6

Complete the crossword by filling in a word that fits each clue.



five four six eighth tens hours seventy nine three thirty

ACROSS

2. 6 groups of 4 = ____ groups of 6
4. 32 is closest to ____ tens
6. 10 divided into 2 equal groups
7. area of rectangle with sides 2 and 3
9. $589 - 354 = 200 + \underline{\hspace{1cm}} + 5$

DOWN

1. $2:45 = 2 \underline{\hspace{1cm}} + 45 \text{ minutes}$
3. $127 + 452 = 500 + \underline{\hspace{1cm}} + 9$
4. $3 \times 30 = 3 \times 3 \underline{\hspace{1cm}}$
5. one of 8 equal parts
8. 3 groups with 3 in each group

Name: _____

SNAKE

PACK

1

LEVEL

C

WEEK

6

Fill in each blank box in order, combining the numbers from the previous two boxes.

25		16	+28	44		12	+5	17
-11		-8		+4		-5		-4
14		24		48		17		13
+10		-19		-5		-17		+22
24	+19	43		43	-9	34		35

31	-27	4	+10	14	-6	8	+20	28
								-23
18	-11	7	+9	16	-2	14		5
-3								+8
21	-12	33	+24	9	-41	50	+37	13

Name: _____

PACK

1

LEVEL

C

WEEK

6

NUMTANGA

In each empty box, write the matching value between adjacent cards.

49	90+5
	fifty four

49

97	40+9
	sixty eight

56

54	50+6
	sixty four

95

68

54

83	80+7
	ninety seven

83

78	80+3
	seventy three

78

46	50+4
	seventy eight

87

73

46

87	60+4
	forty nine

64

73	90+7
	thirty nine

39

39	40+6
	eighty three

Name: _____

KAKOOMA

PACK

1

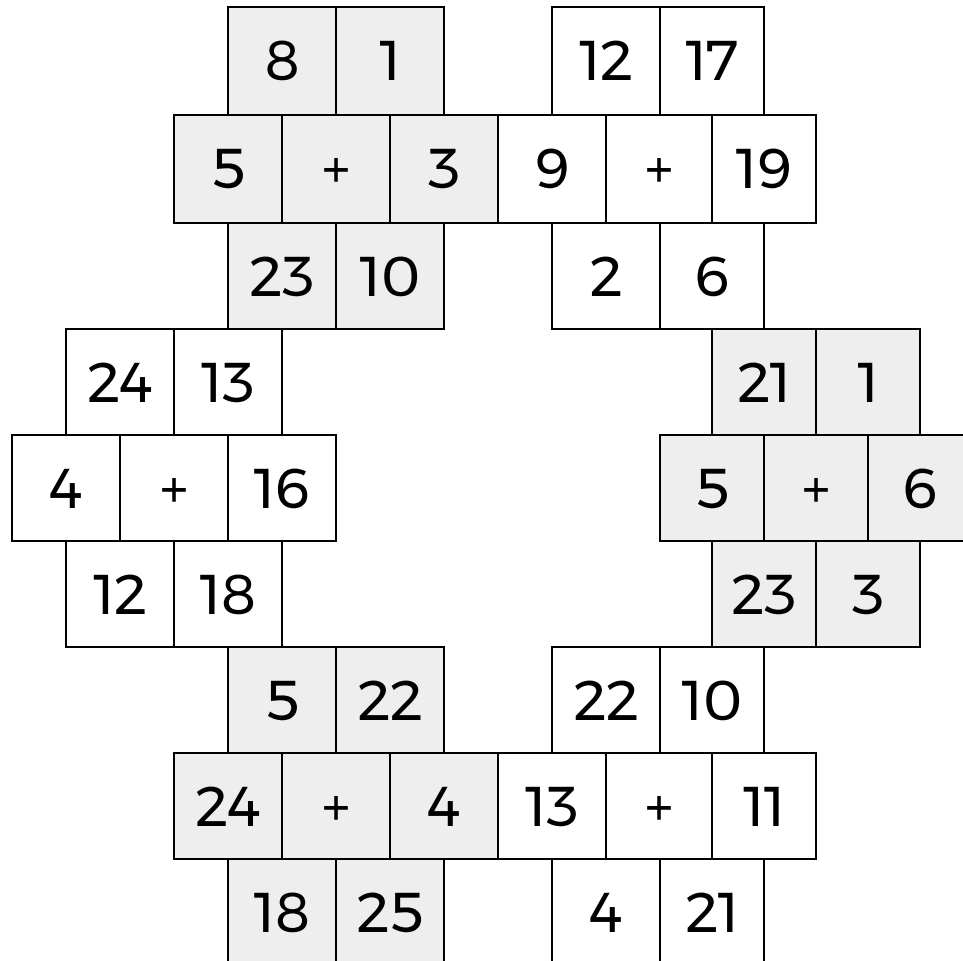
LEVEL

C

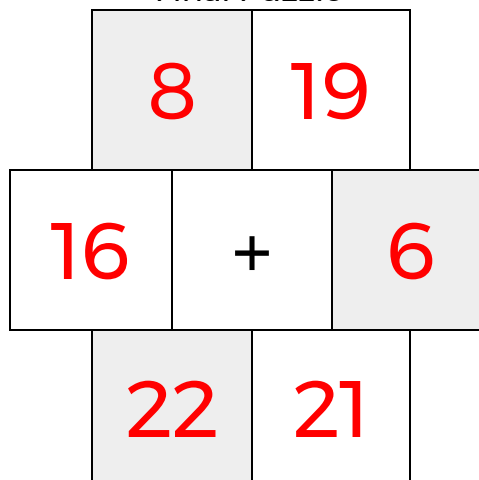
WEEK

6

In each 6-number group, find the one number that is the sum of two other numbers.
Use all 6 sums to create a final puzzle, then solve for the final answer.



Final Puzzle



Final Answer

22

Name: _____

EQUATO

PACK

1

LEVEL

C

WEEK

6

Fill in the empty boxes to make every horizontal and vertical equation correct.
Read equations left to right and top to bottom. Use every number in the bank once.

1 2 3 4 5 6 7 8

9	-	7	+	3	=	5
-		+		+		+
4	=	8	-	6	+	2
+		-		-		+
1	=	8	-	5	-	2
=		=		=		=
6	+	7	-	4	=	9