

Name: _____

PACK

1

LEVEL

C

WEEK

9

TANGY TUESDAY

TANGY TUESDAY PUZZLE PACK!

Fun brain puzzles that make you smarter!

Name: _____

DIGICROSS

PACK

1

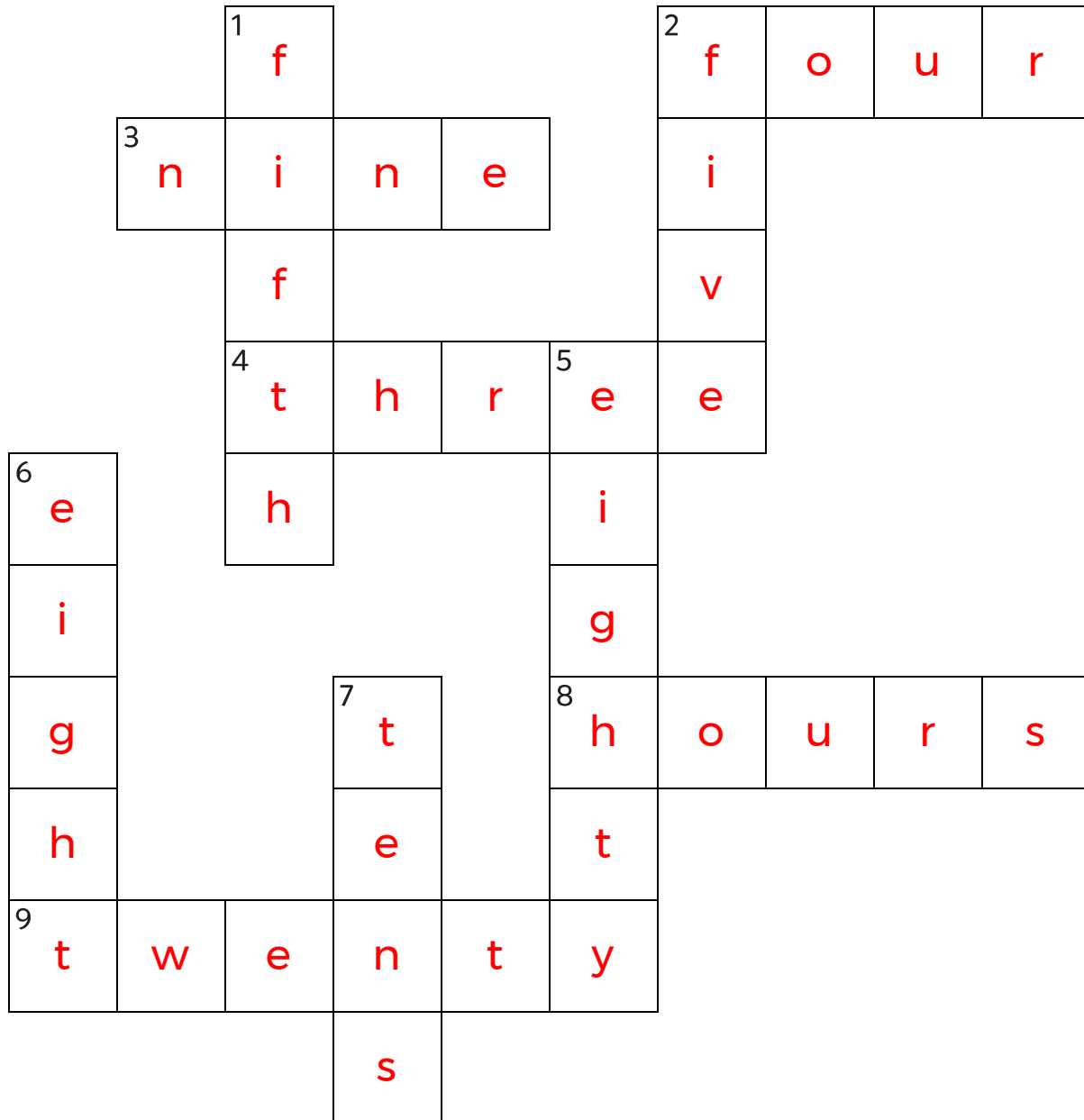
LEVEL

C

WEEK

9

Complete the crossword by filling in a word that fits each clue.



fifth tens nine three five eighty twenty hours four eight

ACROSS

2. 38 is closest to ____ tens
3. 3 groups with 3 in each group
4. 5 groups of 3 = ____ groups of 5
8. $2:45 = 2 \text{ ____} + 45 \text{ minutes}$
9. $936 - 511 = 400 + \text{ ____} + 5$

DOWN

1. one of 5 equal parts
2. 15 divided into 3 equal groups
5. $354 + 131 = 400 + \text{ ____} + 5$
6. area of rectangle with sides 2 and 4
7. $3 \times 30 = 3 \times 3 \text{ ____}$

Name: _____

SNAKE

PACK

1

LEVEL

C

WEEK

9

Fill in each blank box in order, combining the numbers from the previous two boxes.

38	-5	33
		+2
3	-32	35
+26		
29	+4	33

30	-11	19	+26	45
+8				-44
22		24	+23	1
-24		+6		
	30	-11	19	

11		49	-17	32
+13		+27		-29
24		22		3
-9		-23		+33
15	+30	45		

8	+31	39
-24		-7
32		32
+12		+4
36	-16	20
		36

Name: _____

PACK

1

LEVEL

C

WEEK

9

NUMTANGA

In each empty box, write the matching value between adjacent cards.

78	80+3
	seventy three

78

95	70+8
	fifty six

95

64	60+8
	ninety five

73

56

46

73	90+7
	thirty nine

64

54	50+6
	sixty four

83

39	40+6
	eighty three

97

54

49

97	40+9
	sixty eight

68

68	30+9
	eighty seven

87

87	60+4
	forty nine

Name: _____

KAKOOMA

PACK

1

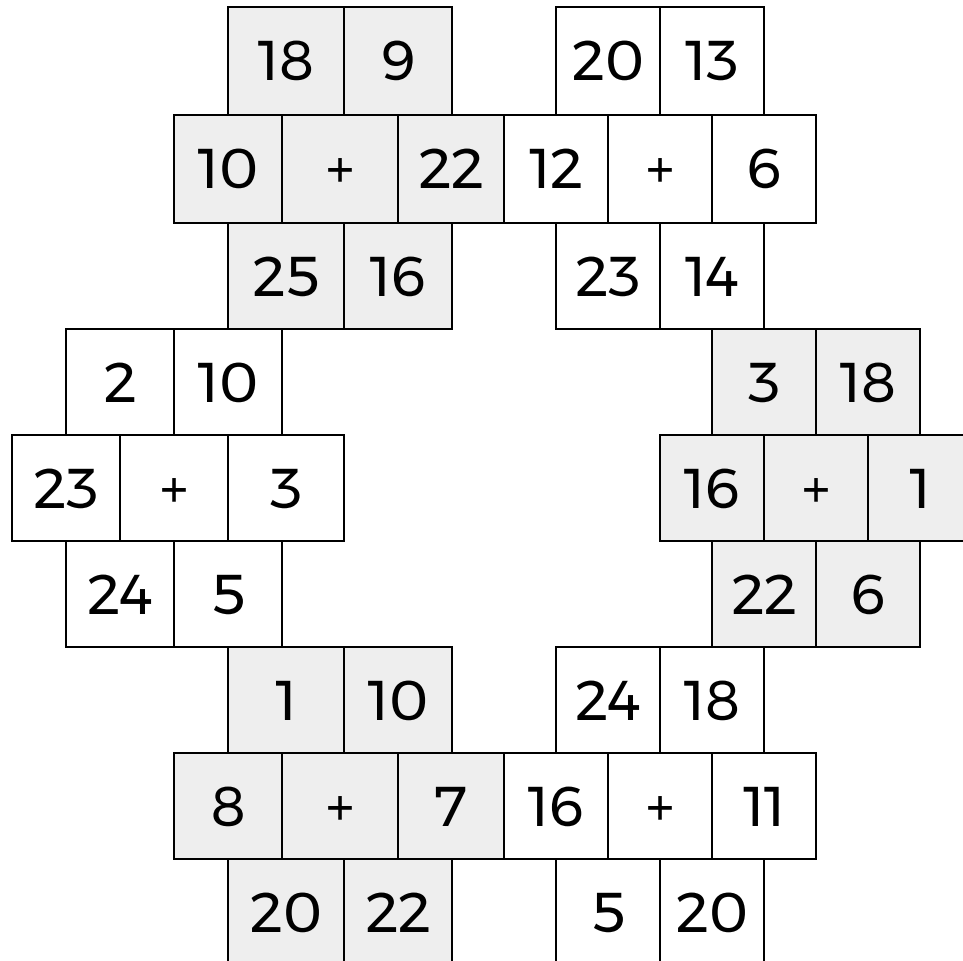
LEVEL

C

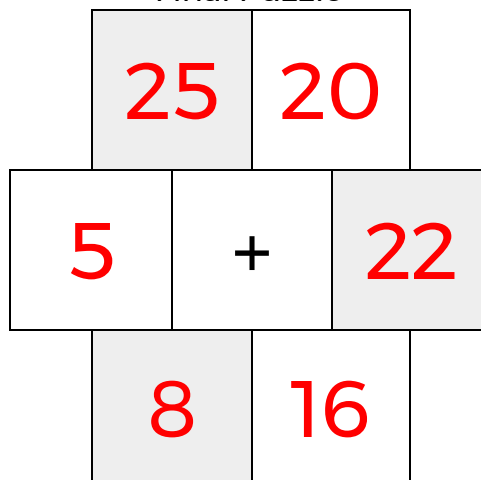
WEEK

9


In each 6-number group, find the one number that is the sum of two other numbers.
Use all 6 sums to create a final puzzle, then solve for the final answer.



Final Puzzle



Final Answer



Name: _____

EQUATO

PACK

1

LEVEL

C

WEEK

9

Fill in the empty boxes to make every horizontal and vertical equation correct.
Read equations left to right and top to bottom. Use every number in the bank once.

1 2 3 4 5 6 7 8

1	=	8	+	2	-	9
+		-		=		+
7	-	4	=	6	-	3
-		=		+		-
5	=	6	+	4	-	5
=		-		-		=
3	-	2	=	8	-	7