

Name: _____

PACK

1

LEVEL

D

WEEK

12

TANGY TUESDAY

TANGY TUESDAY PUZZLE PACK!

Fun brain puzzles that make you smarter!



Name: _____

DIGICROSS

PACK

1

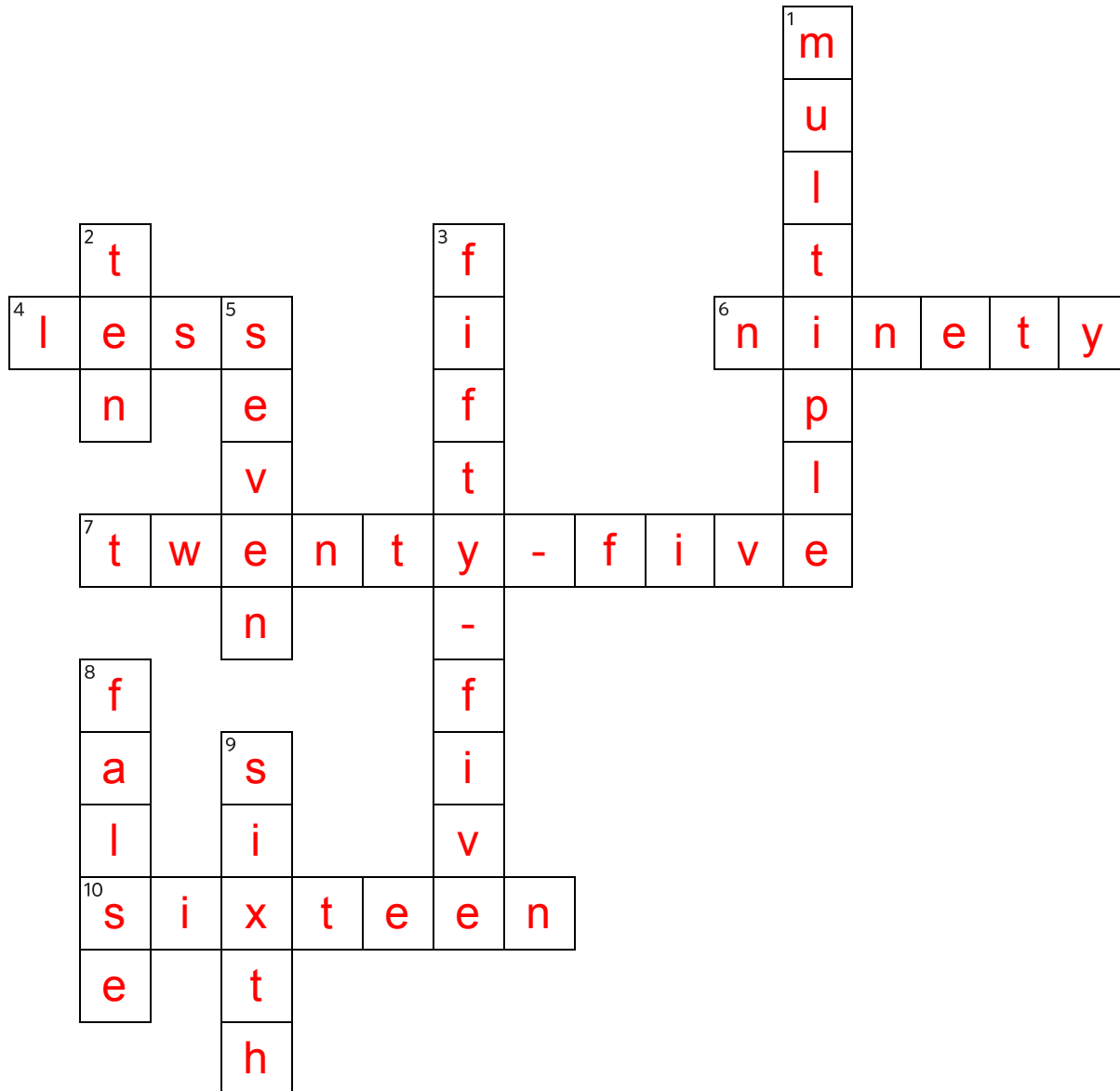
LEVEL

D

WEEK

12

Complete the crossword by filling in a word that fits each clue.



ACROSS

4. $\frac{7}{8}$ is ____ than $\frac{10}{9}$
6. $.9 =$ ____ hundredths
7. 2459 is closest to ____ hundreds
10. $176 \div 11$

DOWN

1. 75 is a ____ of 15
2. $5 \times \frac{2}{4} =$ ____ fourths
3. $15 \times 11 = 110 +$ ____
5. $247 \div 12$ has remainder ____
8. $6000 - 3999 < 2000$
9. 14 is one ____ as much as 84

Name: _____

SNAKE

PACK

1

LEVEL

D

WEEK

12

Fill in each blank box in order, combining the numbers from the previous two boxes.

5		45	÷5	9		42	÷6	7
×10		-11		×4		+18		×2
50		56		36		24		14
-8		×8		-4		×3		+49
42	÷6	7		32	÷4	8		63

10	×5	50	-2	48	÷6	8	×6	48
								-30
24	÷3	8	×4	32	+0	32		18
+9								÷2
15	×3	5	÷10	50	-4	54	×6	9

Name: _____

PACK

1

LEVEL

D

WEEK


12

NUMTANGA


In each empty box, write the matching value between adjacent cards.

\$1	5¢
	twenty cents

.10

\$.07	10¢
	fifteen cents


.15

\$.50	15¢
	nickel


.20

.40

.30

\$.20	1¢
	fifty cents

.50

\$.40	50¢
	dollar


1

\$.02	7¢
	thirty cents

.01

.75

.02

\$.25	100¢
	penny

.25

\$.05	75¢
	seven cents

.05

\$.01	2¢
	forty cents

Name: _____

KAKOOMA

PACK

1

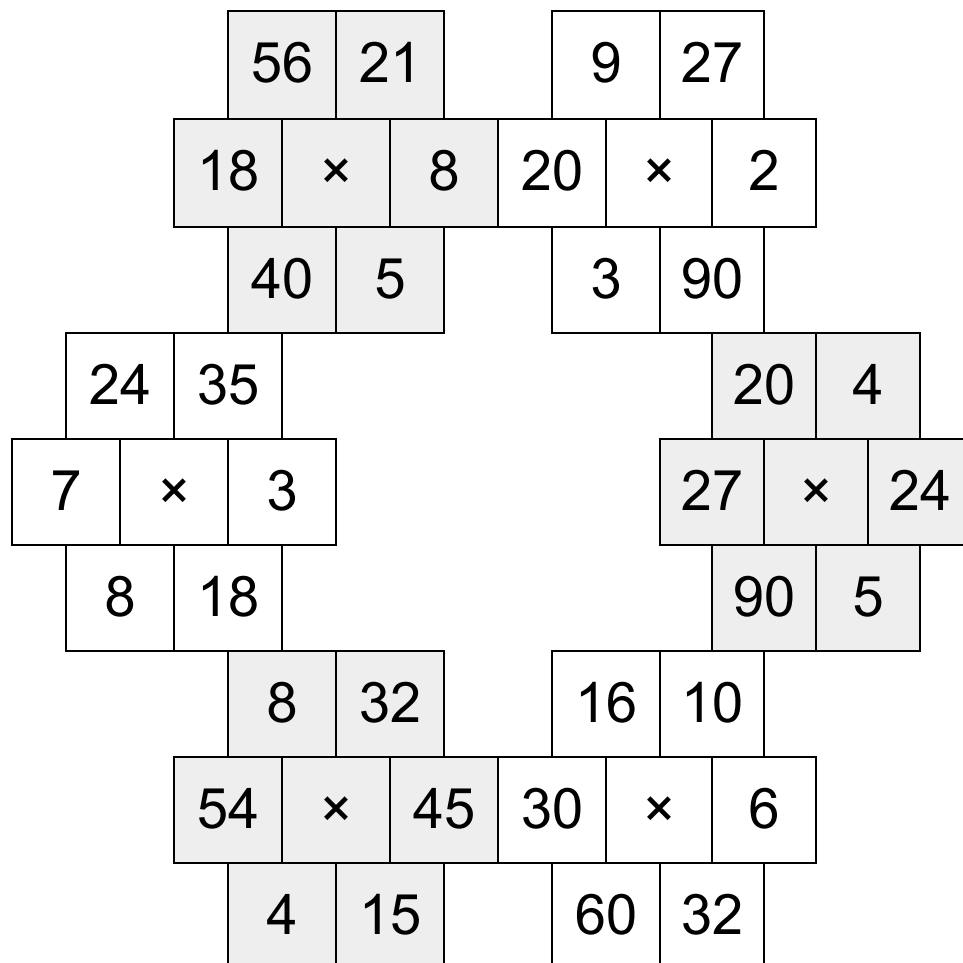
LEVEL

D

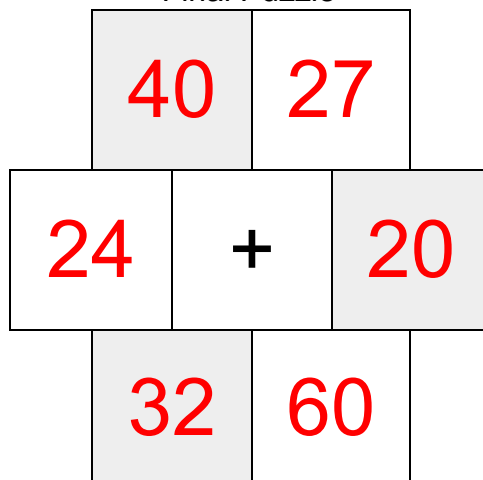
WEEK

12

In each 6-number group, find the one number that is the product of two other numbers.
Use all 6 products to create a final puzzle, then solve for the final answer.



Final Puzzle



Final Answer

60

Name: _____

EQUATO

PACK

1

LEVEL

D

WEEK

12

Fill in the empty boxes to make every horizontal and vertical equation correct.
Read equations left to right and top to bottom. Use every number in the bank once.

1 2 3 4 5 6 7 8

8	×	1	÷	2	=	4
=		×		×		=
9	−	6	÷	3	=	7
−		=		=		−
5	+	8	−	7	=	6
÷		−		−		+
5	−	2	×	1	=	3