

Name: \_\_\_\_\_

PACK

1

LEVEL

D


WEEK

6

# TANGY TUESDAY

## TANGY TUESDAY PUZZLE PACK!

*Fun brain puzzles that make you smarter!*



Name: \_\_\_\_\_

# DIGICROSS

PACK

1


LEVEL

D

WEEK

6

Complete the crossword by filling in a word that fits each clue.



six      fifteen      twelve      true      ninety      less      tenths      eight      four      three

## ACROSS

2.  $5,999 + 2,001 = 8,000$
4. 42 is \_\_\_\_ times as much as 7
5.  $3 \times 234 = 600 + \_\_\_ + 12$
6. 48 is a multiple of \_\_\_\_
8. 3 fifths + 1 fifth = \_\_\_\_ fifths

## DOWN

1.  $6/9$  is \_\_\_\_ than  $7/8$
2.  $.2 =$  two \_\_\_\_
3.  $75 \div 5$
6.  $23 \div 5$  has remainder \_\_\_\_
7. 7,600 is closest to \_\_\_\_ thousand

Name: \_\_\_\_\_

# SNAKE

PACK

1

LEVEL

D

WEEK

6

Fill in each blank box in order, combining the numbers from the previous two boxes.

2	$\times 2$		$+ 8$		$\div 3$		$\times 3$	
								$+ 0$
	$\div 5$		$\times 3$		$+ 2$	8		
$- 6$							$\div 3$	
	$\times 4$		$\div 2$		$- 4$		$\times 3$	

2	$\times 4$			$\div 3$		$\times 3$	
		$+ 4$	$+ 4$				$+ 8$
	$\div 3$				$\div 5$		
$\times 3$				$\times 4$			
	$- 8$		$\div 2$			$- 4$	12

Name: \_\_\_\_\_

PACK

1

LEVEL

D


WEEK


6

# NUMTANGA


In each empty box, write the matching value between adjacent cards.


<b>\$1</b>	<b>5¢</b>
	<b>twenty cents</b>


<b>\$.40</b>	<b>50¢</b>
	<b>dollar</b>

<b>\$.50</b>	<b>15¢</b>
	<b>nickel</b>





<b>\$.15</b>	<b>20¢</b>
	<b>seventy five cents</b>

<b>\$.07</b>	<b>10¢</b>
	<b>fifteen cents</b>

<b>\$.75</b>	<b>30¢</b>
	<b>dime</b>




<b>\$.10</b>	<b>25¢</b>
	<b>two cents</b>

<b>\$.05</b>	<b>75¢</b>
	<b>seven cents</b>

<b>\$.01</b>	<b>2¢</b>
	<b>forty cents</b>

Name: \_\_\_\_\_

# KAKOOMA

PACK

1

LEVEL

D

WEEK

6

In each 6-number group, find the one number that is the product of two other numbers.  
Use all 6 products to create a final puzzle, then solve for the final answer.

10		70		8		18			
12	×	45	12	×	20				
3		7		40		5			
48	28					5	7		
5	×	50					27	×	24
45	10					35	2		
32		7		3		30			
27	×	3	32	×	8				
21		35		10		48			

Final Puzzle

	+		

Final Answer

Name: \_\_\_\_\_

# EQUATO

PACK

1

LEVEL

D

WEEK

6

Fill in the empty boxes to make every horizontal and vertical equation correct.  
Read equations left to right and top to bottom. Use every number in the bank once.

1    2    3    4    5    6    7    8

	÷	4	=	5	-	3
+		+		=		=
	=	9	-		-	
-		÷		×		+
	=	9	÷		+	
=		=		-		-
2	+		×	1	=	7