

Name: _____

PACK

1

LEVEL

E

WEEK

9

TANGY TUESDAY

TANGY TUESDAY PUZZLE PACK!

Fun brain puzzles that make you smarter!

Name: _____

DIGICROSS

PACK

1

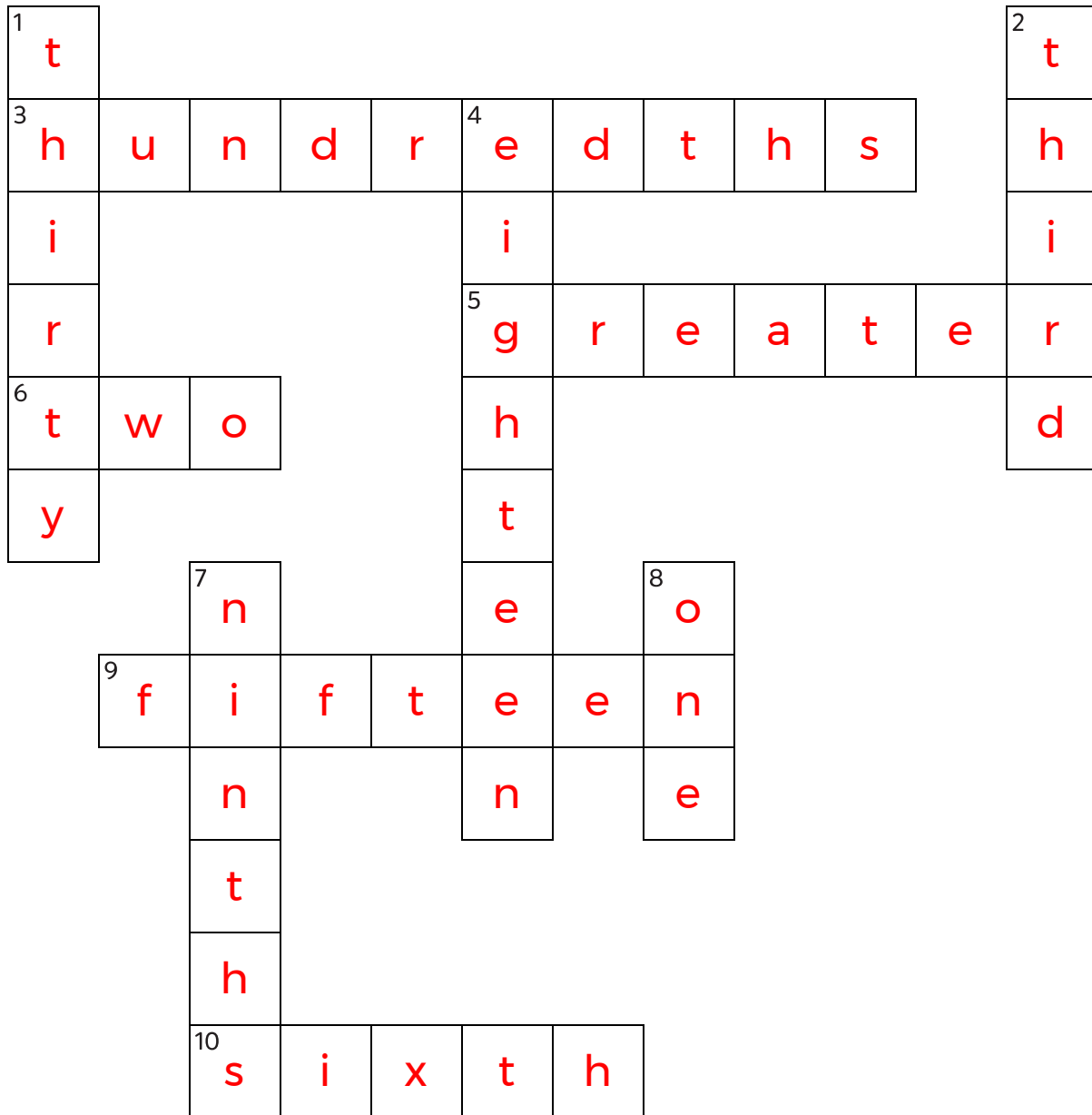
LEVEL

E

WEEK

9

Complete the crossword by filling in a word that fits each clue.



sixth one two fifteen greater thirty hundredths third eighteen ninths

ACROSS

3. $.24 + .13 = 37$ ____
5. $7/5 \times 25$ is ____ than 25
6. $308 \div 14 =$ twenty- ____
9. $1/3$ of 45
10. $1/3 \div 2 =$ one ____

DOWN

1. $3.0 =$ ____ tenths
2. $1,000 = 10$ to the ____ power
4. $30 - 5 \times 4 + 8$
7. $1/3 + 1/9 = 4$ ____
8. $.1$ is $1/10$ of ____

Name: _____

SNAKE

PACK

1

LEVEL

E

WEEK

9

Fill in each blank box in order, combining the numbers from the previous two boxes.

9	$\times 6$	54	$+ 0$	54	$\div 6$	9	$\times 7$	63
---	------------	----	-------	----	----------	---	------------	----

-9

9	$\div 2$	18	-45	63	$\times 7$	9	$\div 6$	54
---	----------	----	-----	----	------------	---	----------	----

$\times 7$

63	-35	28	$\div 4$	7	$\times 9$	63	-45	18
----	-----	----	----------	---	------------	----	-----	----

4		24	$\div 3$	8		30	$\div 5$	6
$\times 9$		-18		$\times 4$		+18		$\times 3$
36		42		32		12		18
-8		$\times 6$		-28		$\times 6$		+24
28	$\div 4$	7		4	$\div 2$	2		42

Name: _____

NUMTANGA

PACK

1

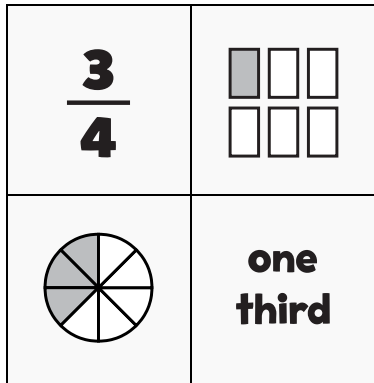
LEVEL

E

WEEK

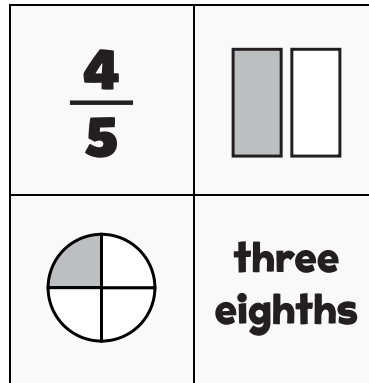
9

In each empty box, write the matching value between adjacent cards.



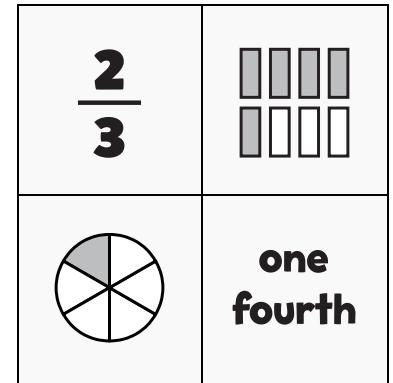
$\frac{3}{8}$

$\frac{3}{4}$

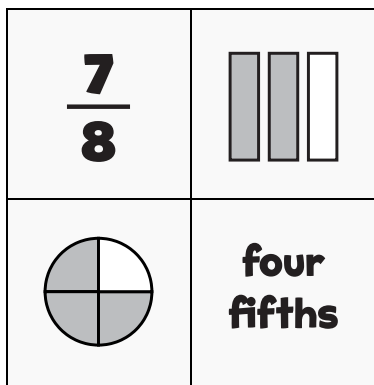


$\frac{1}{4}$

$\frac{1}{2}$

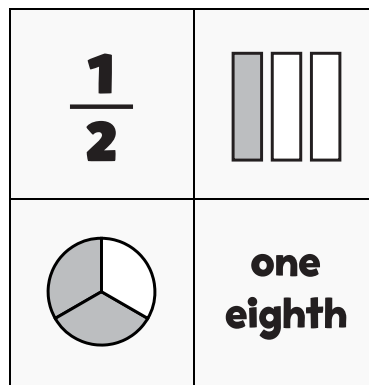


$\frac{1}{6}$



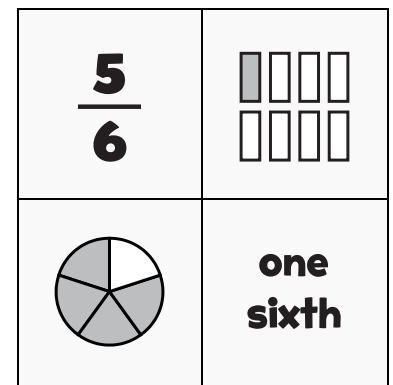
$\frac{2}{3}$

$\frac{7}{8}$

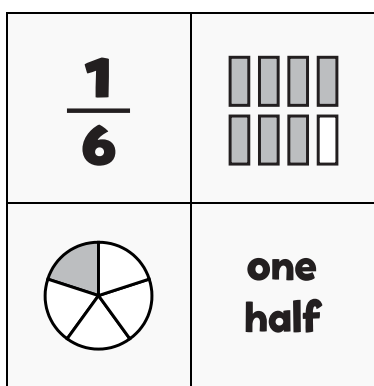


$\frac{1}{8}$

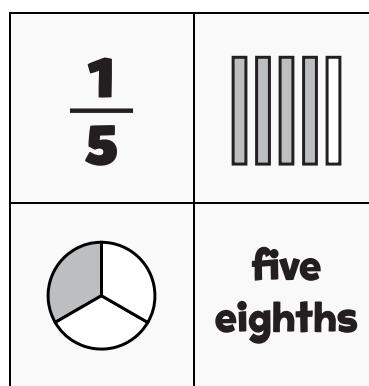
$\frac{1}{3}$



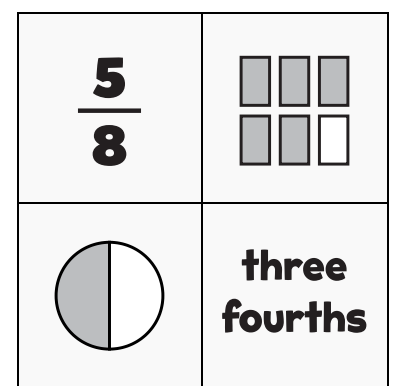
$\frac{5}{6}$



$\frac{1}{5}$



$\frac{5}{8}$



Name: _____

KAKOOMA

PACK

1

LEVEL

E

WEEK

9

In each 8-number group, find the one number that is the sum of two other numbers.
Use all 8 sums to create a final puzzle, then solve for the final answer.

8	23	3	14	21	20	1	10	24
14	+	24	18	+	10	13	+	25
9	18	19	8	17	19	17	2	5
12	7	14				5	1	7
19	+	22				25	+	11
17	11	9				21	2	17
23	4	22	17	11	13	15	17	21
20	+	7	25	+	4	19	+	12
5	14	10	19	18	16	23	3	1

Final Puzzle

23	18	25
19	+	7
14	17	15

Final Answer

25

Name: _____

EQUATO

PACK

1

LEVEL

E

WEEK

9

Fill in the empty boxes to make every horizontal and vertical equation correct.
Read equations left to right and top to bottom. Use every number in the bank once.

1 2 3 4 5 6 7 8 9

3	+	1	=	5	+	6	-	7
=		+		+		=		=
2	×	4	÷	8	=	9	-	8
×		-		+		×		+
7	×	1	-	5	+	4	=	6
-		-		-		÷		×
3	+	2	=	9	-	3	-	1
-		=		=		-		-
8	+	2	-	9	+	6	=	7