

Name: _____

PACK

1

LEVEL

K

WEEK

10

TANGY TUESDAY



Name: _____

PACK

1

LEVEL


K

WEEK

10

DIGICROSS

Complete the crossword by filling in a word that fits each clue.



three

tall

six

one

zero

greater

two

square

ACROSS

2. a ____ has four sides
3. the opposite of short
5. 1, 2, ____, 4, 5
6. 1 more than 0

DOWN

1. 5 is ____ than 3
2. four plus ____ makes ten
4. 0
5. $1+1$

Name: _____

SNAKE

PACK

1

LEVEL

K

WEEK

10

Fill in each blank box in order, combining the numbers from the previous two boxes.

3			+1				-1	
-1		+1		-2		+2		-3
-1		-1		+2		-1		+1
	+3				-1			2

1	+2		-1		+2		-1	
								+2
	+1		-1		+3		-3	
-4								
	+1		+2		-3		+4	5

Name: _____

PACK

1

LEVEL


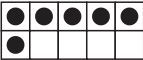
K


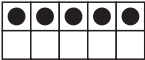
WEEK




10



NUMTANGA




In each empty box, write the matching value between adjacent cards.




8	
	one






0	
	seven




15	 
	three


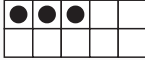
4	
	six

9	 
	eight

5	 
	two

3	   
	four

20	 
	five

1	
	ten

Name: _____

KAKOOMA

PACK

1

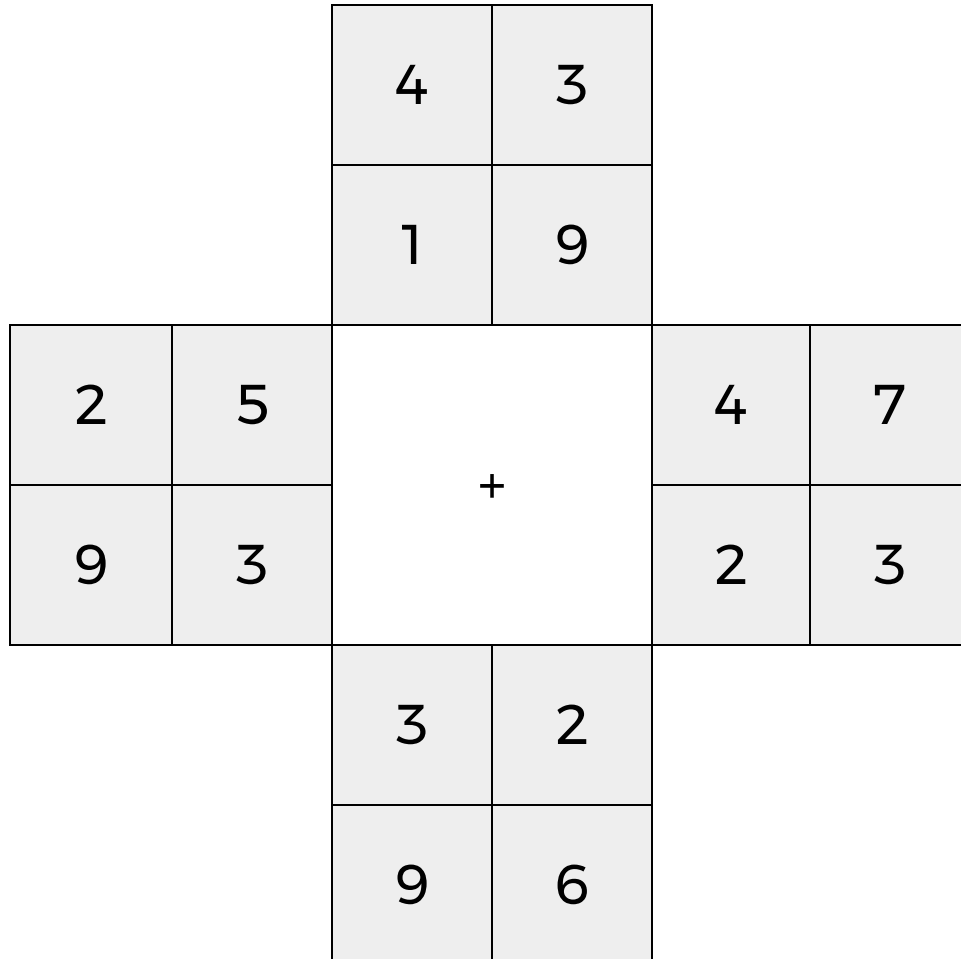
LEVEL

K

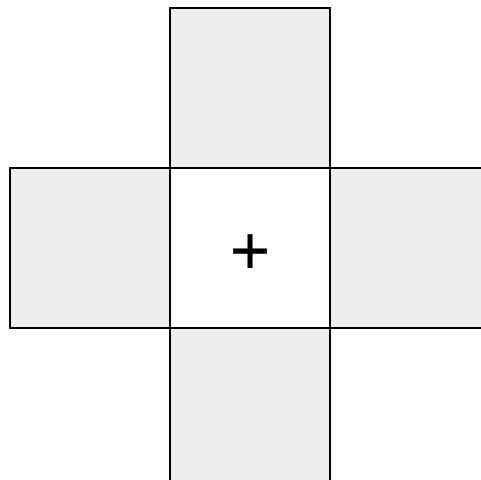
WEEK

10

In each 4-number group, find the one number that is the sum of two other numbers.
Use all 4 sums to create a final puzzle, then solve for the final answer.



Final Puzzle



Final Answer

--

Name: _____

EQUATO

PACK

1

LEVEL

K

WEEK

10

Fill in the empty boxes to make every horizontal and vertical equation correct.
Read equations left to right and top to bottom. Use every number in the bank once.

1 2 3 4 5

	=	3	-	
+		=		+
	=		-	1
=		-		=
5	-	2	=	