

Name: _____

PACK

1

LEVEL

K

WEEK

11

TANGY TUESDAY

TANGY TUESDAY PUZZLE PACK!

Fun brain puzzles that make you smarter!



Name: _____

DIGICROSS

PACK

1

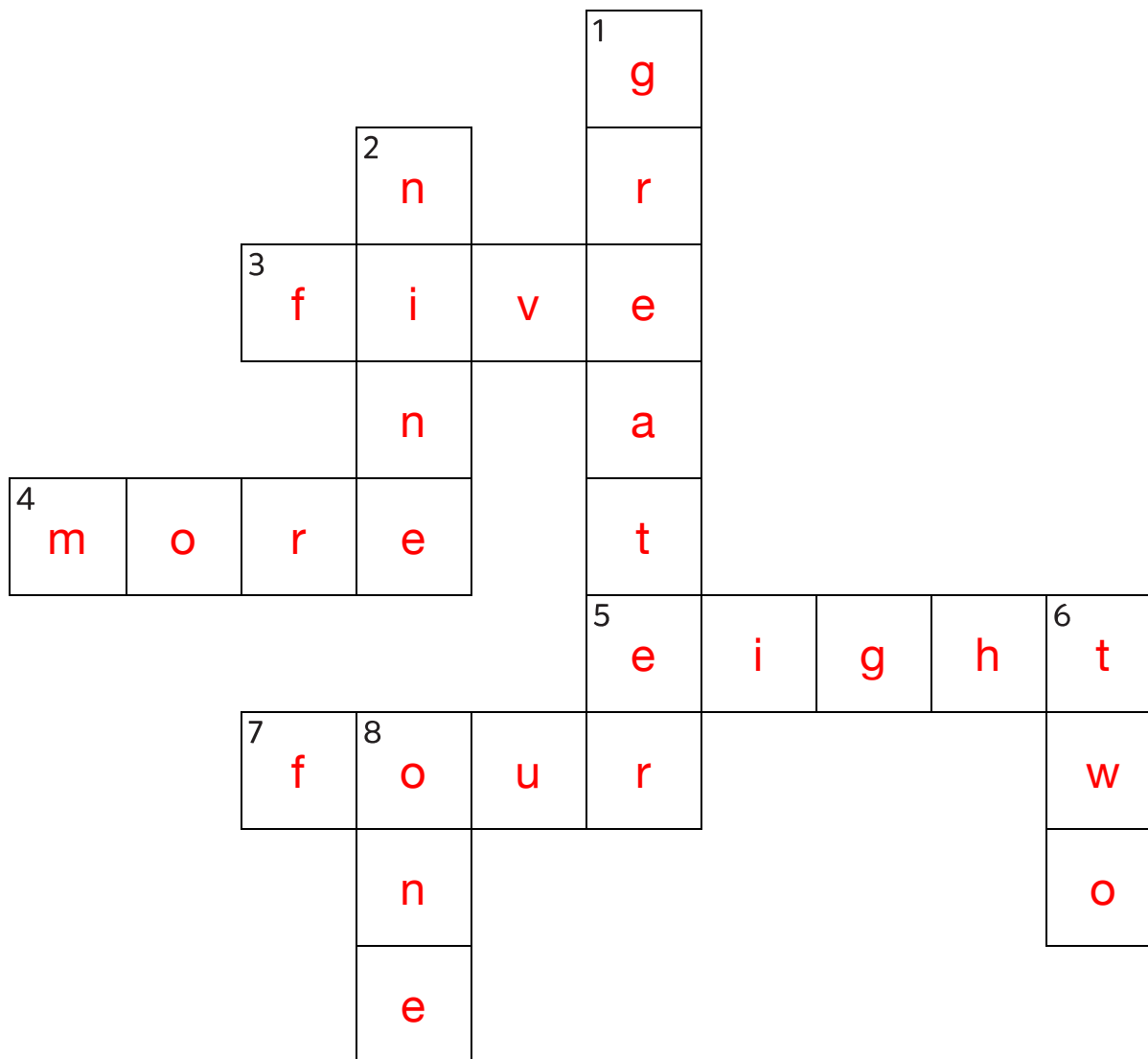
LEVEL

K

WEEK

11

Complete the crossword by filling in a word that fits each clue.



greater

one

more

two

nine

eight

four

five

ACROSS

3. 5
4. the opposite of less
5. $4 + 4$
7. a rectangle has ____ sides

DOWN

1. 3 is ____ than 2
2. one plus ____ makes ten
6. 1 less than 3
8. ____ 2, 3, 4, 5

Name: _____

SNAKE

PACK

1

LEVEL

K

WEEK

11

Fill in each blank box in order, combining the numbers from the previous two boxes.

4	-2	2	+1	3	+5	8	-6	2
								+1
3	+1	2	-5	7	+1	6	+3	3
+4								
7	-4	3	+2	5	+3	8	-3	5

7		3	-2	1		1	+4	5
-2		-5		+7		-1		-2
5		8		8		2		3
+3		+7		-2		-6		-2
8	-7	1		6	+2	8		1

Name: _____

PACK

1

LEVEL


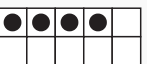
K

WEEK



11

NUMTANGA


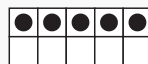
In each empty box, write the matching value between adjacent cards.

7	
	fifteen

4

2	
	nine



0

0	
	seven



15

9


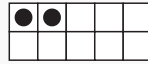
7

5	
	two

5

20	
	five


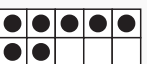
20

6	
	twenty


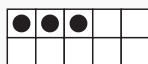
8

1


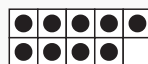
6

9	
	eight

10

1	
	ten

3

15	
	three

Name: _____

KAKOOMA

PACK

1

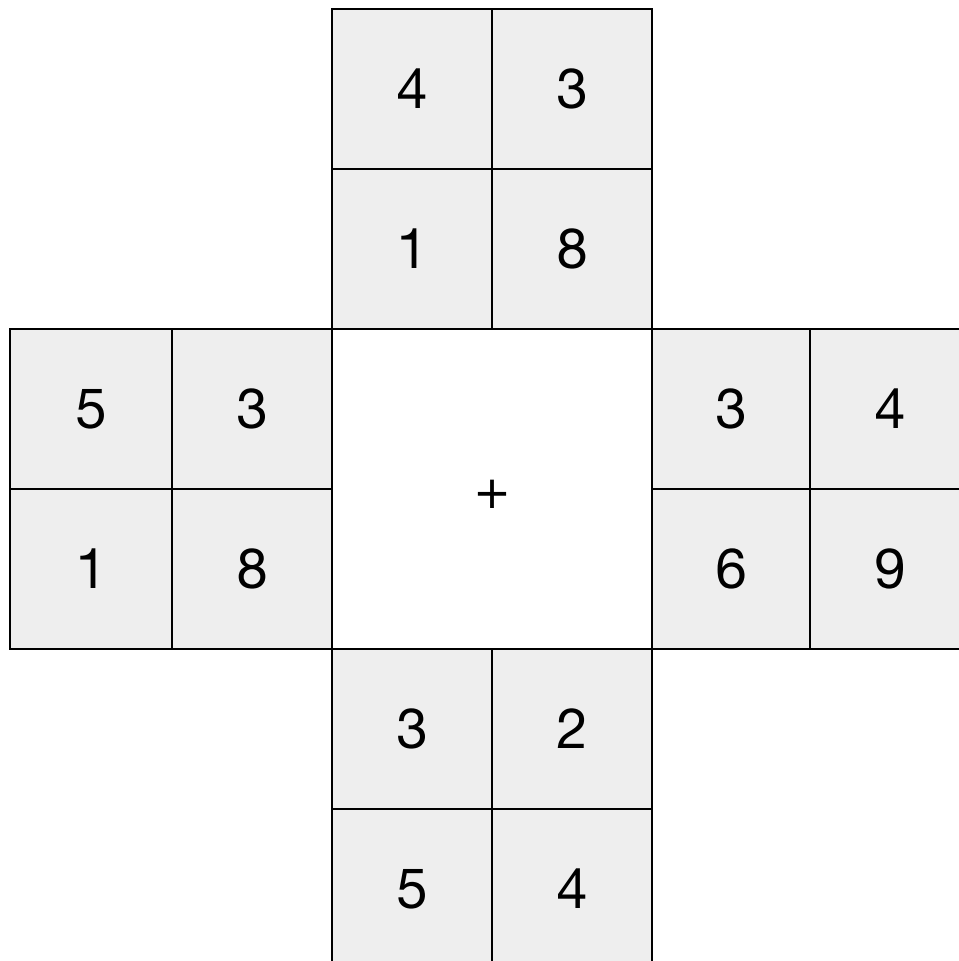
LEVEL

K

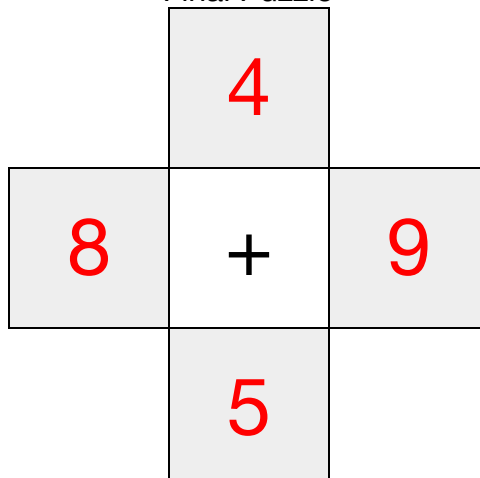
WEEK

11


In each 4-number group, find the one number that is the sum of two other numbers.
Use all 4 sums to create a final puzzle, then solve for the final answer.



Final Puzzle



Final Answer



Name: _____

EQUATO

PACK

1

LEVEL

K

WEEK

11

Fill in the empty boxes to make every horizontal and vertical equation correct.
Read equations left to right and top to bottom. Use every number in the bank once.

1	2	3	4	5
1	=	3	-	2
+		=		+
4	=	5	-	1
=		-		=
5	-	2	=	3