

Name: \_\_\_\_\_

PACK

1

LEVEL

K

WEEK

12

# TANGY TUESDAY

## TANGY TUESDAY PUZZLE PACK!

Fun brain puzzles that make you smarter!



Name: \_\_\_\_\_

# DIGICROSS

PACK

1


LEVEL

K

WEEK

12

Complete the crossword by filling in a word that fits each clue.



one

seventeen

five

smaller

more

ten

triangle

seven

## ACROSS

2. 7
4. 5 hens are \_\_\_\_ than 2 hens
6. a shape with 3 sides
7.  $2 + 3$

## DOWN

1.  $5 - 4$
2. 15, 16, \_\_\_\_, 18, 19
3. the opposite of bigger
5.  $6 + 4$

Name: \_\_\_\_\_

# SNAKE

PACK

1

LEVEL

K

WEEK

12

Fill in each blank box in order, combining the numbers from the previous two boxes.

6	+2	
---	----	--

		-2
--	--	----

	+2	
--	----	--

-7		
----	--	--

	+6		-2	
--	----	--	----	--

	+1		-2	
--	----	--	----	--

-1				-2
----	--	--	--	----

		+3	
--	--	----	--

+2		
----	--	--

	-5	3
--	----	---

2	+6	
---	----	--

		-6
--	--	----

	+4	
--	----	--

+1		
----	--	--

	-5		-1	
--	----	--	----	--

	+4		-3	
--	----	--	----	--

-2				+2
----	--	--	--	----

	+2	
--	----	--

-5		
----	--	--

	-1	2
--	----	---

Name: \_\_\_\_\_

PACK

1

LEVEL

K

WEEK

12

# NUMTANGA

In each empty box, write the matching value between adjacent cards.

<b>6</b>	
	<b>twenty</b>

<b>9</b>	
	<b>eight</b>

<b>3</b>	
	<b>four</b>

<b>10</b>	
	<b>zero</b>

<b>2</b>	
	<b>nine</b>

<b>1</b>	
	<b>ten</b>

<b>5</b>	
	<b>two</b>

<b>4</b>	
	<b>six</b>

<b>8</b>	
	<b>one</b>

Name: \_\_\_\_\_

# KAKOOMA

PACK

1

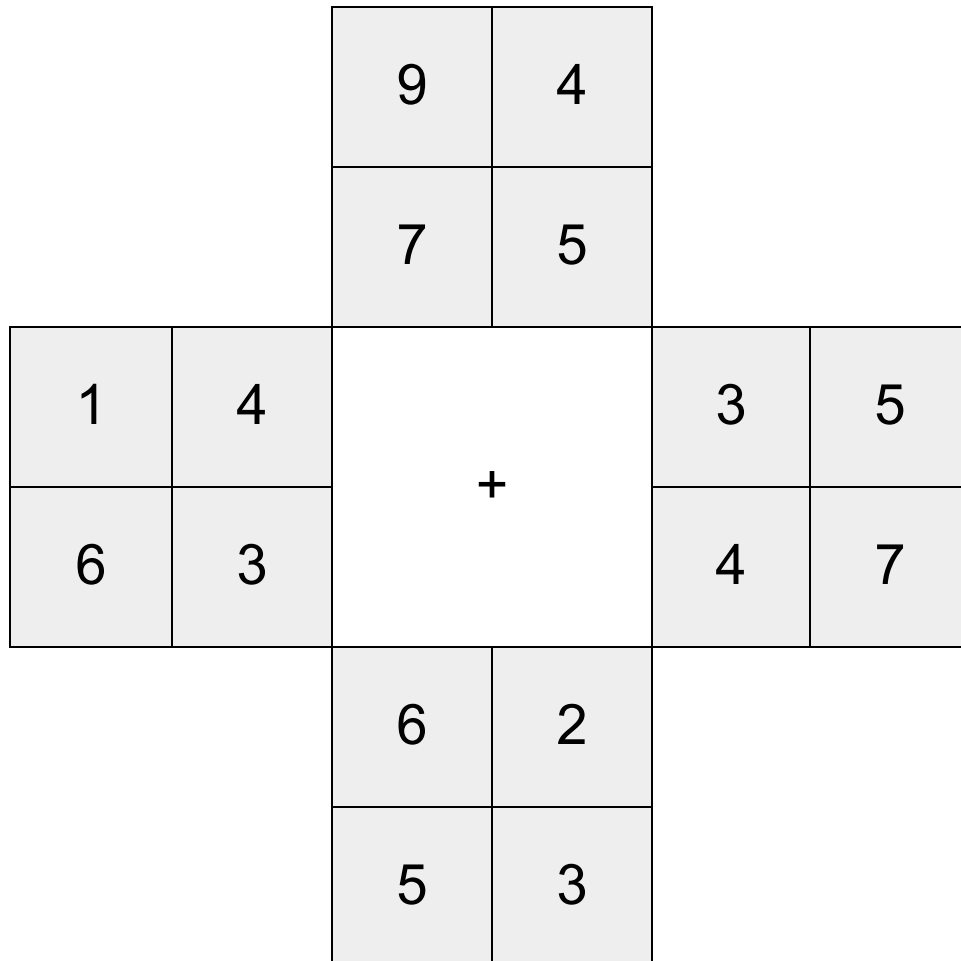
LEVEL

K

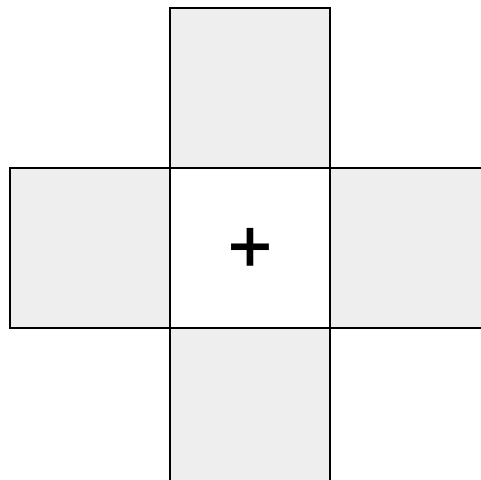
WEEK

12

In each 4-number group, find the one number that is the sum of two other numbers.  
Use all 4 sums to create a final puzzle, then solve for the final answer.



Final Puzzle



Final Answer

--

Name: \_\_\_\_\_

# EQUATO

PACK

1

LEVEL

K

WEEK

12

Fill in the empty boxes to make every horizontal and vertical equation correct.  
Read equations left to right and top to bottom. Use every number in the bank once.

1                      2                      3                      4                      5

	+	3	=	4
=		+		-
5	-		=	
-		=		=
	=		-	1