

Name: \_\_\_\_\_

PACK

1

LEVEL

K

WEEK

2

# TANGY TUESDAY



*Fun brain puzzles that make you smarter!*

Name: \_\_\_\_\_

# DIGICROSS

PACK

1


LEVEL

K

WEEK

2

Complete the crossword by filling in a word that fits each clue.



ten

three

greater

more

zero

five

four

eight

## ACROSS

- 3. the opposite of less
- 5. 5 is \_\_\_\_ than 4
- 7.  $5 + 5$
- 8. 0

## DOWN

- 1. a square has \_\_\_\_ sides
- 2. 2, 3, 4, \_\_\_\_, 6
- 4. two plus \_\_\_\_ makes ten
- 6. 1 less than 4

Name: \_\_\_\_\_

# SNAKE

PACK

1

LEVEL

K

WEEK

2

Fill in each blank box in order, combining the numbers from the previous two boxes.

3	+1		-3		+2		+1	
								-2
	+1		-2		+2	4		
-2								-1
	+4		-2		-1		+3	

4		+1			-2	
-1	-1		-2	+1		-1
+1	-2	+1	-2	+3		
	+1			+3		4

Name: \_\_\_\_\_

PACK

1

LEVEL



K



WEEK



2



# NUMTANGA


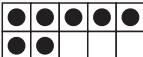
In each empty box, write the matching value between adjacent cards.



<b>1</b>	
	<b>ten</b>



<b>7</b>	
	<b>fifteen</b>



<b>3</b>	
	<b>four</b>


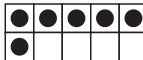
<b>5</b>	
	<b>two</b>

<b>9</b>	
	<b>eight</b>

<b>10</b>	
	<b>zero</b>

<b>0</b>	
	<b>seven</b>

<b>15</b>	
	<b>three</b>

<b>8</b>	
	<b>one</b>

Name: \_\_\_\_\_

# KAKOOMA

PACK

1

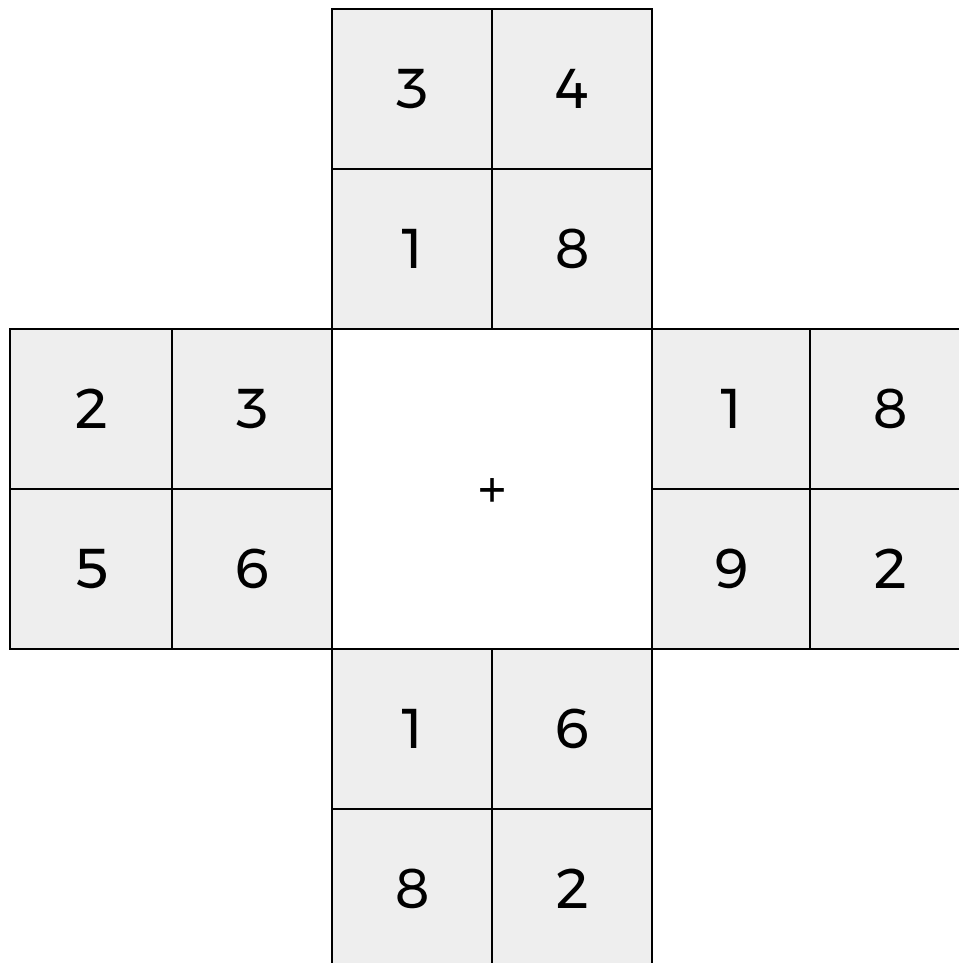
LEVEL

K

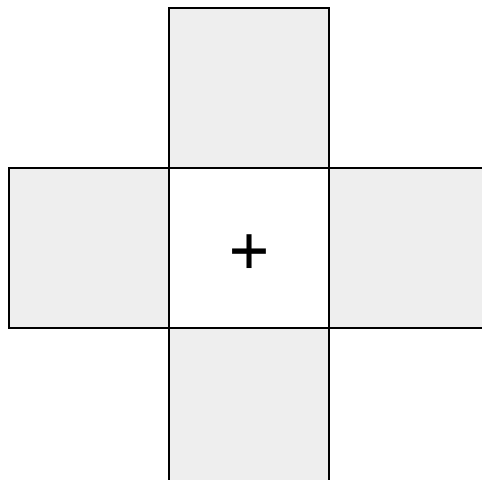
WEEK

2

In each 4-number group, find the one number that is the sum of two other numbers.  
Use all 4 sums to create a final puzzle, then solve for the final answer.



Final Puzzle



Final Answer

--

Name: \_\_\_\_\_

# EQUATO

PACK

1

LEVEL

K

WEEK

2

Fill in the empty boxes to make every horizontal and vertical equation correct.  
Read equations left to right and top to bottom. Use every number in the bank once.

1                      2                      3                      4                      5

	=	3	-	
+		=		+
	=		-	1
=		-		=
5	-	2	=	

