

Name: _____

PACK

1

LEVEL

K

WEEK

5

TANGY TUESDAY



Name: _____

DIGICROSS

PACK

1


LEVEL

K

WEEK

5

Complete the crossword by filling in a word that fits each clue.



greater

four

three

six

more

square

five

one

ACROSS

4. 2, 3, 4, ____, 6
5. 1 more than 0
6. 3
7. a ____ has four sides

DOWN

1. 3 is ____ than 2
2. $2 + 2$
3. the opposite of less
7. four plus ____ makes ten

Name: _____

PACK

1

LEVEL

K

WEEK

5

SNAKE

Fill in each blank box in order, combining the numbers from the previous two boxes.

1	+1	
		+1
	+2	
-1		
	-2	+1

	-1		-2	
-1				+4
+2				

4	+1		-3		-1		+2	
								-1
	-1		+1		+1		+1	
-1								
	+1		-1		+2		-3	2

Name: _____

PACK

1

LEVEL



K



WEEK



5



NUMTANGA



In each empty box, write the matching value between adjacent cards.



4	
	six


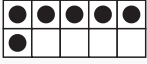
2	
	nine


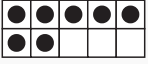
10	
	zero


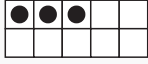
20	
	five

6	
	twenty

15	
	three

8	
	one

9	
	eight

1	
	ten

Name: _____

KAKOOMA

PACK

1

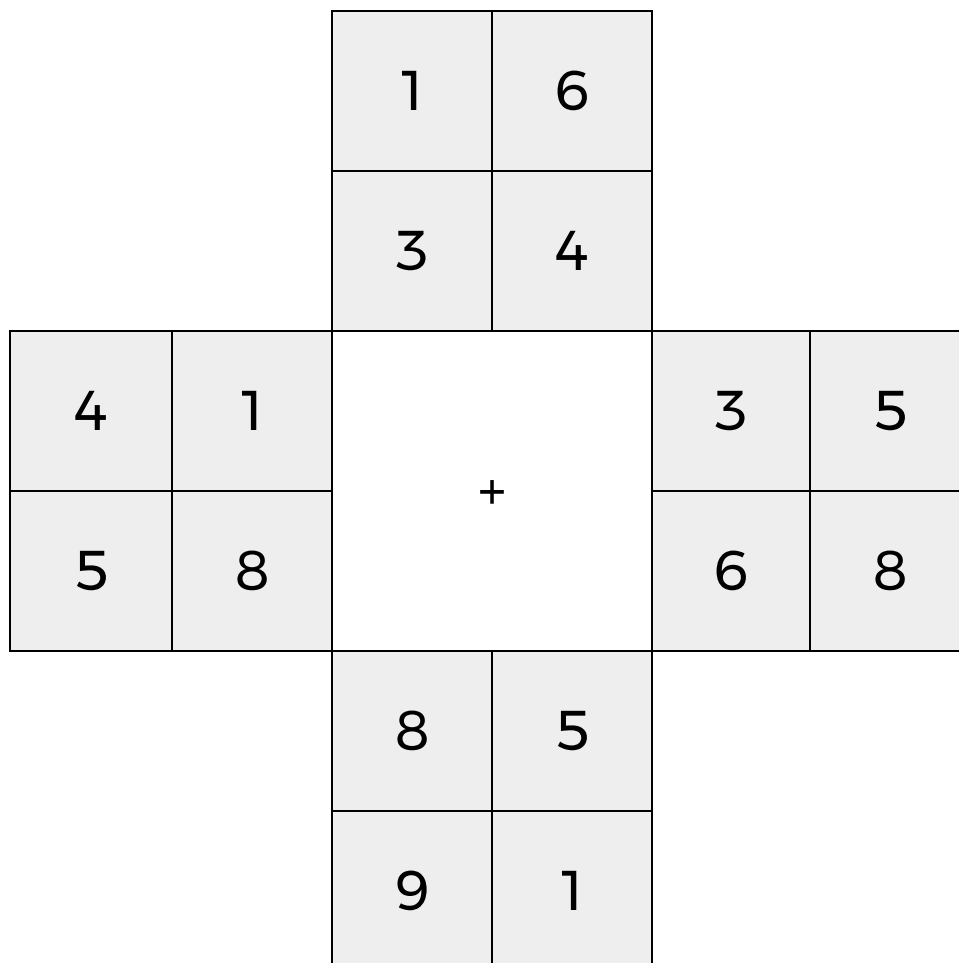
LEVEL

K

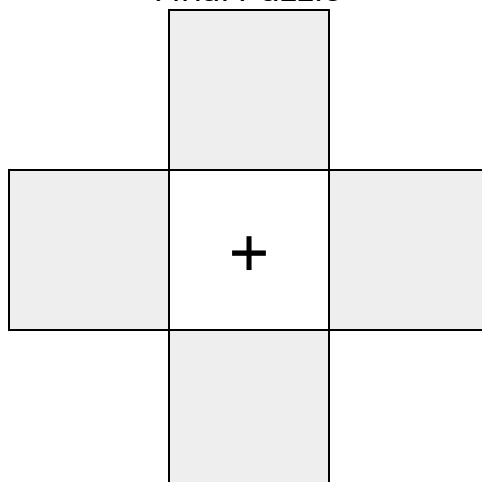
WEEK

5

In each 4-number group, find the one number that is the sum of two other numbers.
Use all 4 sums to create a final puzzle, then solve for the final answer.



Final Puzzle



Final Answer

--

Name: _____

EQUATO

PACK

1

LEVEL

K

WEEK

5

Fill in the empty boxes to make every horizontal and vertical equation correct.
Read equations left to right and top to bottom. Use every number in the bank once.

1 2 3 4 5

	-	4	=	
-		-		=
	+		=	5
=		=		-
3	+	1	=	