

Name: _____

PACK

1

LEVEL

K

WEEK

5

TANGY TUESDAY



Name: _____

DIGICROSS

PACK

1

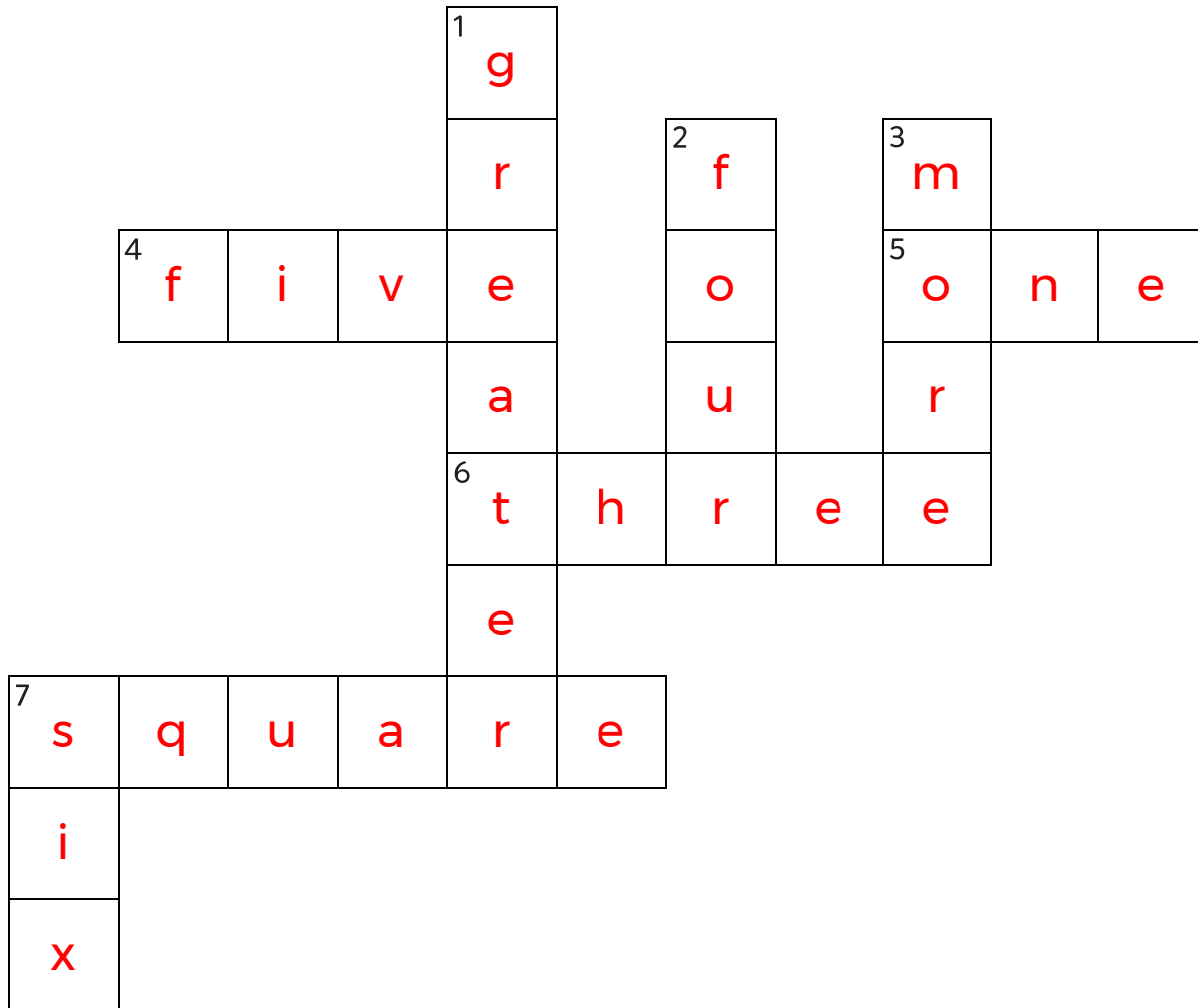
LEVEL

K

WEEK

5

Complete the crossword by filling in a word that fits each clue.



greater

four

three

six

more

square

five

one

ACROSS

4. 2, 3, 4, ____, 6
5. 1 more than 0
6. 3
7. a ____ has four sides

DOWN

1. 3 is ____ than 2
2. $2 + 2$
3. the opposite of less
7. four plus ____ makes ten

Name: _____

SNAKE

PACK

1

LEVEL

K

WEEK

5

Fill in each blank box in order, combining the numbers from the previous two boxes.

1	+1	2		4	-1	3	-2	1
		+1		-1				+4
5	+2	3		5		3	-2	5
-1				+2		-2		
4	-2	2	+1	3		1	+1	2

4	+1	5	-3	2	-1	1	+2	3
								-1
4	-1	5	+1	4	+1	3	+1	2
-1								
3	+1	4	-1	3	+2	5	-3	2

Name: _____

PACK

1

LEVEL



K

WEEK



5

NUMTANGA



In each empty box, write the matching value between adjacent cards.

4	
	six

4

2	
	nine



0

10	
	zero



5

2



15

20	
	five

20

6	
	twenty


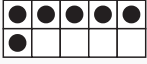
6

15	
	three


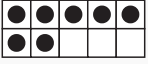
1

7


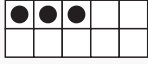
3

8	
	one

8

9	
	eight

10

1	
	ten

Name: _____

KAKOOMA

PACK

1

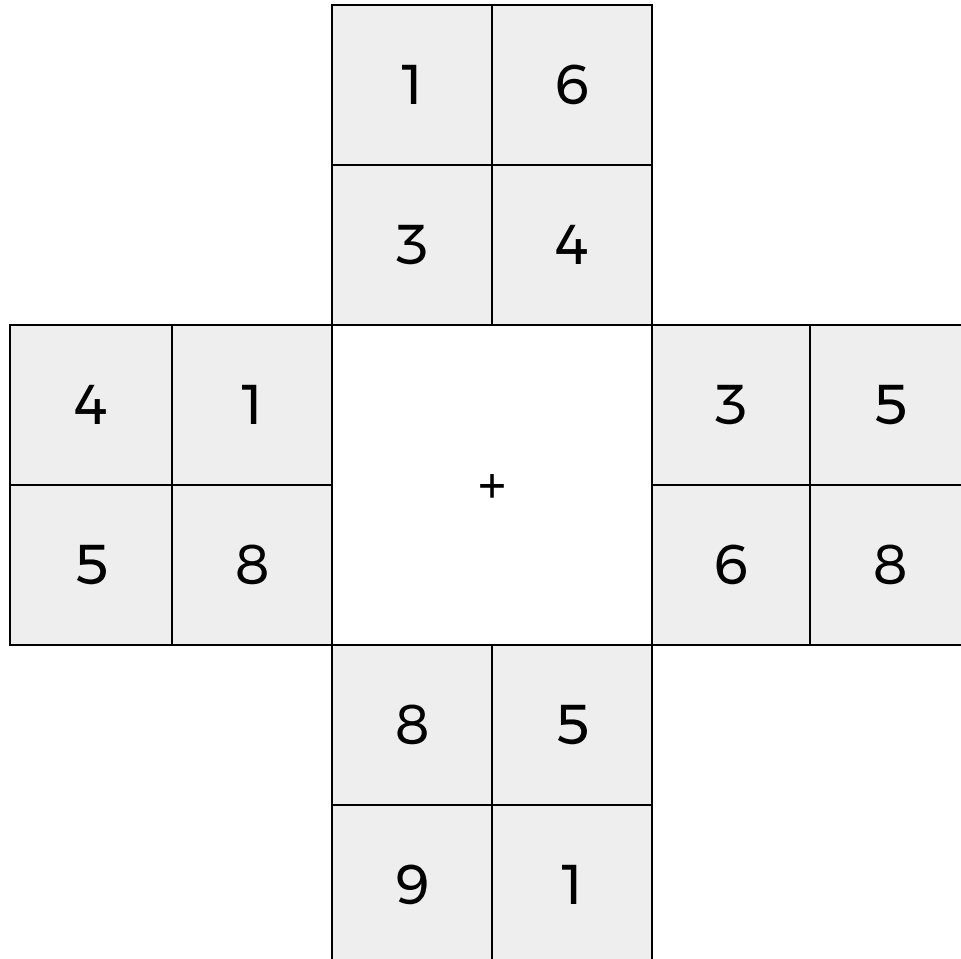
LEVEL

K

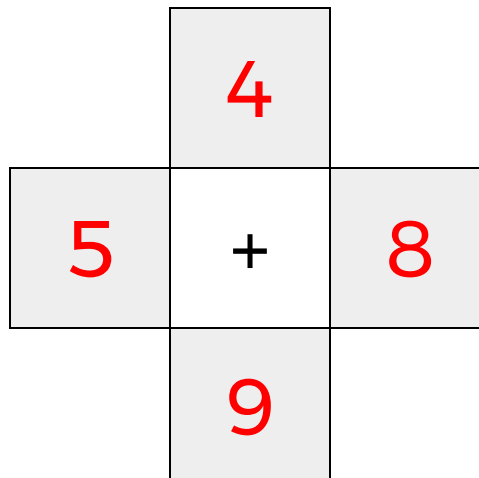
WEEK

5


In each 4-number group, find the one number that is the sum of two other numbers.
Use all 4 sums to create a final puzzle, then solve for the final answer.



Final Puzzle



Final Answer



Name: _____

EQUATO

PACK

1

LEVEL

K

WEEK

5

Fill in the empty boxes to make every horizontal and vertical equation correct.
Read equations left to right and top to bottom. Use every number in the bank once.

1	2	3	4	5
5	-	4	=	1
-		-		=
2	+	3	=	5
=		=		-
3	+	1	=	4