

Name: _____

PACK

1

LEVEL

K

WEEK

6

TANGY TUESDAY

TANGY TUESDAY PUZZLE PACK!

Fun brain puzzles that make you smarter!



Name: _____

PACK

1

LEVEL


K

WEEK

6

DIGICROSS

Complete the crossword by filling in a word that fits each clue.



ten

five

tall

eight

three

six

greater

four

ACROSS

3. four plus ____ makes ten
4. 3 is ____ than 2
6. the opposite of short
7. 1 less than 4

DOWN

1. a square has ____ sides
2. 1, 2, 3, 4, ____
5. $4 + 4$
6. 10

Name: _____

SNAKE

PACK

1

LEVEL

K

WEEK

6

Fill in each blank box in order, combining the numbers from the previous two boxes.

4			+2			-4	
+1		-2		-3		+2	+4
-3		+3		+1		+2	-3
	-1				-1		2

4	-1		+1		-2		+3	
								-2
	+1		-2		+3	5		
+1								-1
	-3		+1		+1		+1	

Name: _____

NUMTANGA

PACK

1



LEVEL



K



WEEK



6


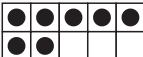
In each empty box, write the matching value between adjacent cards.


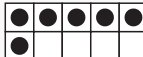
7	
	fifteen



4	
	six



20	
	five



15	
	three

9	
	eight

8	
	one

3	
	four

6	
	twenty

2	
	nine

Name: _____

KAKOOMA

PACK

1

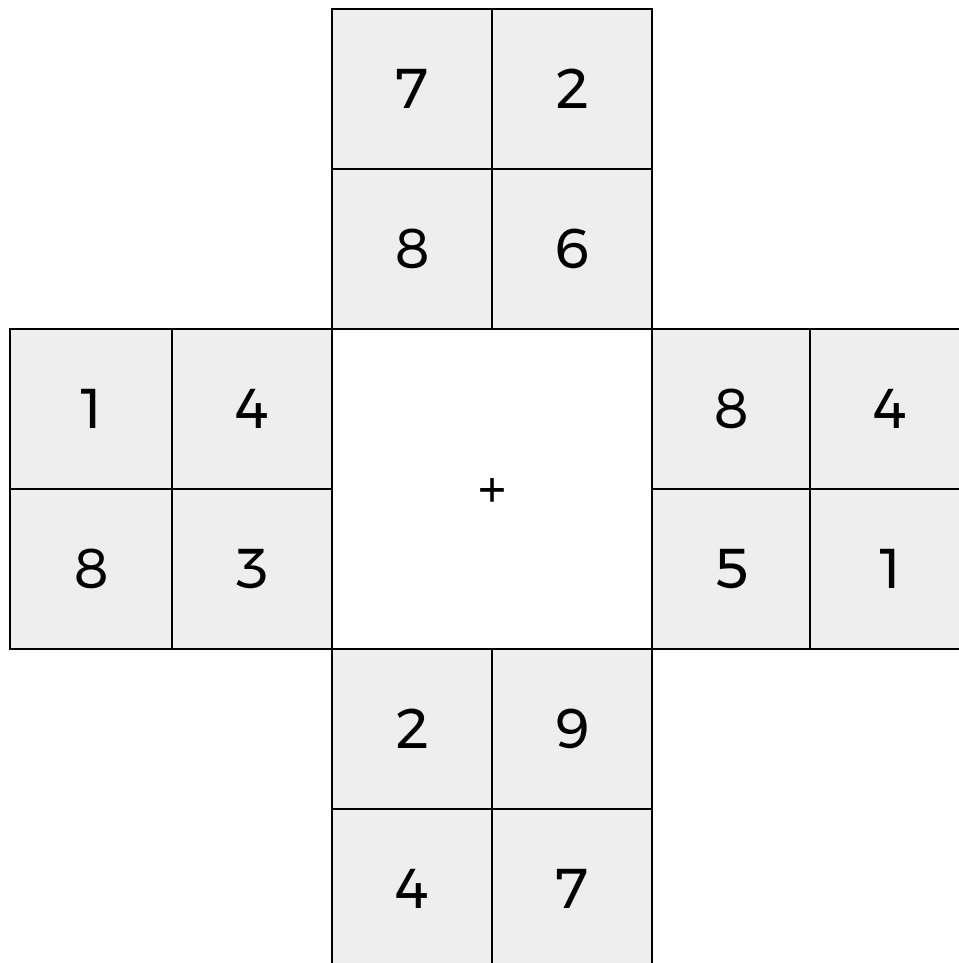
LEVEL

K

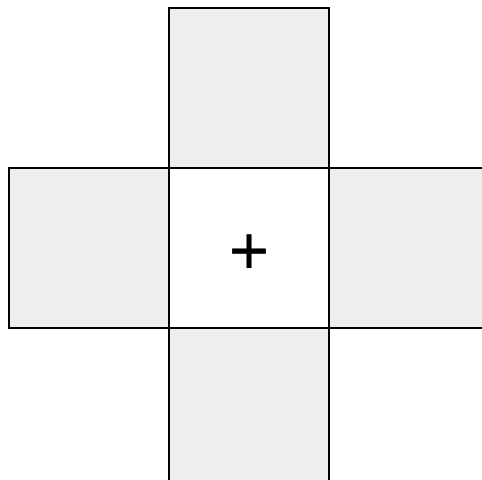
WEEK

6

In each 4-number group, find the one number that is the sum of two other numbers.
Use all 4 sums to create a final puzzle, then solve for the final answer.



Final Puzzle



Final Answer

--

Name: _____

EQUATO

PACK

1

LEVEL

K

WEEK

6

Fill in the empty boxes to make every horizontal and vertical equation correct.
Read equations left to right and top to bottom. Use every number in the bank once.

1 2 3 4 5

5	-	3	=	
-		+		=
	+		=	
=		=		-
1	=	4	-	