

Name: _____

PACK

1

LEVEL

K

WEEK

6

TANGY TUESDAY

TANGY TUESDAY PUZZLE PACK!

Fun brain puzzles that make you smarter!



Name: _____

DIGICROSS

PACK

1

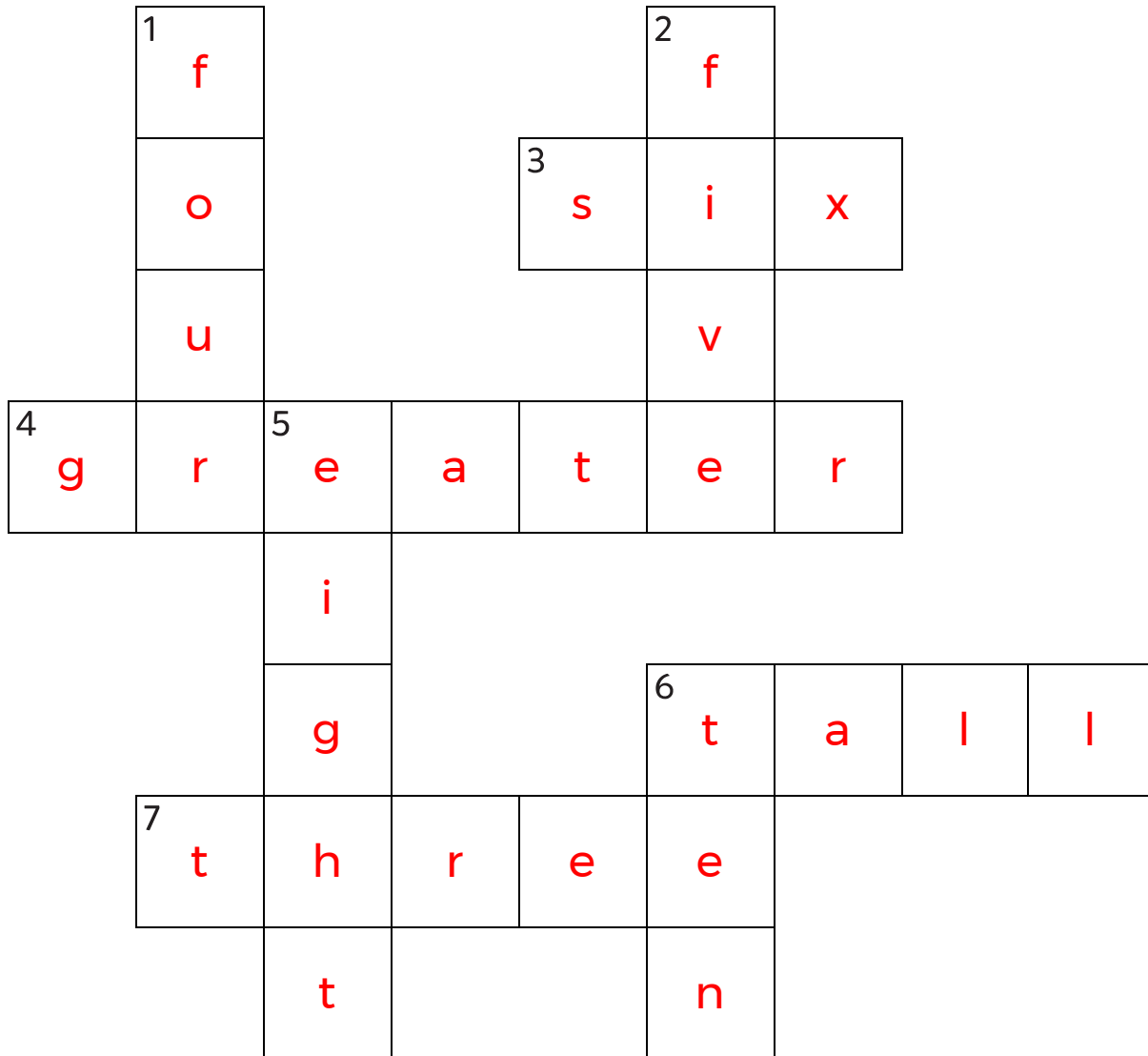
LEVEL

K

WEEK

6

Complete the crossword by filling in a word that fits each clue.



ten

five

tall

eight

three

six

greater

four

ACROSS

3. four plus ____ makes ten
4. 3 is ____ than 2
6. the opposite of short
7. 1 less than 4

DOWN

1. a square has ____ sides
2. 1, 2, 3, 4, ____
5. $4 + 4$
6. 10

Name: _____

SNAKE

PACK

1

LEVEL

K

WEEK

6

Fill in each blank box in order, combining the numbers from the previous two boxes.

4		2	+2	4		5	-4	1
+1		-2		-3		+2		+4
5		4		1		3		5
-3		+3		+1		+2		-3
2	-1	1		2	-1	1		2

4	-1	3	+1	4	-2	2	+3	5
								-2
3	+1	4	-2	2	+3	5		3
+1								-1
2	-3	5	+1	4	+1	3	+1	2

Name: _____

PACK

1

LEVEL


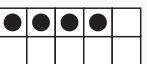
K

WEEK

6


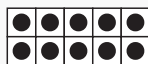
NUMTANGA

In each empty box, write the matching value between adjacent cards.

7	
	fifteen



15

4



4	
	six

10

5



20	
	five

1

15	
	three


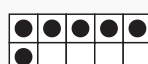
3

9



9	
	eight

7


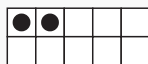
8

8	
	one



0

3	
	four

20

6	
	twenty

2

2	
	nine

Name: _____

KAKOOMA

PACK

1

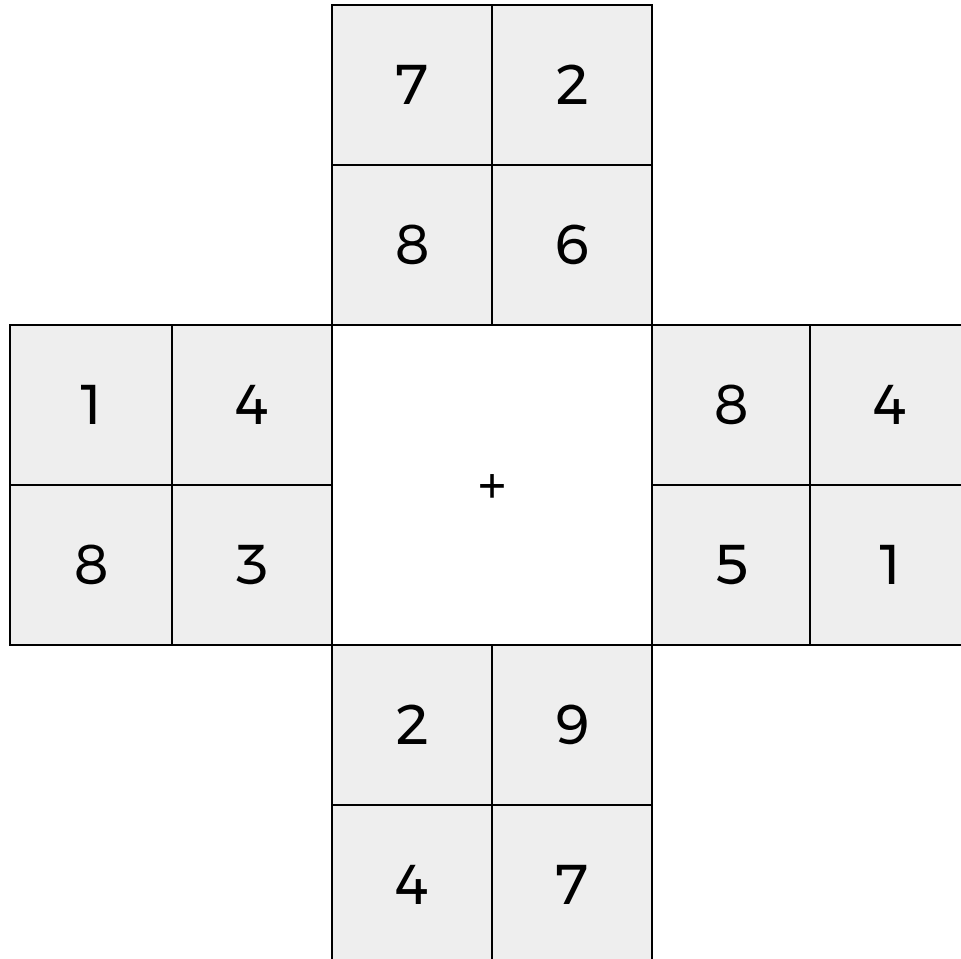
LEVEL

K

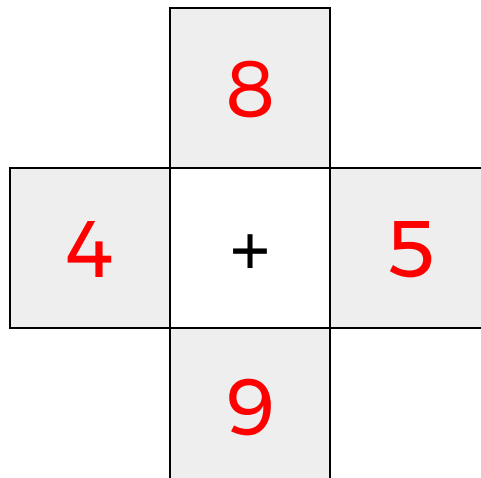
WEEK

6


In each 4-number group, find the one number that is the sum of two other numbers.
Use all 4 sums to create a final puzzle, then solve for the final answer.



Final Puzzle



Final Answer



Name: _____

EQUATO

PACK

1

LEVEL

K

WEEK

6

Fill in the empty boxes to make every horizontal and vertical equation correct.
Read equations left to right and top to bottom. Use every number in the bank once.

1	2	3	4	5
5	-	3	=	2
-		+		=
4	+	1	=	5
=		=		-
1	=	4	-	3