

Name: _____

PACK

1

LEVEL

K

WEEK

9

TANGY TUESDAY

TANGY TUESDAY PUZZLE PACK!

Fun brain puzzles that make you smarter!

Name: _____

DIGICROSS

PACK

1

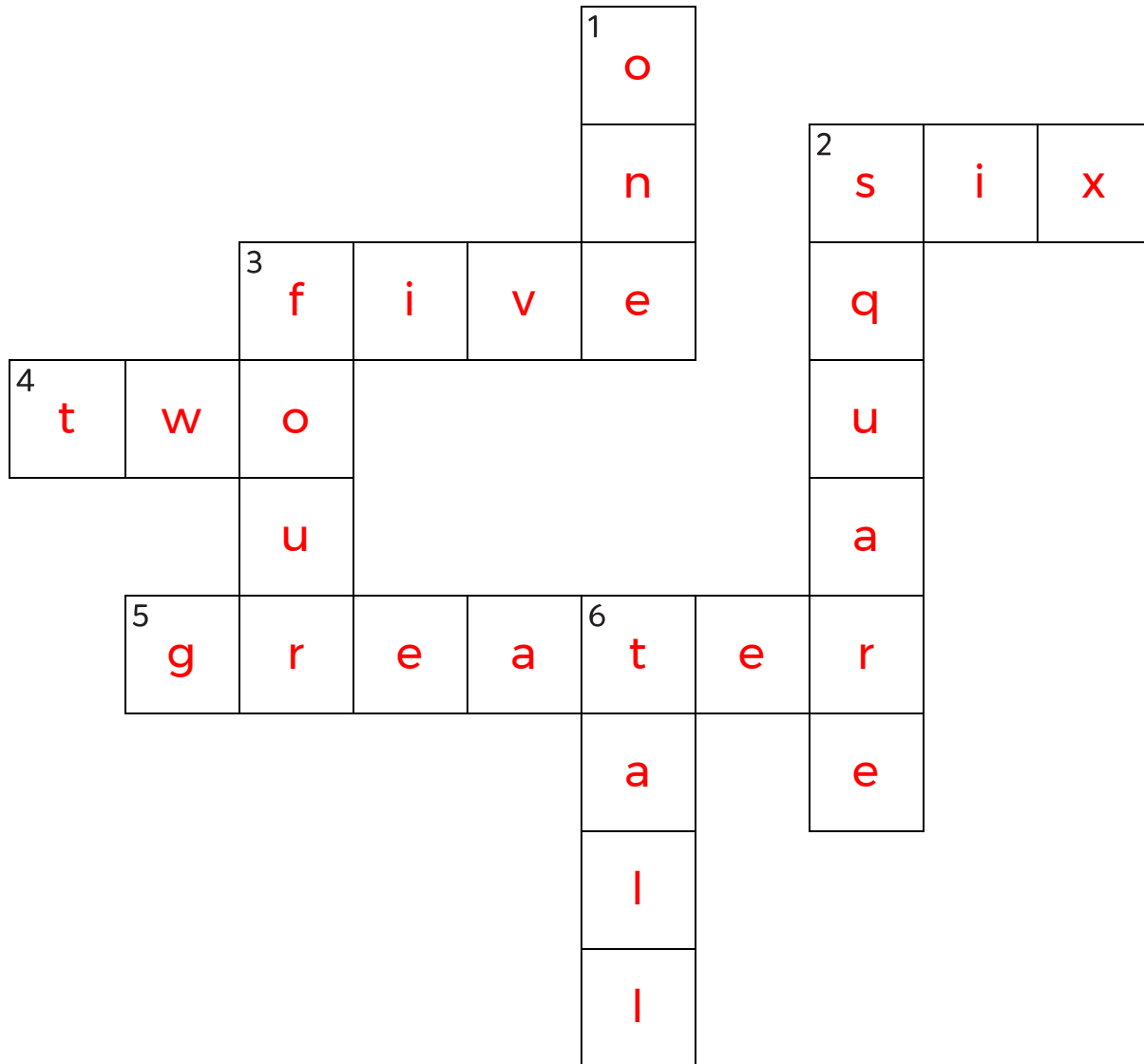
LEVEL

K

WEEK

9

Complete the crossword by filling in a word that fits each clue.



greater

four

tall

two

five

square

one

six

ACROSS

2. four plus ____ makes ten
3. 5
4. 1, ____, 3, 4, 5
5. 5 is ____ than 4

DOWN

1. 1 more than 0
2. a ____ has four sides
3. $2 + 2$
6. the opposite of short

Name: _____

SNAKE

PACK

1

LEVEL

K

WEEK

9

Fill in each blank box in order, combining the numbers from the previous two boxes.

| | | | | | | | | |
|----|----|----|----|----|----|----|----|----|
| 3 | -2 | 1 | | 4 | -2 | 2 | +3 | 5 |
| | | +4 | | +3 | | | | -2 |
| 4 | -1 | 5 | | 1 | | 1 | -2 | 3 |
| -2 | | | | -2 | | +3 | | |
| 2 | +2 | 4 | -1 | 3 | | 4 | +1 | 5 |

| | | | | | | | | |
|----|----|---|----|---|----|---|----|----|
| 5 | -1 | 4 | -2 | 2 | +2 | 4 | +1 | 5 |
| | | | | | | | | -2 |
| 4 | +1 | 5 | -1 | 4 | -3 | 1 | | 3 |
| +2 | | | | | | | | -2 |
| 2 | -2 | 4 | +3 | 1 | -1 | 2 | +1 | 1 |

Name: _____

PACK

1

LEVEL


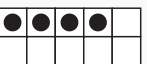
K

WEEK


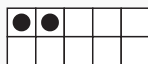
9

NUMTANGA



In each empty box, write the matching value between adjacent cards.

| | |
|--|---|
| 7 |  |
|  | fifteen |

7

| | |
|---|---|
| 6 |  |
|  | twenty |


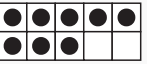
2

| | |
|---|---|
| 2 |  |
|  | nine |


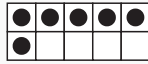
4

6


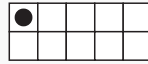
9

| | |
|--|--|
| 3 |  |
|  | four |

8

| | |
|---|---|
| 8 |  |
|  | one |


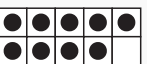
1

| | |
|---|---|
| 20 |  |
|  | five |



3

0


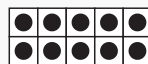
5

| | |
|--|---|
| 15 |  |
|  | three |

15

| | |
|---|---|
| 10 |  |
|  | zero |

10

| | |
|---|---|
| 4 |  |
|  | six |

Name: _____

KAKOOMA

PACK

1

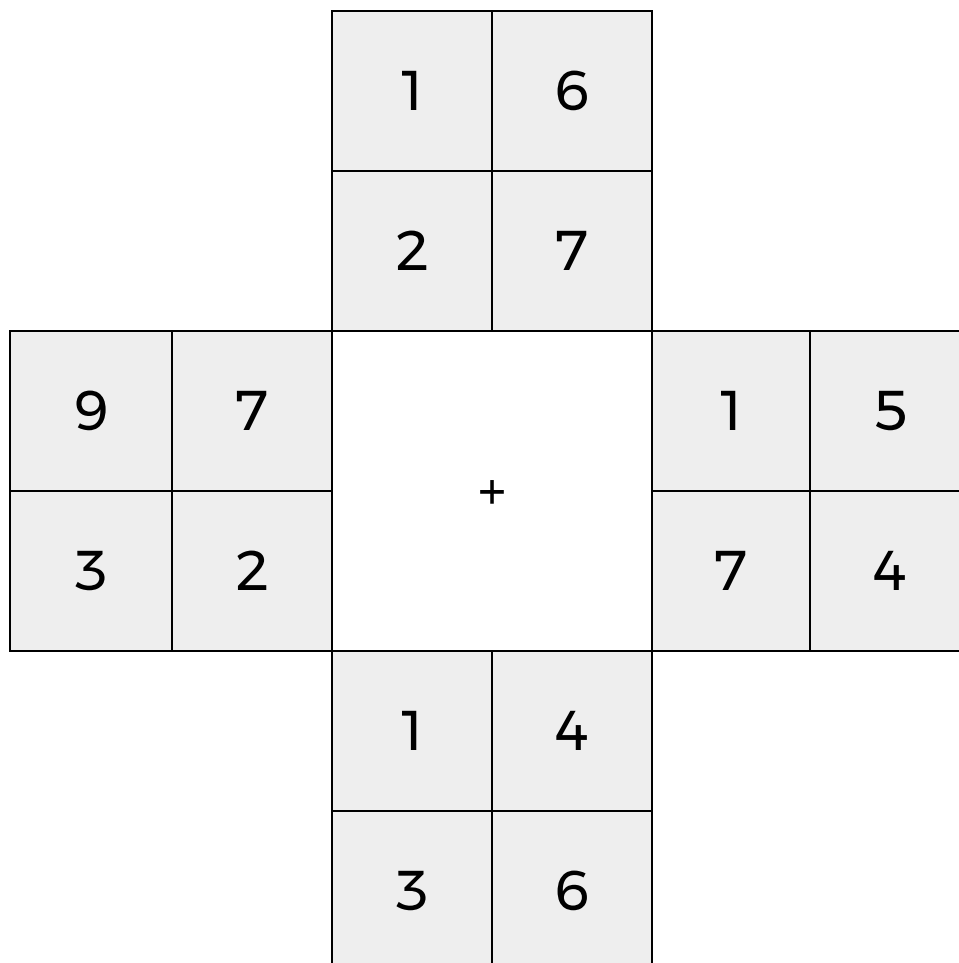
LEVEL

K

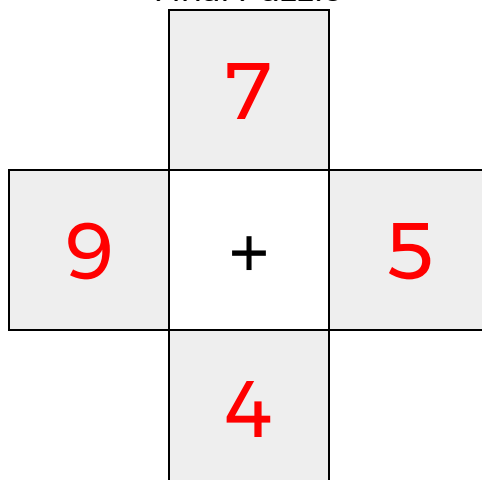
WEEK

9


In each 4-number group, find the one number that is the sum of two other numbers.
Use all 4 sums to create a final puzzle, then solve for the final answer.



Final Puzzle



Final Answer



Name: _____

EQUATO

PACK

1

LEVEL

K

WEEK

9

Fill in the empty boxes to make every horizontal and vertical equation correct.
Read equations left to right and top to bottom. Use every number in the bank once.

| 1 | 2 | 3 | 4 | 5 |
|---|---|---|---|---|
| 1 | = | 5 | - | 4 |
| + | | - | | = |
| 3 | + | 2 | = | 5 |
| = | | = | | - |
| 4 | - | 3 | = | 1 |